





Usa le griglie fornite per risolvere ogni operazione.


1) $46 \times 30 =$




2) $40 \times 25 =$




3) $30 \times 29 =$




4) $30 \times 23 =$



5) $20 \times 22 =$



6) $20 \times 29 =$



Risposte

1. _____

2. _____

3. _____

4. _____

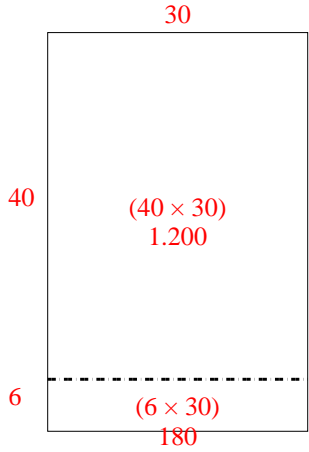
5. _____

6. _____

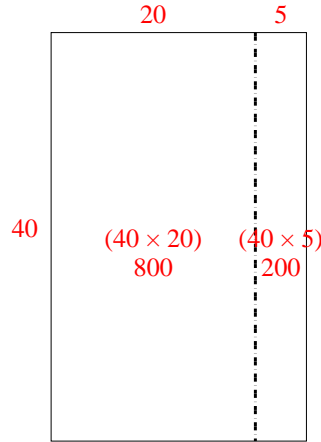


Usa le griglie fornite per risolvere ogni operazione.

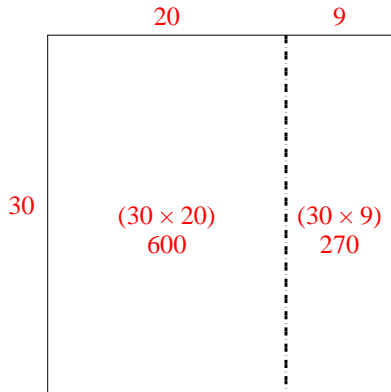
1) $46 \times 30 =$



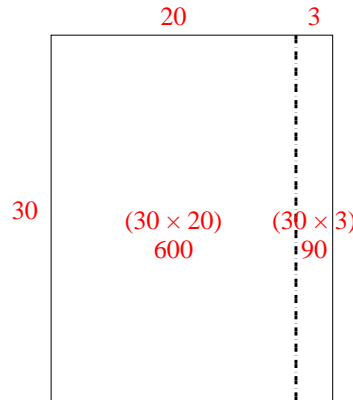
2) $40 \times 25 =$



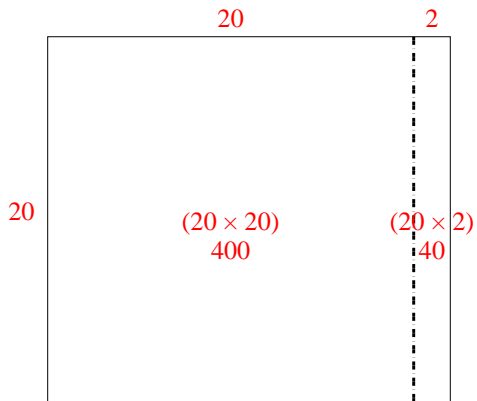
3) $30 \times 29 =$



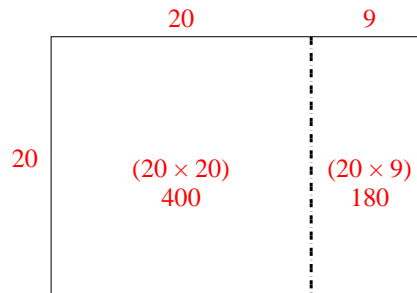
4) $30 \times 23 =$



5) $20 \times 22 =$



6) $20 \times 29 =$



Risposte

1. 1.380

2. 1.000

3. 870

4. 690


5. 440

6. 580




Usa le griglie fornite per risolvere ogni operazione.


1) $20 \times 23 =$




2) $29 \times 20 =$




3) $20 \times 24 =$




4) $26 \times 20 =$



5) $25 \times 20 =$



6) $20 \times 21 =$



Risposte

1. _____

2. _____

3. _____

4. _____

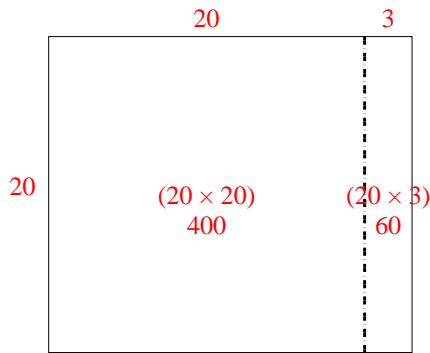
5. _____

6. _____

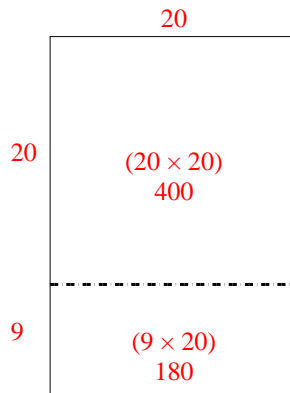


Usa le griglie fornite per risolvere ogni operazione.

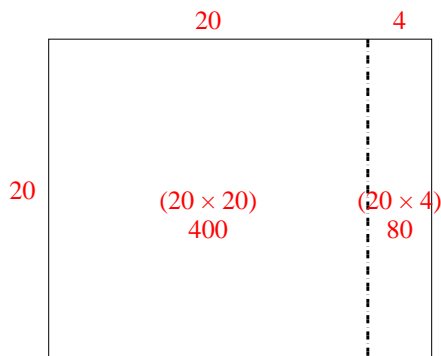
1) $20 \times 23 =$



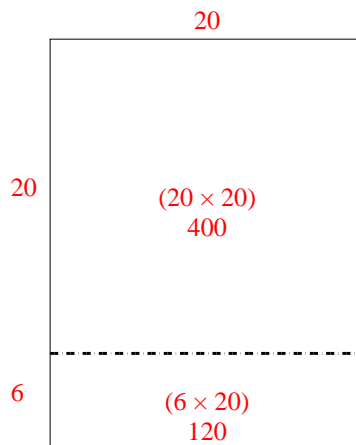
2) $29 \times 20 =$



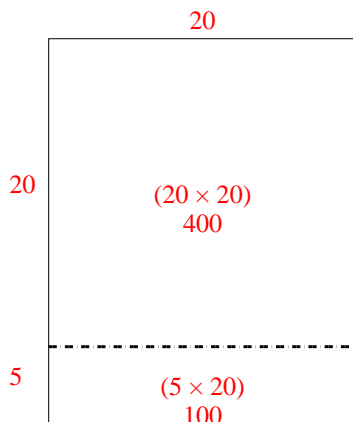
3) $20 \times 24 =$



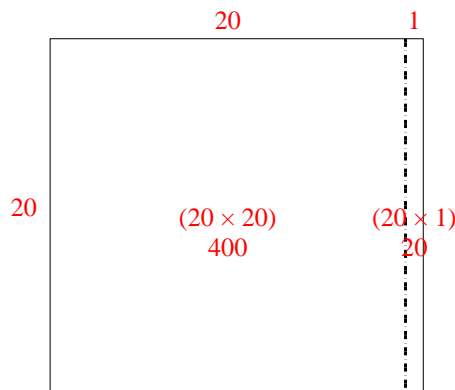
4) $26 \times 20 =$



5) $25 \times 20 =$



6) $20 \times 21 =$



Risposte

1. 460

2. 580

3. 480

4. 520


5. 500

6. 420




Usa le griglie fornite per risolvere ogni operazione.


1) $21 \times 30 =$




2) $21 \times 20 =$




3) $20 \times 26 =$




4) $20 \times 23 =$



5) $20 \times 22 =$



6) $24 \times 20 =$



Risposte

1. _____

2. _____

3. _____

4. _____

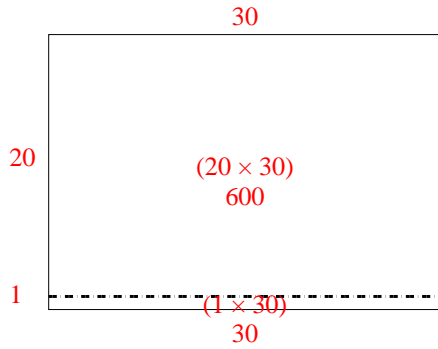
5. _____

6. _____

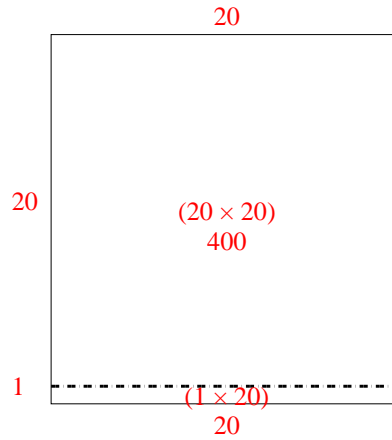


Usa le griglie fornite per risolvere ogni operazione.

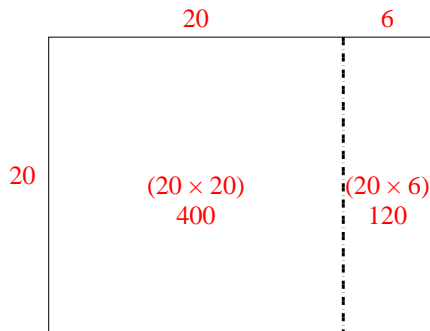
1) $21 \times 30 =$



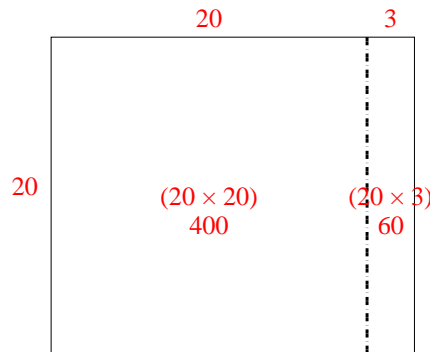
2) $21 \times 20 =$



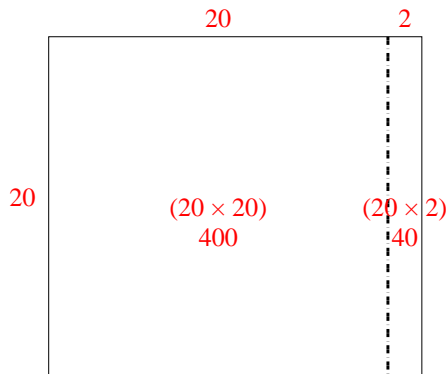
3) $20 \times 26 =$



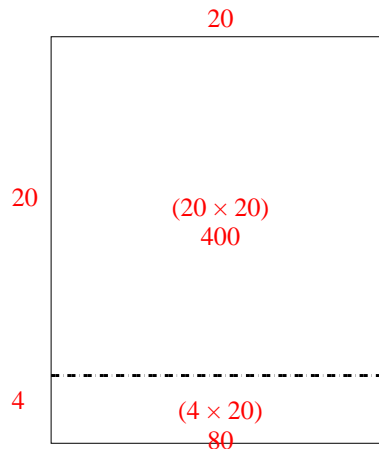
4) $20 \times 23 =$



5) $20 \times 22 =$



6) $24 \times 20 =$



Risposte

1. 630
2. 420
3. 520
4. 460
5. 440
6. 480



Usa le griglie fornite per risolvere ogni operazione.

1) $28 \times 20 =$

2) $26 \times 20 =$

3) $20 \times 22 =$

4) $23 \times 20 =$

5) $29 \times 20 =$

6) $20 \times 24 =$

Risposte

1. _____

2. _____

3. _____

4. _____

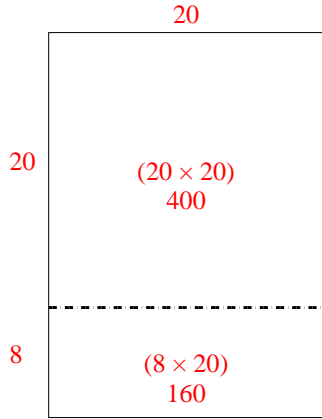
5. _____

6. _____

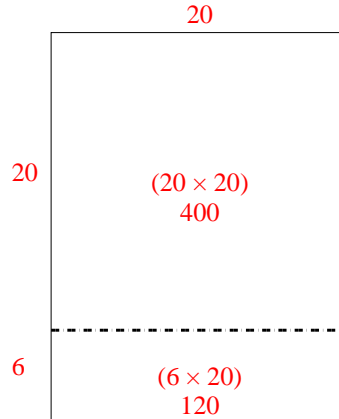


Usa le griglie fornite per risolvere ogni operazione.

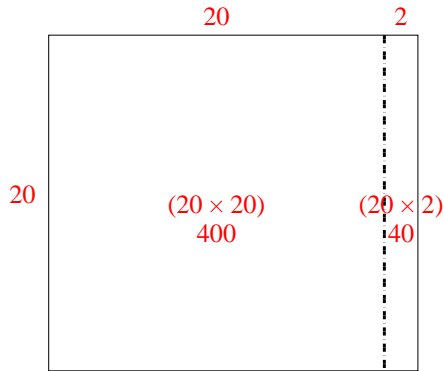
1) $28 \times 20 =$



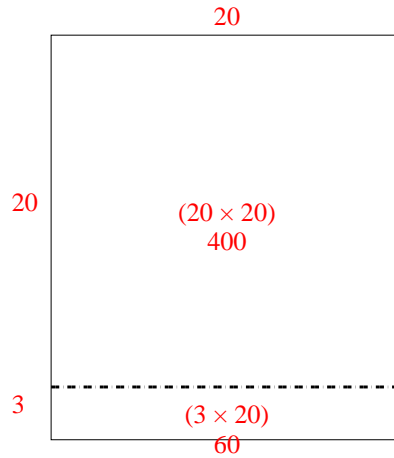
2) $26 \times 20 =$



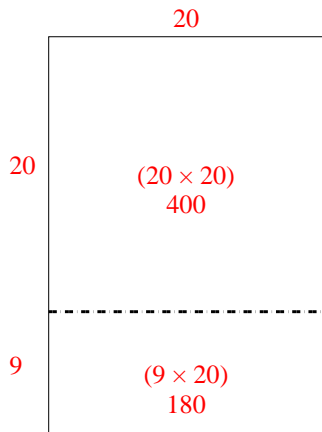
3) $20 \times 22 =$



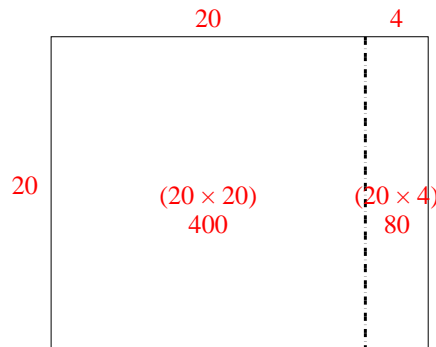
4) $23 \times 20 =$



5) $29 \times 20 =$



6) $20 \times 24 =$



Risposte

1. 560
2. 520
3. 440
4. 460
5. 580
6. 480




Usa le griglie fornite per risolvere ogni operazione.


1) $20 \times 31 =$




2) $20 \times 26 =$




3) $21 \times 20 =$




4) $20 \times 27 =$



5) $20 \times 29 =$



6) $29 \times 20 =$



Risposte

1. _____

2. _____

3. _____

4. _____

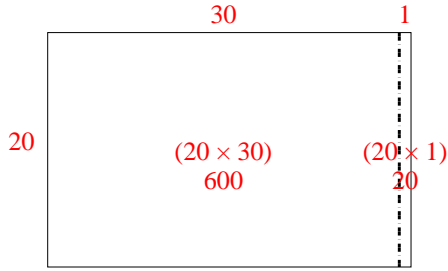
5. _____

6. _____

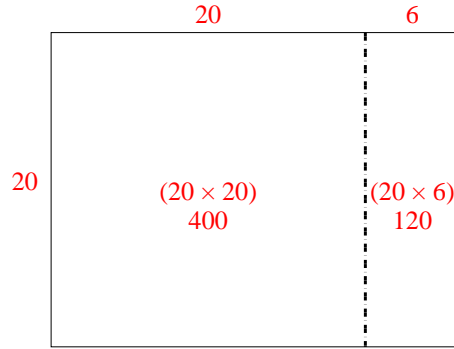


Usa le griglie fornite per risolvere ogni operazione.

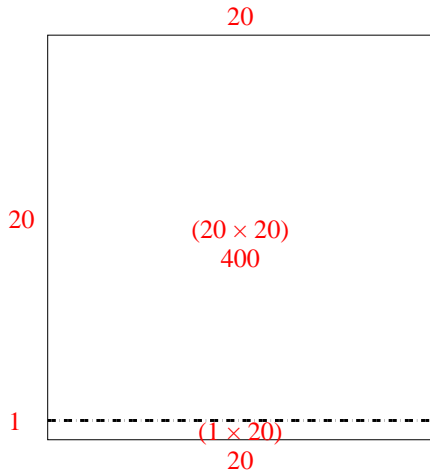
1) $20 \times 31 =$



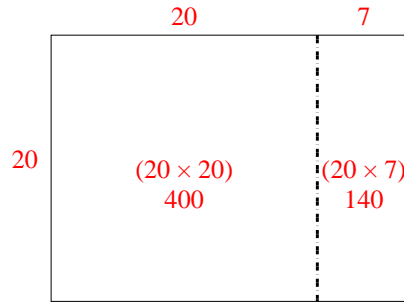
2) $20 \times 26 =$



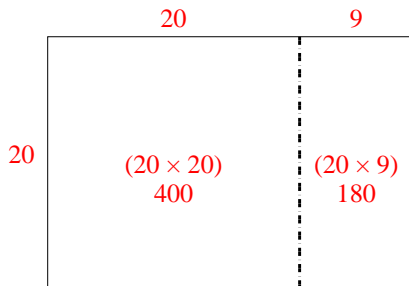
3) $21 \times 20 =$



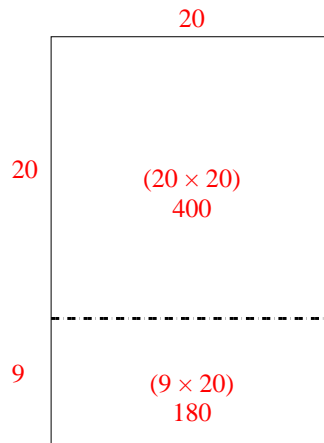
4) $20 \times 27 =$



5) $20 \times 29 =$



6) $29 \times 20 =$




Risposte

1. 620
2. 520
3. 420
4. 540
5. 580
6. 580




Usa le griglie fornite per risolvere ogni operazione.


1) $20 \times 25 =$




2) $20 \times 24 =$




3) $26 \times 20 =$




4) $28 \times 20 =$



5) $27 \times 20 =$



6) $23 \times 20 =$



Risposte

1. _____

2. _____

3. _____

4. _____

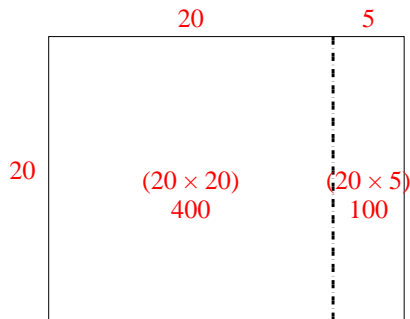
5. _____

6. _____

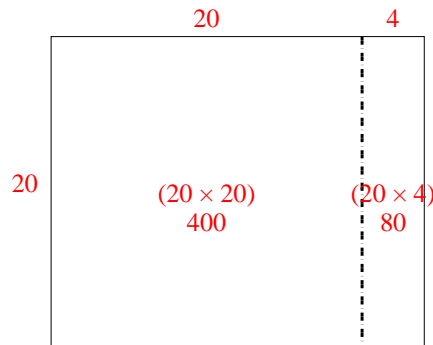


Usa le griglie fornite per risolvere ogni operazione.

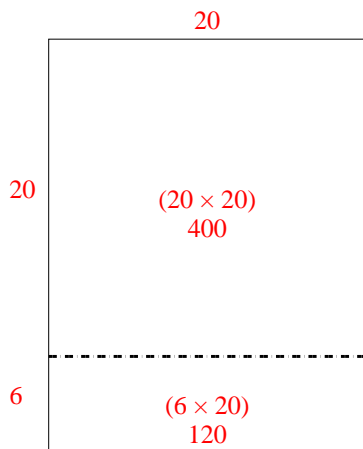
1) $20 \times 25 =$



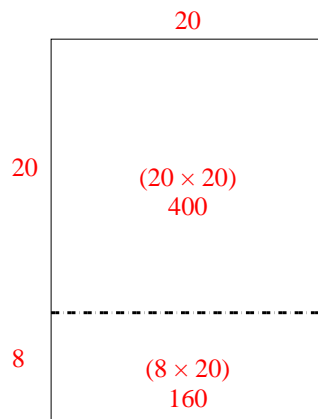
2) $20 \times 24 =$



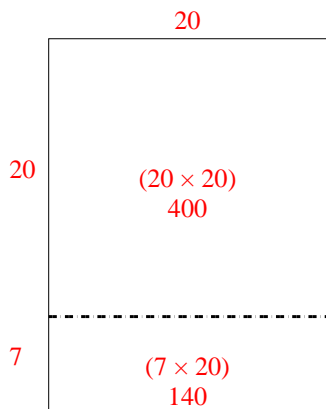
3) $26 \times 20 =$



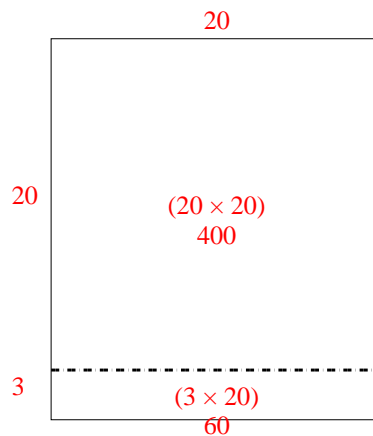
4) $28 \times 20 =$



5) $27 \times 20 =$




6) $23 \times 20 =$

Risposte1. 5002. 4803. 5204. 5605. 5406. 460




Usa le griglie fornite per risolvere ogni operazione.

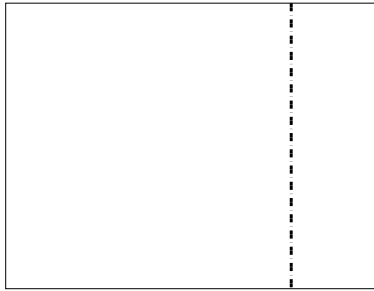
1) $30 \times 25 =$




2) $20 \times 24 =$




3) $20 \times 26 =$




4) $20 \times 21 =$



5) $26 \times 20 =$



6) $20 \times 23 =$



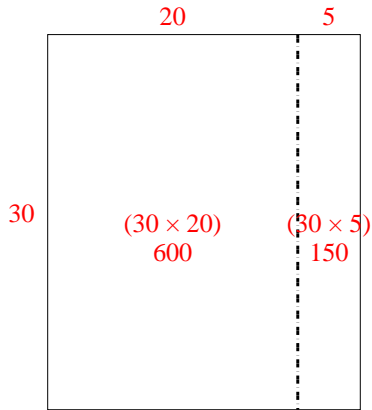
Risposte

- 1. _____
- 2. _____
- 3. _____
- 4. _____
- 5. _____
- 6. _____

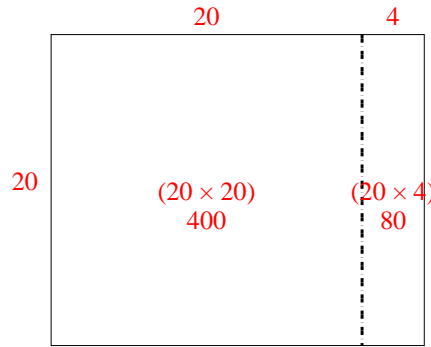


Usa le griglie fornite per risolvere ogni operazione.

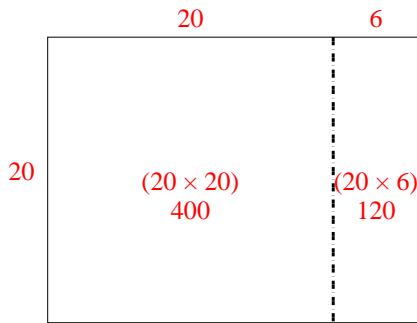
1) $30 \times 25 =$



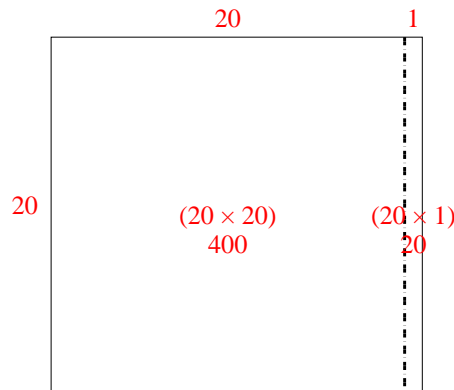
2) $20 \times 24 =$



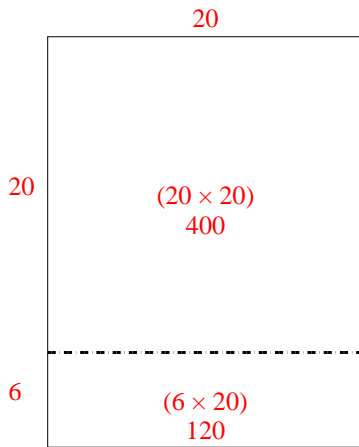
3) $20 \times 26 =$



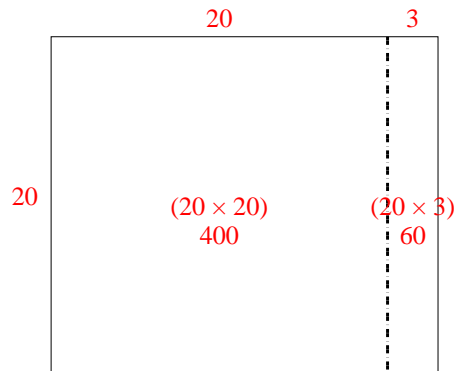
4) $20 \times 21 =$



5) $26 \times 20 =$



6) $20 \times 23 =$



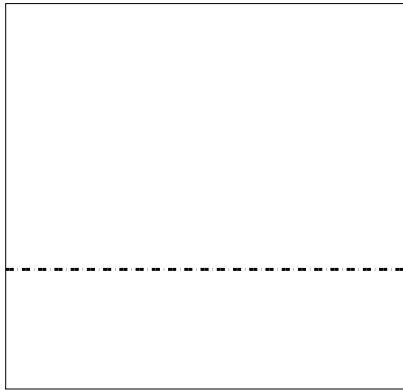
Risposte

1. 750
2. 480
3. 520
4. 420
5. 520
6. 460




Usa le griglie fornite per risolvere ogni operazione.

1) $29 \times 30 =$




2) $21 \times 20 =$




3) $20 \times 21 =$




4) $20 \times 22 =$



5) $20 \times 27 =$



6) $29 \times 20 =$



Risposte

1. _____

2. _____

3. _____

4. _____

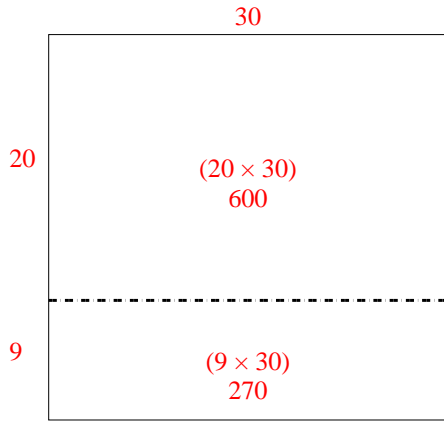
5. _____

6. _____

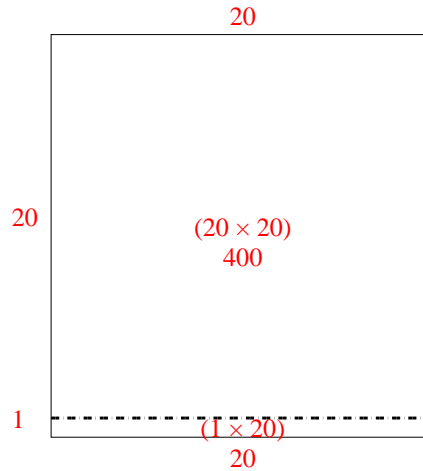


Usa le griglie fornite per risolvere ogni operazione.

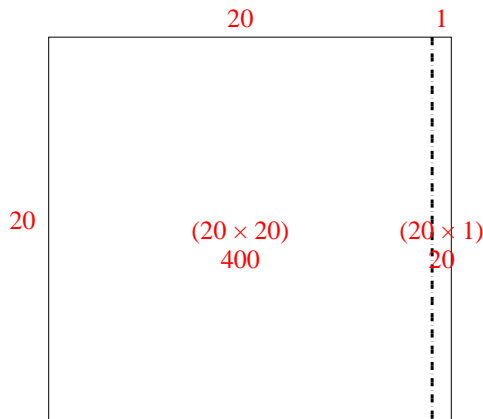
1) $29 \times 30 =$



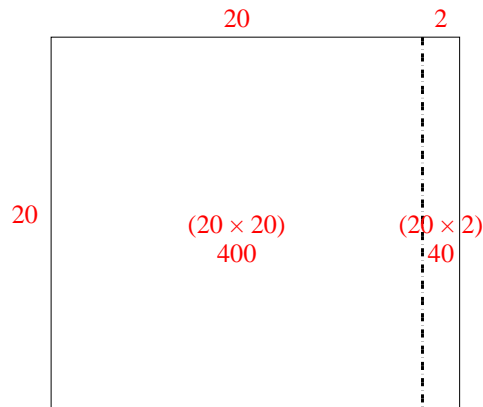
2) $21 \times 20 =$



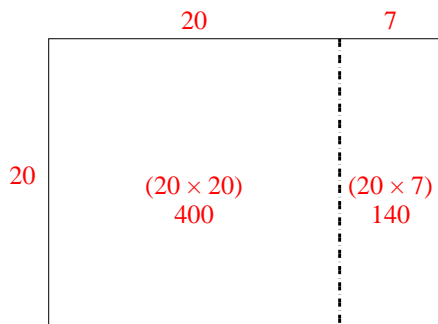
3) $20 \times 21 =$



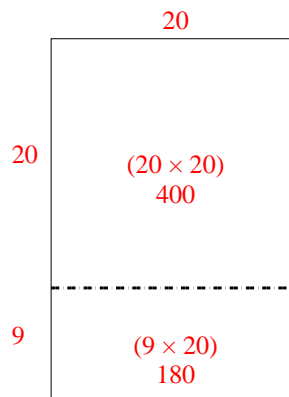
4) $20 \times 22 =$



5) $20 \times 27 =$



6) $29 \times 20 =$



Risposte

1. 870
2. 420
3. 420
4. 440
5. 540
6. 580



Usa le griglie fornite per risolvere ogni operazione.

1) $25 \times 30 =$

2) $24 \times 20 =$

3) $25 \times 20 =$

4) $26 \times 20 =$

5) $22 \times 20 =$

6) $28 \times 20 =$

Risposte

1. _____

2. _____

3. _____

4. _____

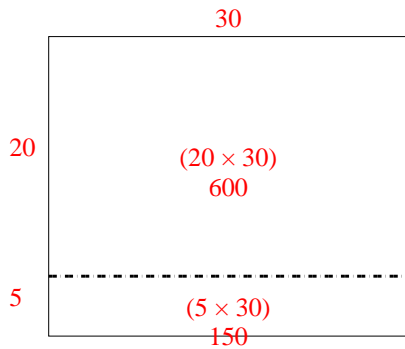
5. _____

6. _____

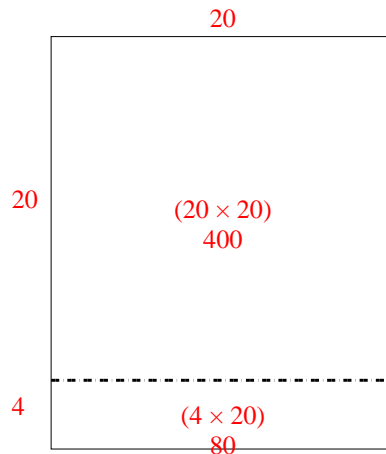


Usa le griglie fornite per risolvere ogni operazione.

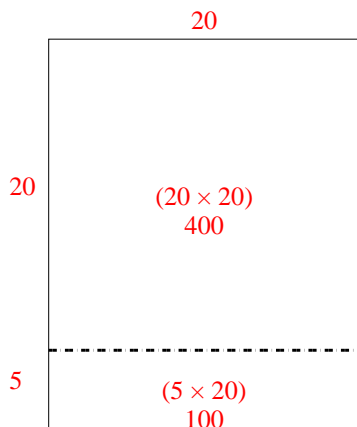
1) $25 \times 30 =$



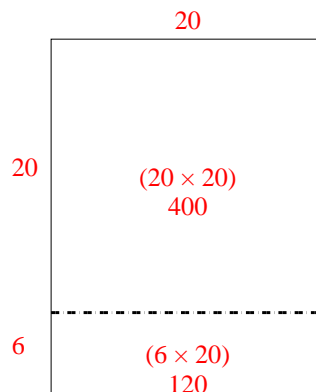
2) $24 \times 20 =$



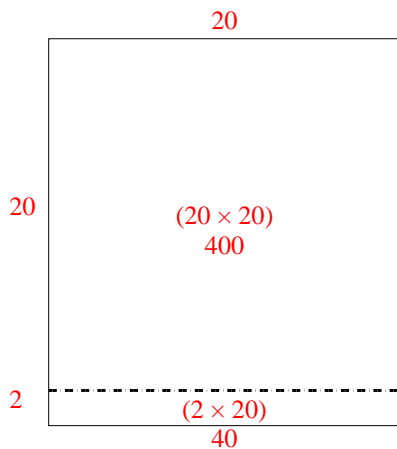
3) $25 \times 20 =$



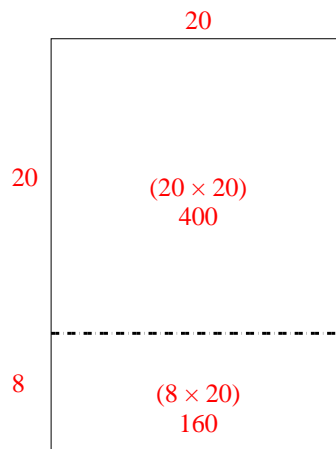
4) $26 \times 20 =$



5) $22 \times 20 =$



6) $28 \times 20 =$



Risposte

1. 750

2. 480

3. 500

4. 520


5. 440

6. 560




Usa le griglie fornite per risolvere ogni operazione.

1) $30 \times 37 =$




2) $38 \times 30 =$




3) $20 \times 34 =$




4) $24 \times 30 =$



5) $20 \times 26 =$



6) $20 \times 28 =$



Risposte

1. _____

2. _____

3. _____

4. _____

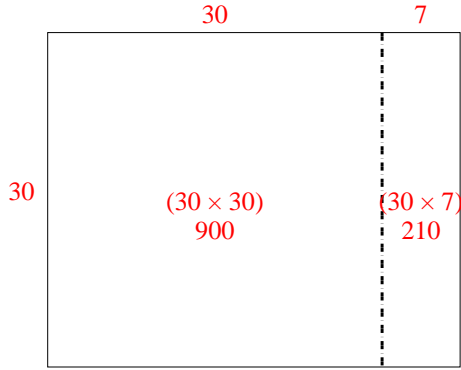
5. _____

6. _____

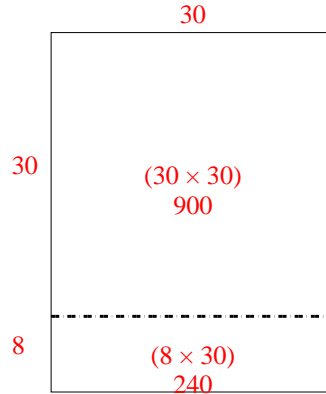


Usa le griglie fornite per risolvere ogni operazione.

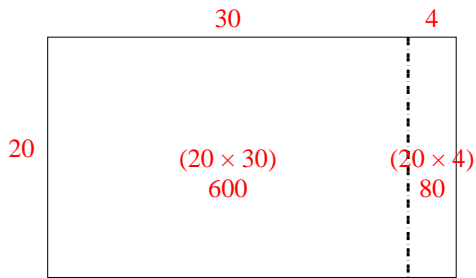
1) $30 \times 37 =$



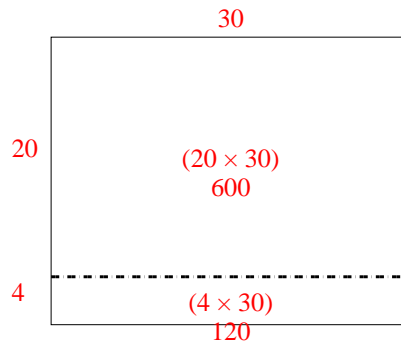
2) $38 \times 30 =$



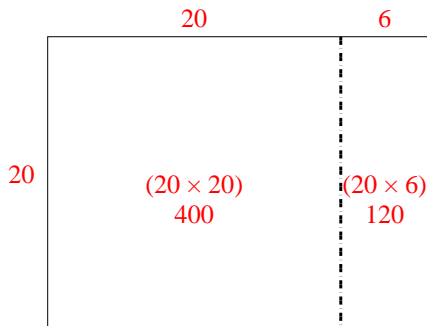
3) $20 \times 34 =$



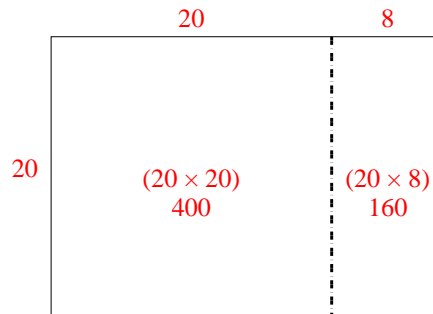
4) $24 \times 30 =$



5) $20 \times 26 =$



6) $20 \times 28 =$



Risposte

1. 1.110
2. 1.140
3. 680
4. 720
5. 520
6. 560