



Usa le griglie fornite per risolvere ogni operazione.

1) $25 \times 30 =$

2) $24 \times 20 =$

3) $25 \times 20 =$

4) $26 \times 20 =$

5) $22 \times 20 =$

6) $28 \times 20 =$

Risposte

1. _____

2. _____

3. _____

4. _____

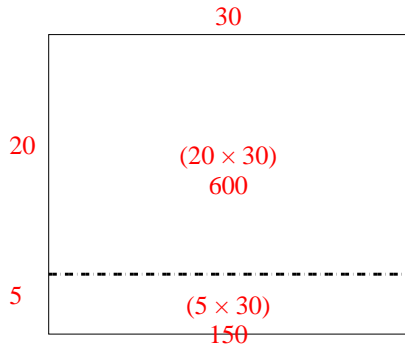
5. _____

6. _____

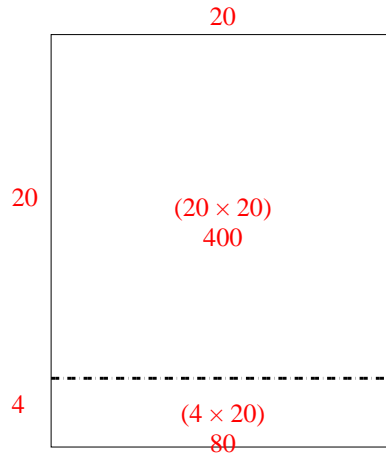


Usa le griglie fornite per risolvere ogni operazione.

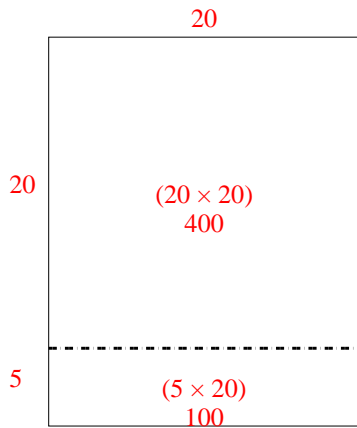
1) $25 \times 30 =$



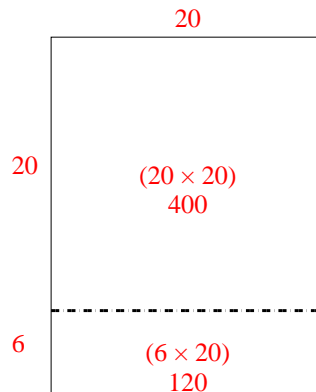
2) $24 \times 20 =$



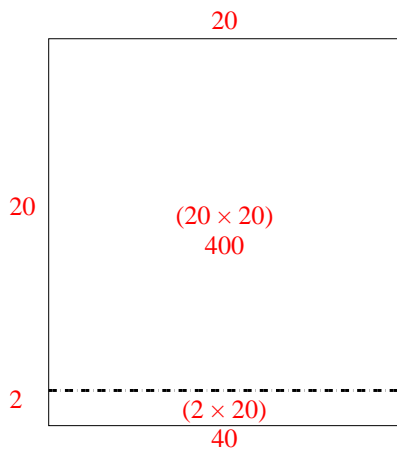
3) $25 \times 20 =$



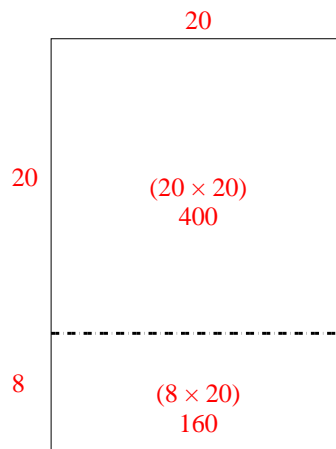
4) $26 \times 20 =$



5) $22 \times 20 =$



6) $28 \times 20 =$



Risposte

1. 750
2. 480
3. 500
4. 520
5. 440
6. 560