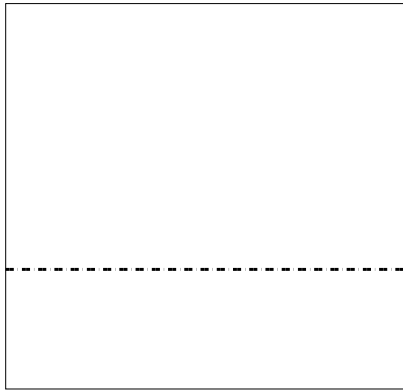





Usa le griglie fornite per risolvere ogni operazione.

1) $29 \times 30 =$




2) $21 \times 20 =$




3) $20 \times 21 =$




4) $20 \times 22 =$



5) $20 \times 27 =$



6) $29 \times 20 =$



Risposte

1. _____

2. _____

3. _____

4. _____

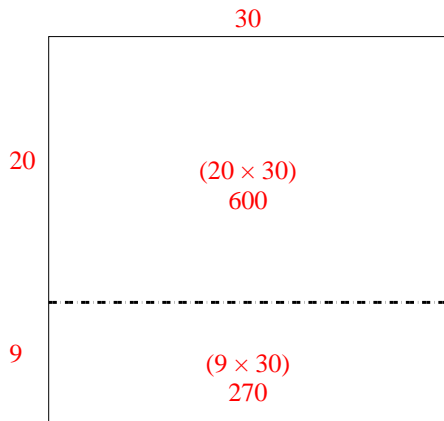
5. _____

6. _____

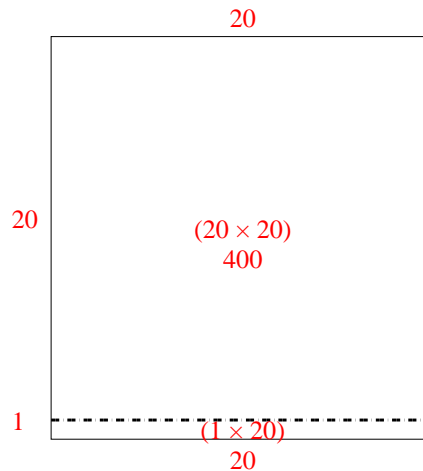


Usa le griglie fornite per risolvere ogni operazione.

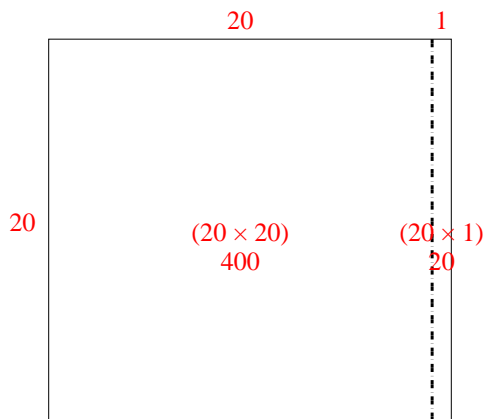
1) $29 \times 30 =$



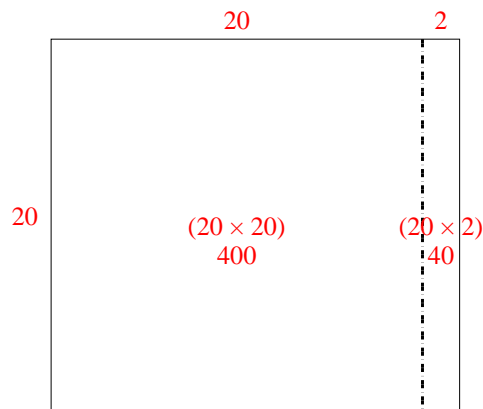
2) $21 \times 20 =$



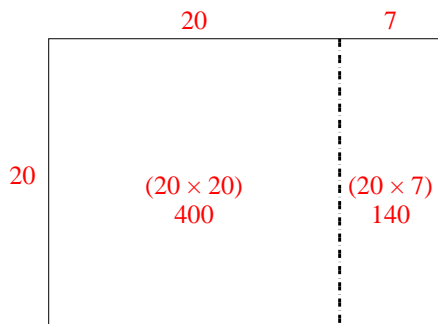
3) $20 \times 21 =$



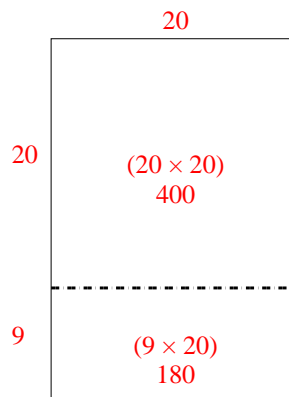
4) $20 \times 22 =$



5) $20 \times 27 =$



6) $29 \times 20 =$



Risposte

1. 870
2. 420
3. 420
4. 440
5. 540
6. 580