





Usa le griglie fornite per risolvere ogni operazione.

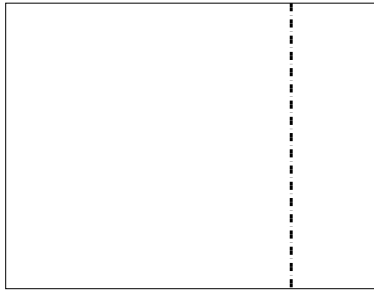
1)  $30 \times 25 =$




2)  $20 \times 24 =$




3)  $20 \times 26 =$




4)  $20 \times 21 =$



5)  $26 \times 20 =$



6)  $20 \times 23 =$



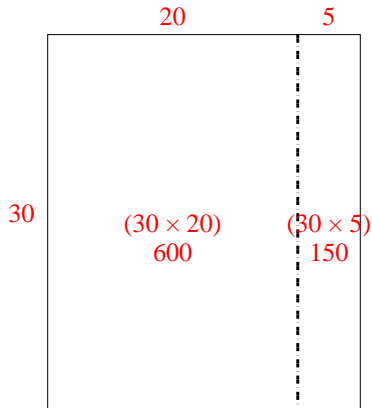
**Risposte**

- 1. \_\_\_\_\_
- 2. \_\_\_\_\_
- 3. \_\_\_\_\_
- 4. \_\_\_\_\_
- 5. \_\_\_\_\_
- 6. \_\_\_\_\_

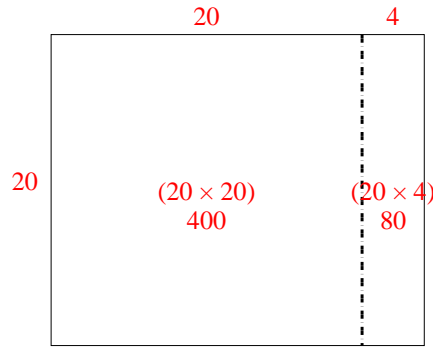


Usa le griglie fornite per risolvere ogni operazione.

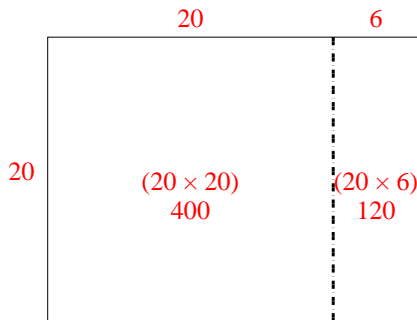
1)  $30 \times 25 =$



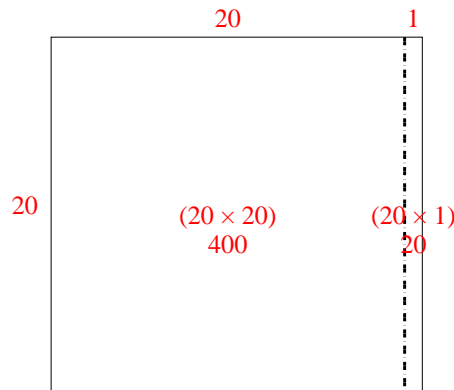
2)  $20 \times 24 =$



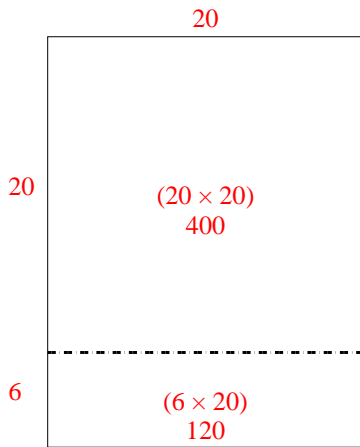
3)  $20 \times 26 =$



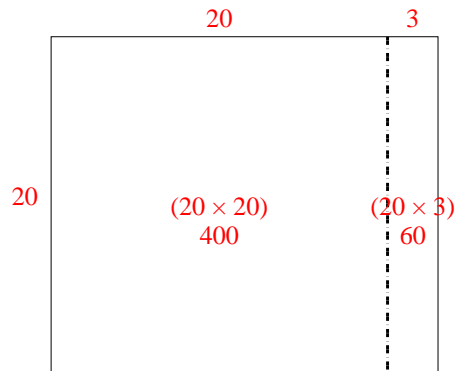
4)  $20 \times 21 =$



5)  $26 \times 20 =$



6)  $20 \times 23 =$



Risposte

1. 750
2. 480
3. 520
4. 420
5. 520
6. 460