





Usa le griglie fornite per risolvere ogni operazione.


1)  $20 \times 25 =$




2)  $20 \times 24 =$




3)  $26 \times 20 =$




4)  $28 \times 20 =$



5)  $27 \times 20 =$



6)  $23 \times 20 =$



**Risposte**

1. \_\_\_\_\_

2. \_\_\_\_\_

3. \_\_\_\_\_

4. \_\_\_\_\_

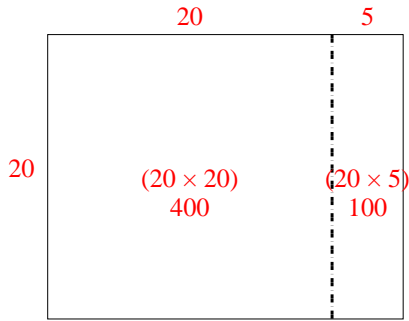
5. \_\_\_\_\_

6. \_\_\_\_\_

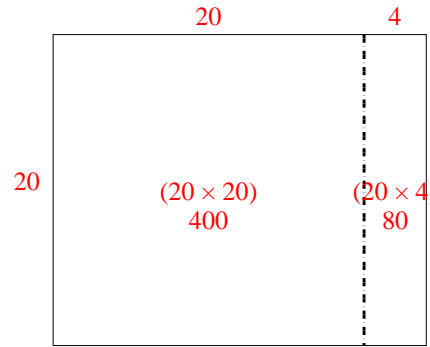


Usa le griglie fornite per risolvere ogni operazione.

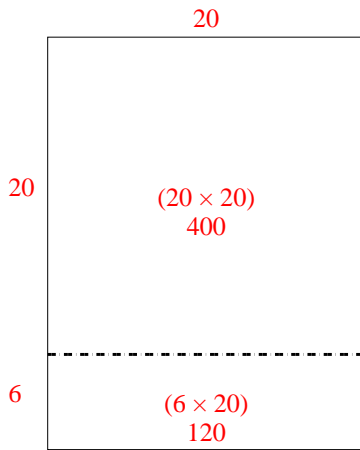
1)  $20 \times 25 =$



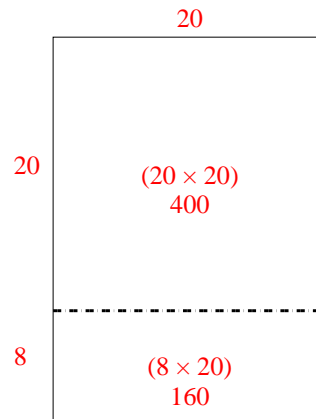
2)  $20 \times 24 =$



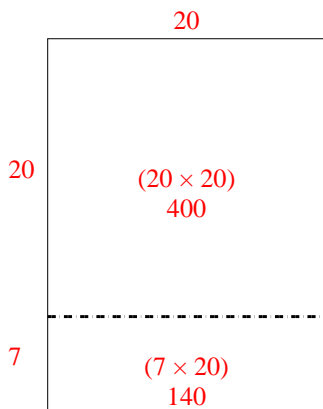
3)  $26 \times 20 =$



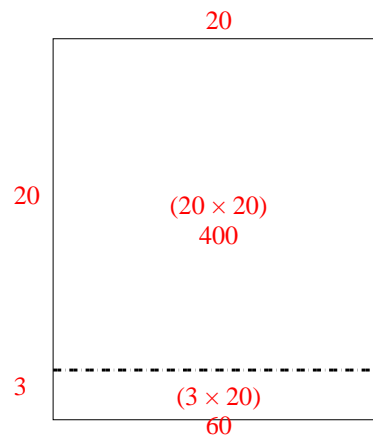
4)  $28 \times 20 =$



5)  $27 \times 20 =$



6)  $23 \times 20 =$



Risposte

1. 500
2. 480
3. 520
4. 560
5. 540
6. 460