



Usa le griglie fornite per risolvere ogni operazione.

1) $28 \times 20 =$

2) $26 \times 20 =$

3) $20 \times 22 =$

4) $23 \times 20 =$

5) $29 \times 20 =$

6) $20 \times 24 =$

Risposte

1. _____

2. _____

3. _____

4. _____

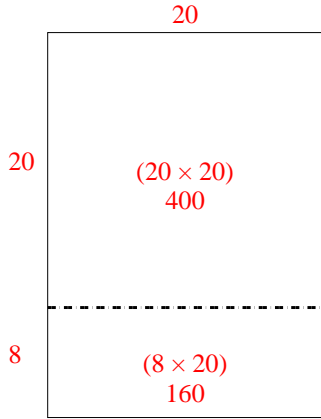
5. _____

6. _____

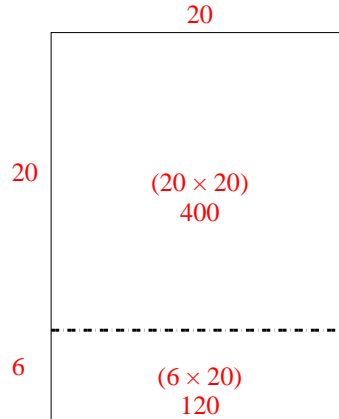


Usa le griglie fornite per risolvere ogni operazione.

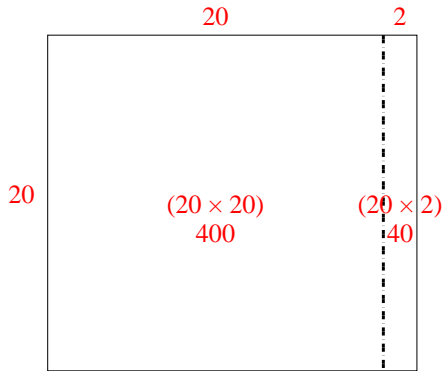
1) $28 \times 20 =$



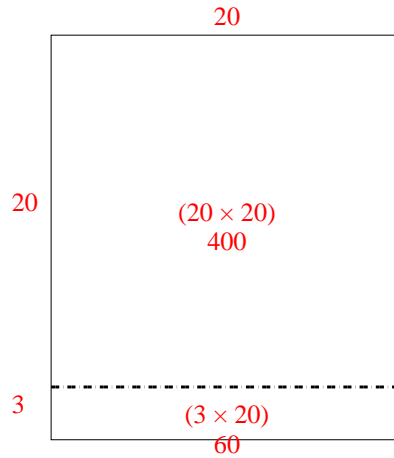
2) $26 \times 20 =$



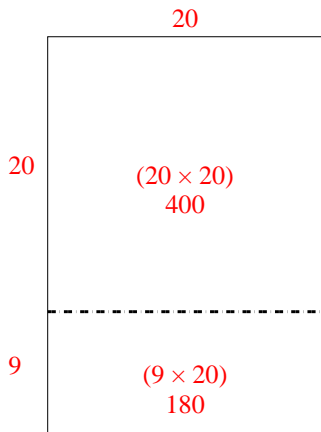
3) $20 \times 22 =$



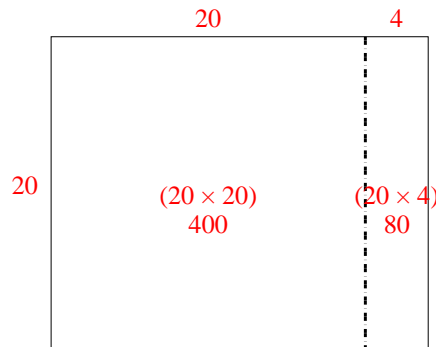
4) $23 \times 20 =$



5) $29 \times 20 =$



6) $20 \times 24 =$



Risposte

1. 560
2. 520
3. 440
4. 460
5. 580
6. 480