





Usa le griglie fornite per risolvere ogni operazione.


1) $20 \times 23 =$




2) $29 \times 20 =$




3) $20 \times 24 =$




4) $26 \times 20 =$



5) $25 \times 20 =$



6) $20 \times 21 =$



Risposte

1. _____

2. _____

3. _____

4. _____

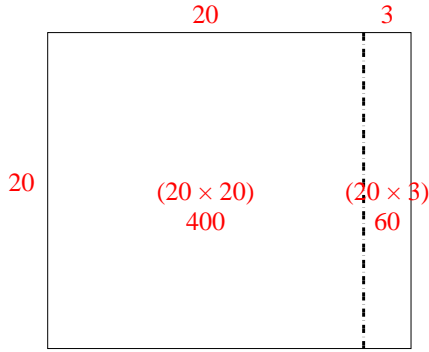
5. _____

6. _____

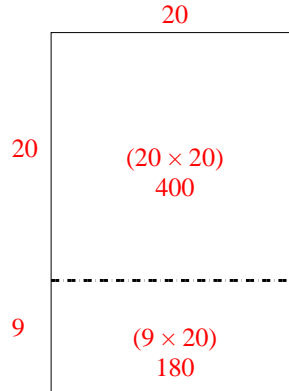


Usa le griglie fornite per risolvere ogni operazione.

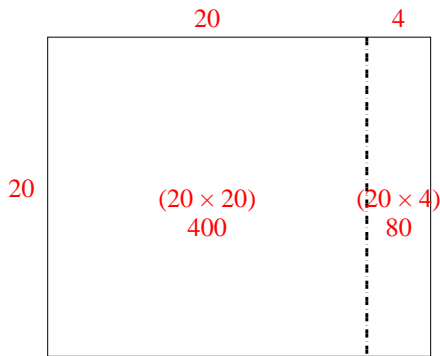
1) $20 \times 23 =$



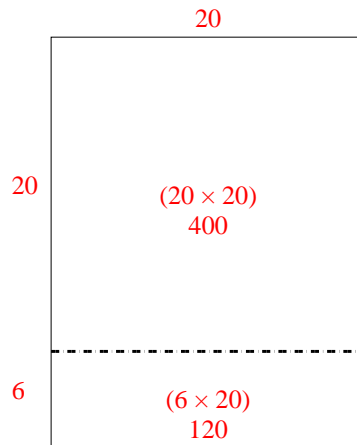
2) $29 \times 20 =$



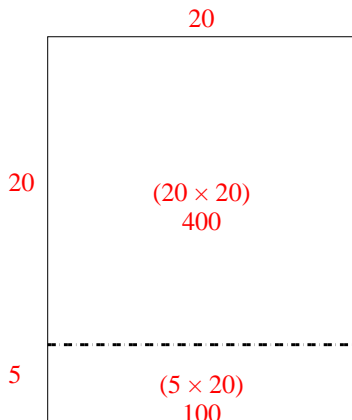
3) $20 \times 24 =$



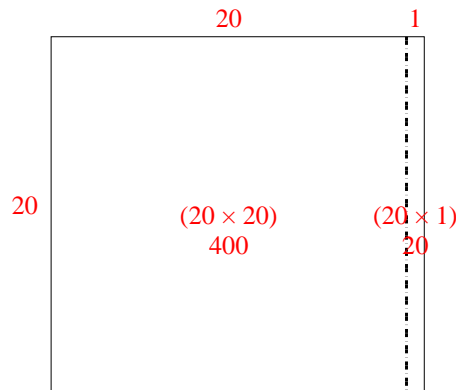
4) $26 \times 20 =$



5) $25 \times 20 =$



6) $20 \times 21 =$



Risposte

1. 460
2. 580
3. 480
4. 520
5. 500
6. 420