





Usa le griglie fornite per risolvere ogni operazione.

1) $30 \times 37 =$




2) $38 \times 30 =$




3) $20 \times 34 =$




4) $24 \times 30 =$



5) $20 \times 26 =$



6) $20 \times 28 =$



Risposte

1. _____

2. _____

3. _____

4. _____

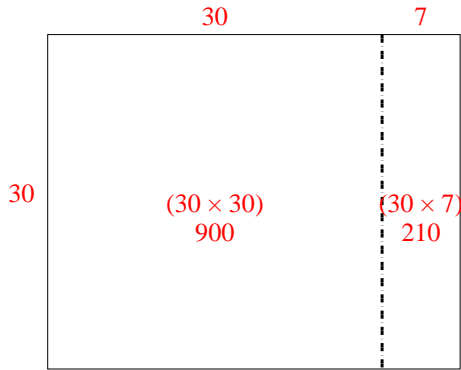
5. _____

6. _____

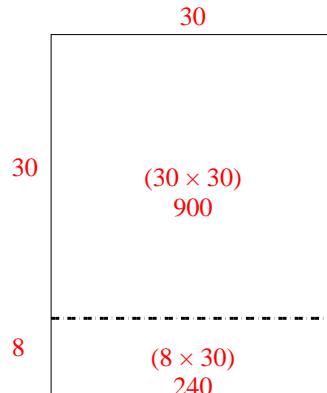


Usa le griglie fornite per risolvere ogni operazione.

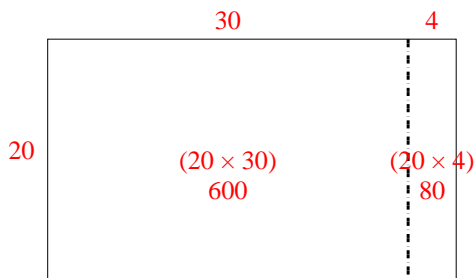
1) $30 \times 37 =$



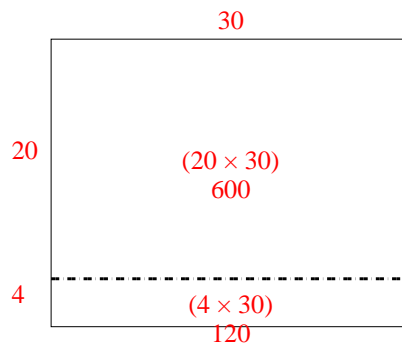
2) $38 \times 30 =$



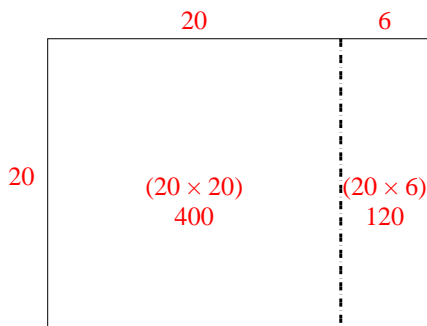
3) $20 \times 34 =$



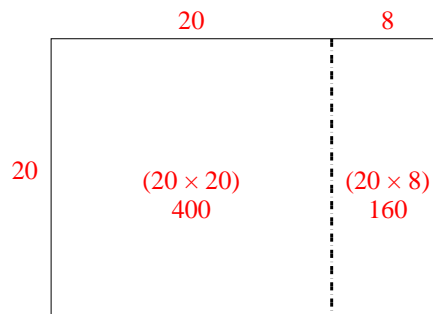
4) $24 \times 30 =$



5) $20 \times 26 =$



6) $20 \times 28 =$



Risposte

1. 1.110
2. 1.140
3. 680
4. 720
5. 520
6. 560