





Usa le griglie fornite per risolvere ogni operazione.


1) $46 \times 30 =$




2) $40 \times 25 =$




3) $30 \times 29 =$




4) $30 \times 23 =$



5) $20 \times 22 =$



6) $20 \times 29 =$



Risposte

1. _____

2. _____

3. _____

4. _____

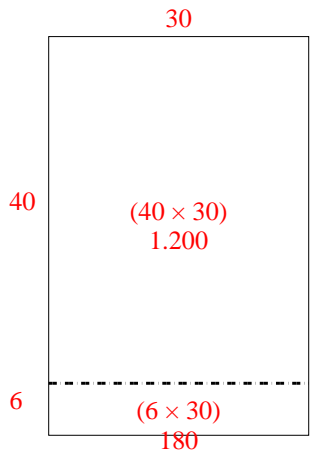
5. _____

6. _____

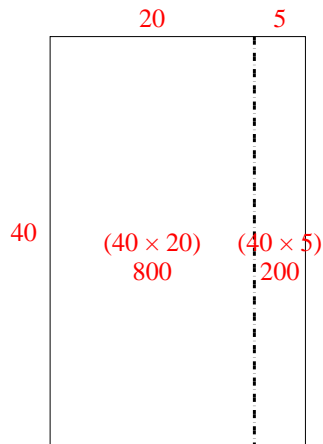


Usa le griglie fornite per risolvere ogni operazione.

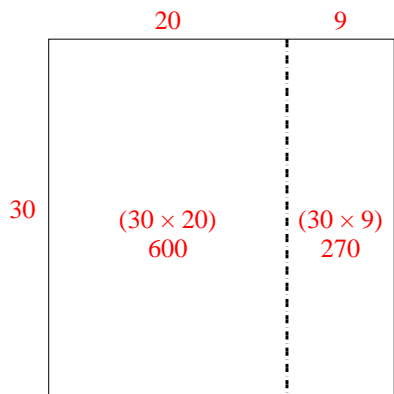
1) $46 \times 30 =$



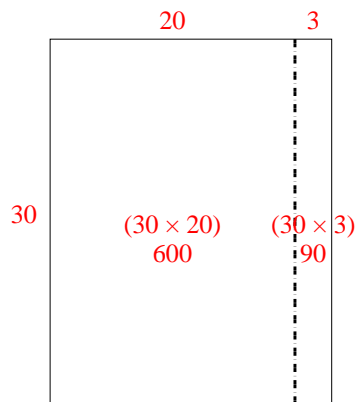
2) $40 \times 25 =$



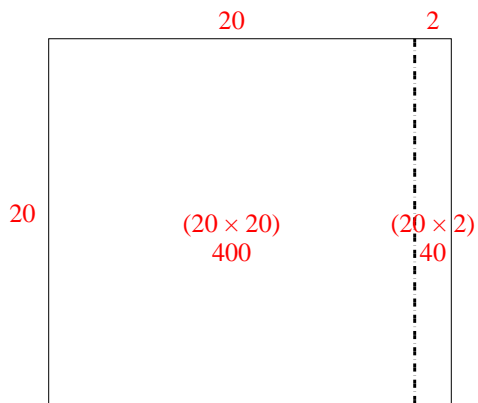
3) $30 \times 29 =$



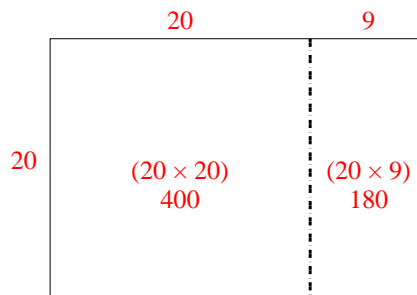
4) $30 \times 23 =$



5) $20 \times 22 =$



6) $20 \times 29 =$



Risposte

1. 1.380
2. 1.000
3. 870
4. 690
5. 440
6. 580