





Usa le griglie fornite per calcolare i risultati.


1) $10 \times 23 =$




2) $26 \times 10 =$




3) $12 \times 10 =$




4) $10 \times 16 =$



5) $15 \times 10 =$



6) $10 \times 11 =$



Risposte

1. _____

2. _____

3. _____

4. _____

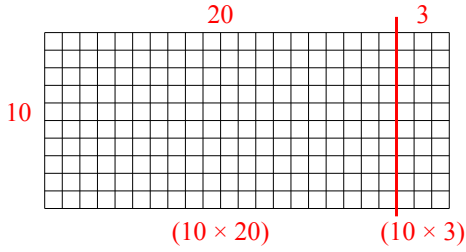
5. _____

6. _____

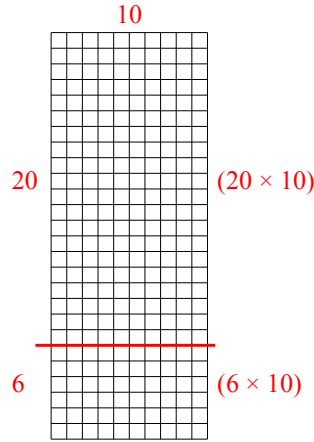


Usa le griglie fornite per calcolare i risultati.

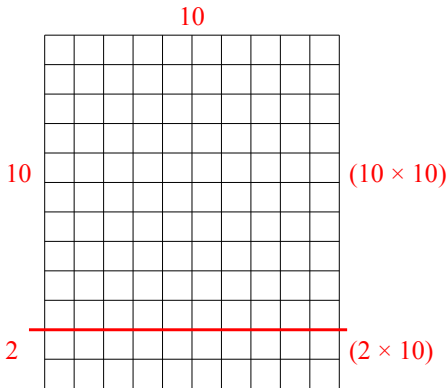
1) $10 \times 23 =$



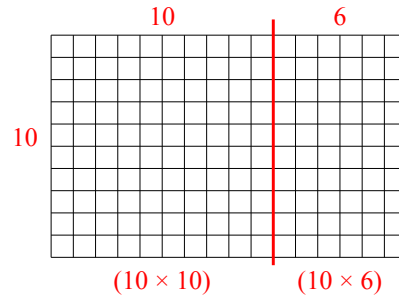
2) $26 \times 10 =$



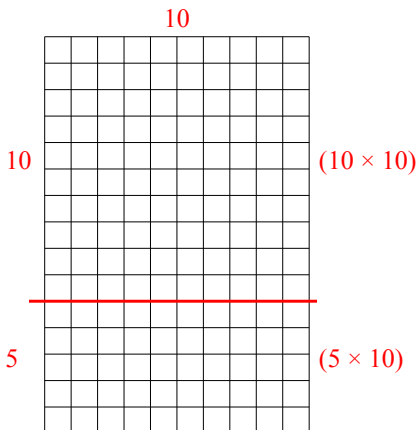
3) $12 \times 10 =$



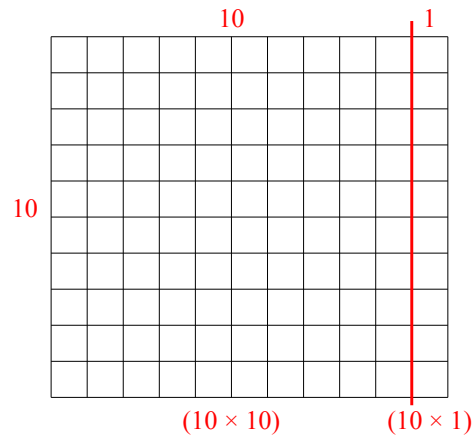
4) $10 \times 16 =$



5) $15 \times 10 =$



6) $10 \times 11 =$



Risposte

1. 230

2. 260

3. 120

4. 160

5. 150

6. 110