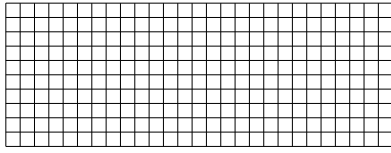





Usa le griglie fornite per calcolare i risultati.


1)  $10 \times 27 =$




2)  $20 \times 17 =$




3)  $16 \times 10 =$




4)  $11 \times 10 =$



5)  $10 \times 15 =$



6)  $19 \times 10 =$



**Risposte**

1. \_\_\_\_\_

2. \_\_\_\_\_

3. \_\_\_\_\_

4. \_\_\_\_\_

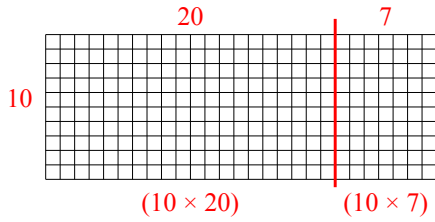
5. \_\_\_\_\_

6. \_\_\_\_\_

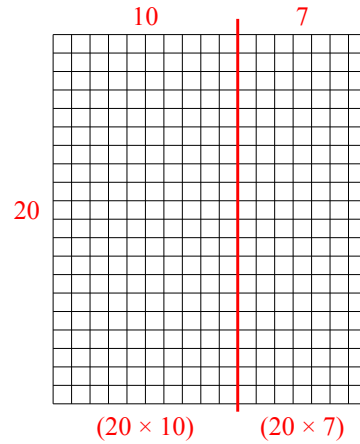


Usa le griglie fornite per calcolare i risultati.

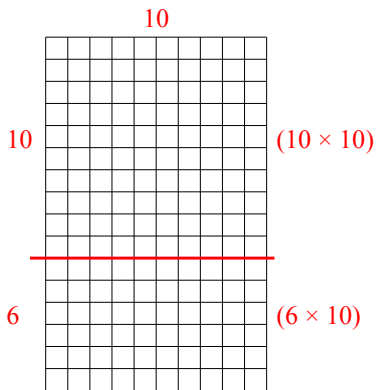
1)  $10 \times 27 =$



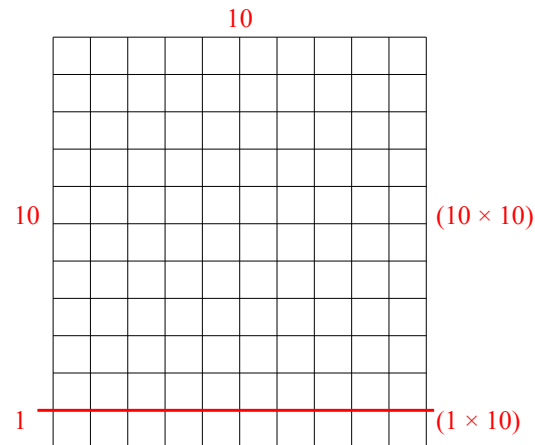
2)  $20 \times 17 =$



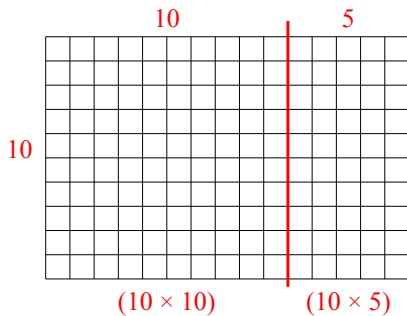
3)  $16 \times 10 =$



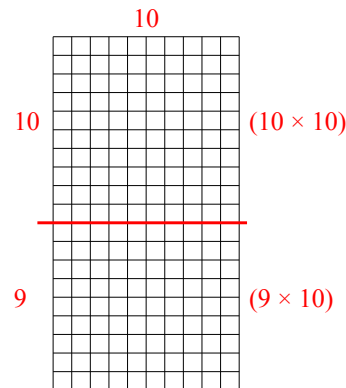
4)  $11 \times 10 =$



5)  $10 \times 15 =$



6)  $19 \times 10 =$



**Risposte**

1. 270

2. 340

3. 160

4. 110

5. 150

6. 190