





Usa le griglie fornite per calcolare i risultati.


1) $12 \times 20 =$




2) $10 \times 29 =$




3) $20 \times 27 =$




4) $10 \times 15 =$



5) $11 \times 10 =$



6) $10 \times 19 =$



Risposte

1. _____

2. _____

3. _____

4. _____

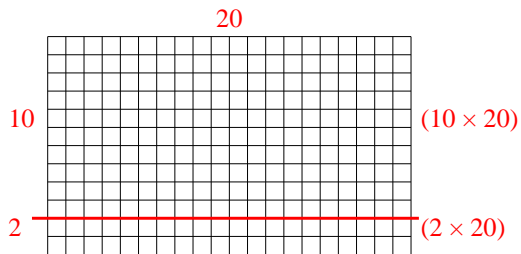
5. _____

6. _____

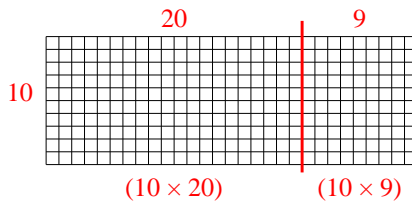


Usa le griglie fornite per calcolare i risultati.

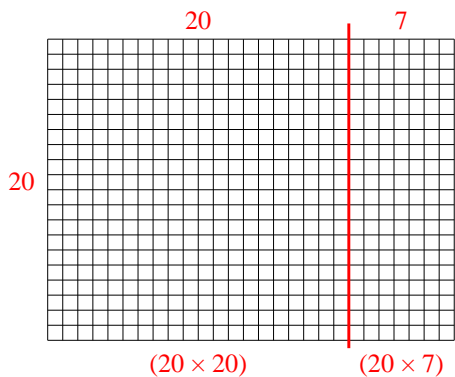
1) $12 \times 20 =$



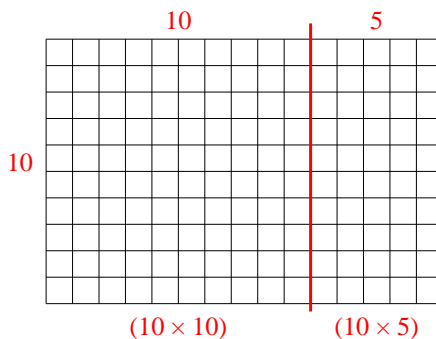
2) $10 \times 29 =$



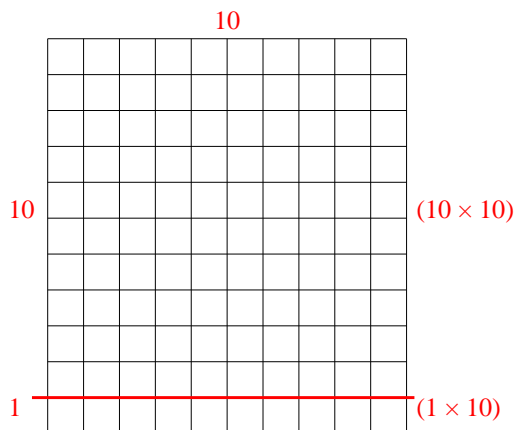
3) $20 \times 27 =$



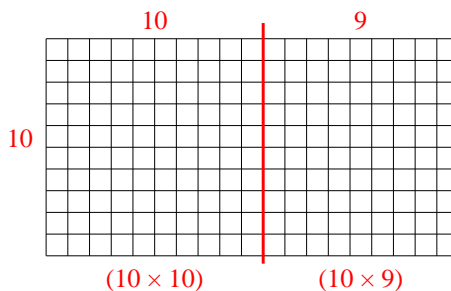
4) $10 \times 15 =$



5) $11 \times 10 =$



6) $10 \times 19 =$



Risposte

1. 240

2. 290

3. 540

4. 150


5. 110

6. 190




Usa le griglie fornite per calcolare i risultati.


1) $20 \times 13 =$




2) $17 \times 10 =$




3) $10 \times 13 =$




4) $14 \times 10 =$



5) $10 \times 15 =$



6) $10 \times 17 =$



Risposte

1. _____

2. _____

3. _____

4. _____

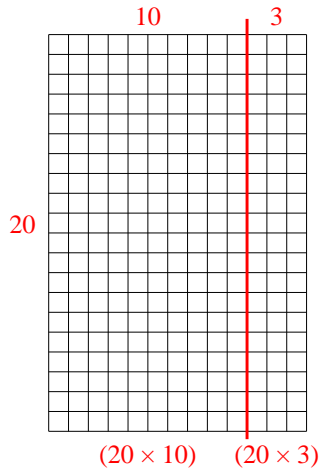
5. _____

6. _____

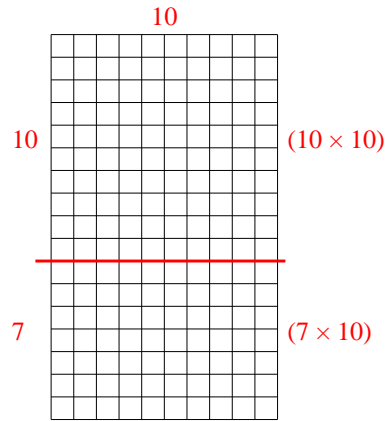


Usa le griglie fornite per calcolare i risultati.

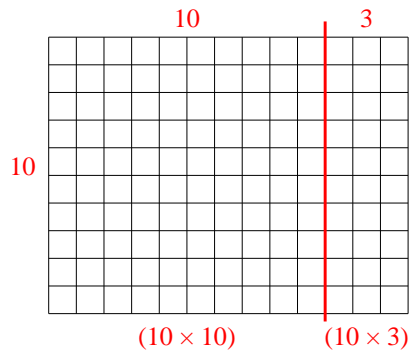
1) $20 \times 13 =$



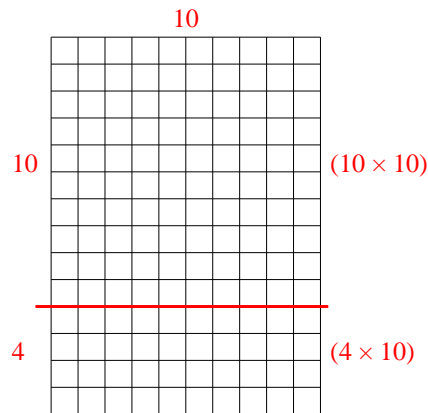
2) $17 \times 10 =$



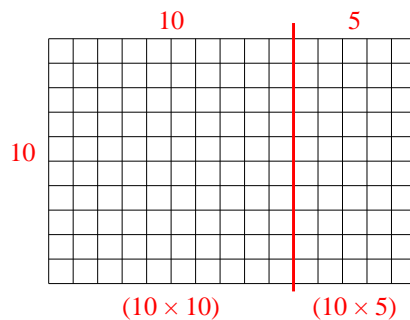
3) $10 \times 13 =$



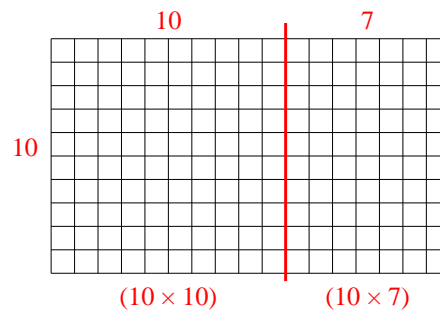
4) $14 \times 10 =$



5) $10 \times 15 =$



6) $10 \times 17 =$




Risposte

1. 260
2. 170
3. 130
4. 140
5. 150
6. 170

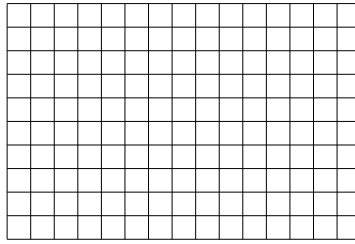


Usa le griglie fornite per calcolare i risultati.


1) $10 \times 19 =$




2) $10 \times 15 =$




3) $13 \times 10 =$




4) $10 \times 14 =$



5) $10 \times 11 =$



6) $16 \times 10 =$



Risposte

1. _____

2. _____

3. _____

4. _____

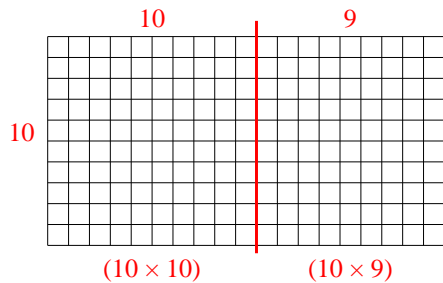
5. _____

6. _____

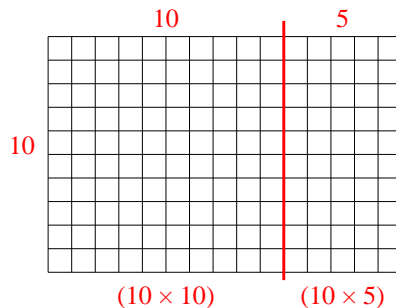


Usa le griglie fornite per calcolare i risultati.

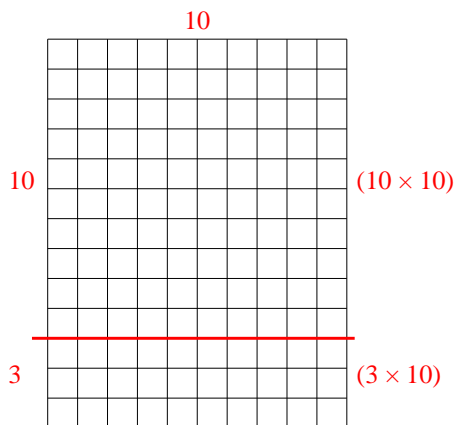
1) $10 \times 19 =$



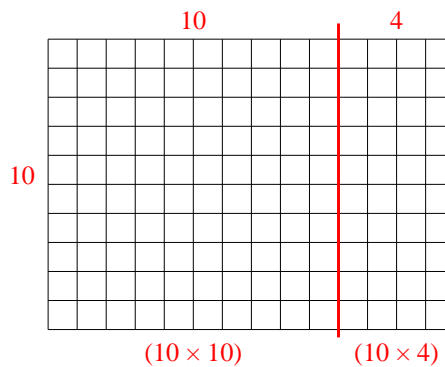
2) $10 \times 15 =$



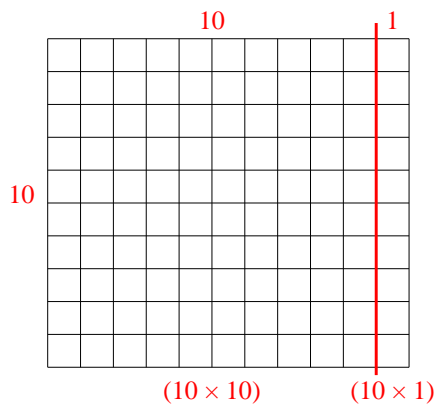
3) $13 \times 10 =$



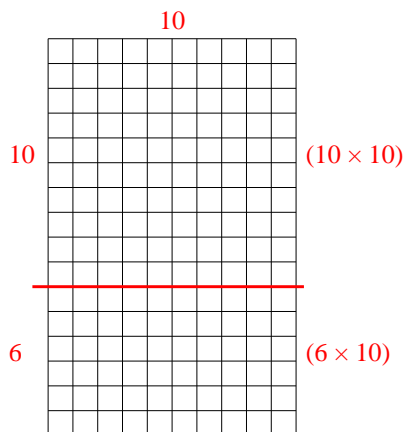
4) $10 \times 14 =$



5) $10 \times 11 =$



6) $16 \times 10 =$



Risposte

1. 190

2. 150

3. 130

4. 140


5. 110

6. 160




Usa le griglie fornite per calcolare i risultati.


1) $28 \times 10 =$




2) $11 \times 10 =$




3) $17 \times 10 =$




4) $10 \times 11 =$



5) $10 \times 12 =$



6) $10 \times 18 =$



Risposte

1. _____

2. _____

3. _____

4. _____

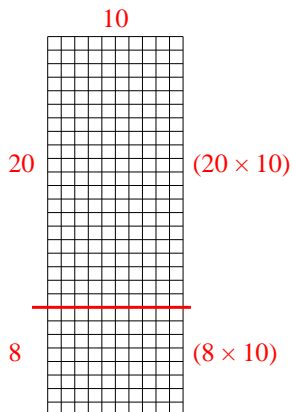
5. _____

6. _____

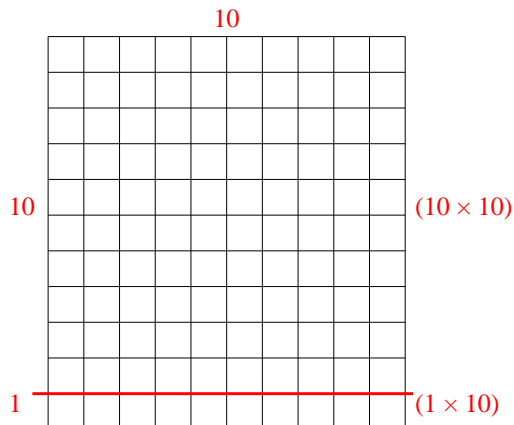


Usa le griglie fornite per calcolare i risultati.

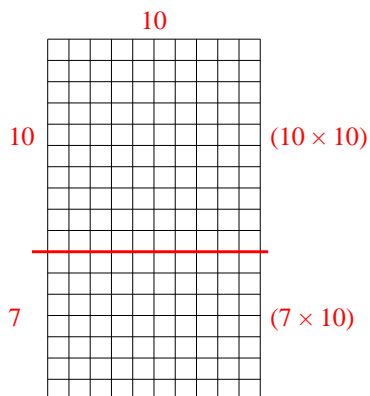
1) $28 \times 10 =$



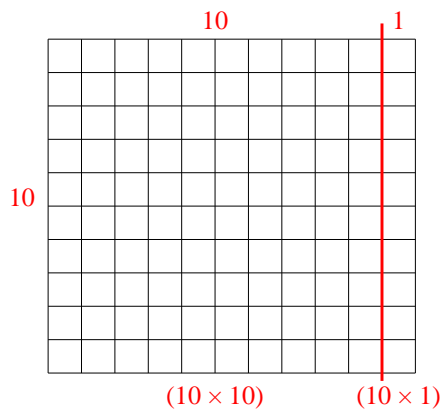
2) $11 \times 10 =$



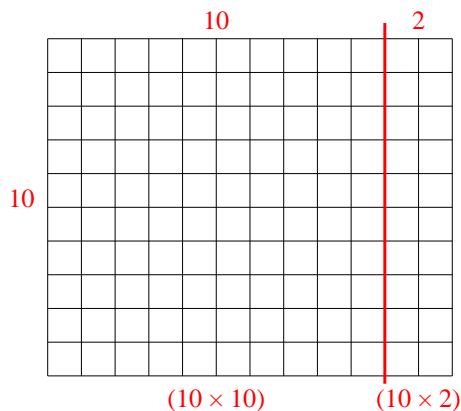
3) $17 \times 10 =$



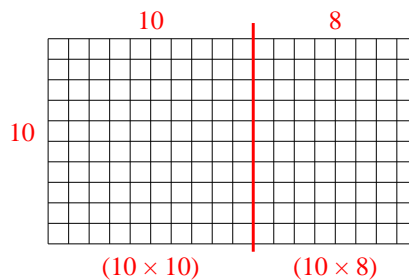
4) $10 \times 11 =$



5) $10 \times 12 =$



6) $10 \times 18 =$




Risposte

1. 280
2. 110
3. 170
4. 110
5. 120
6. 180

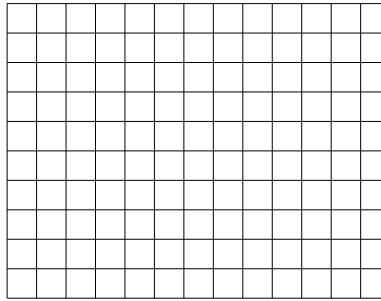


Usa le griglie fornite per calcolare i risultati.


1) $11 \times 10 =$



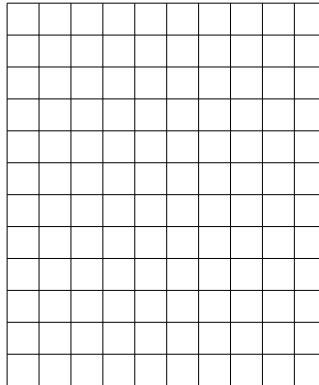
2) $10 \times 13 =$




3) $17 \times 10 =$




4) $12 \times 10 =$



5) $10 \times 15 =$



6) $18 \times 10 =$



Risposte

1. _____

2. _____

3. _____

4. _____

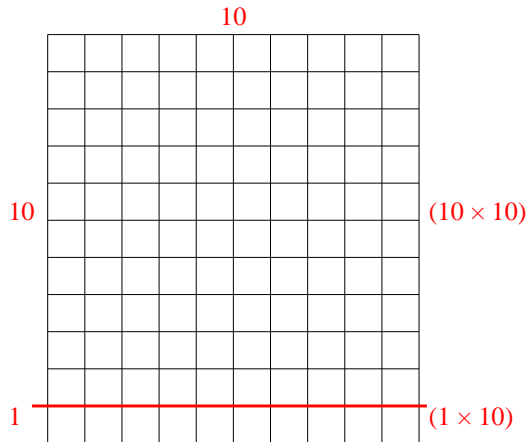
5. _____

6. _____

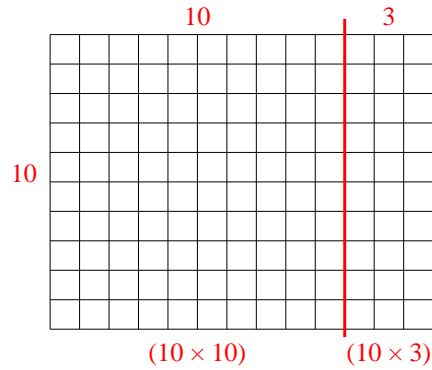


Usa le griglie fornite per calcolare i risultati.

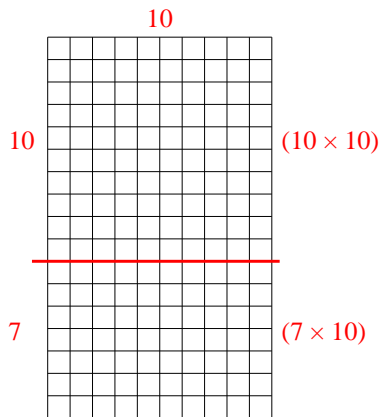
1) $11 \times 10 =$



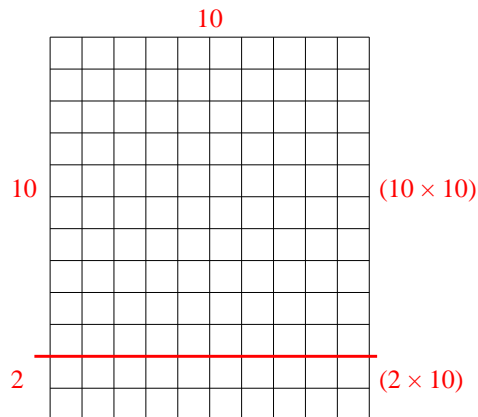
2) $10 \times 13 =$



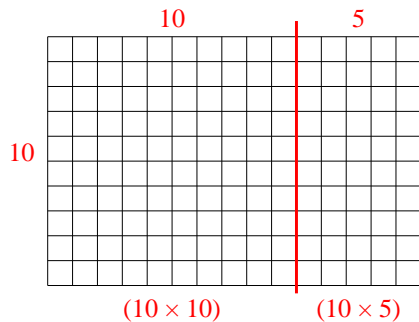
3) $17 \times 10 =$



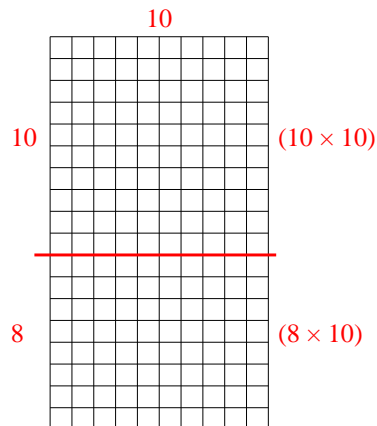
4) $12 \times 10 =$



5) $10 \times 15 =$



6) $18 \times 10 =$




Risposte

1. 110
2. 130
3. 170
4. 120
5. 150
6. 180

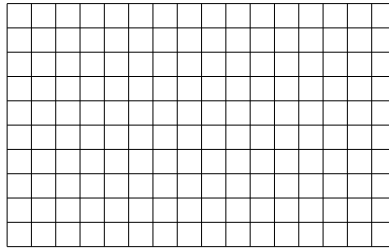


Usa le griglie fornite per calcolare i risultati.


1) $15 \times 20 =$




2) $10 \times 16 =$




3) $18 \times 10 =$




4) $11 \times 10 =$



5) $10 \times 11 =$



6) $10 \times 13 =$



Risposte

1. _____

2. _____

3. _____

4. _____

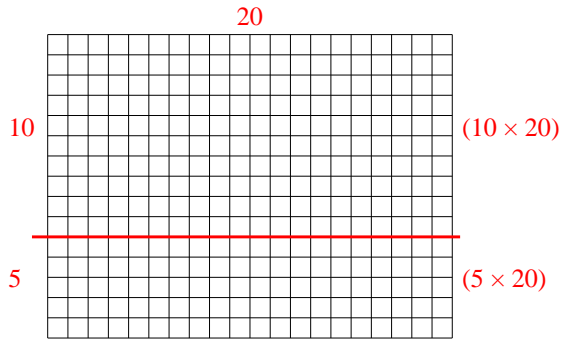
5. _____

6. _____

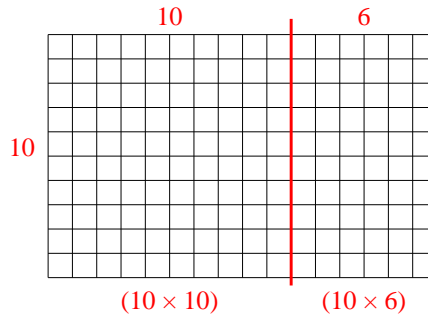


Usa le griglie fornite per calcolare i risultati.

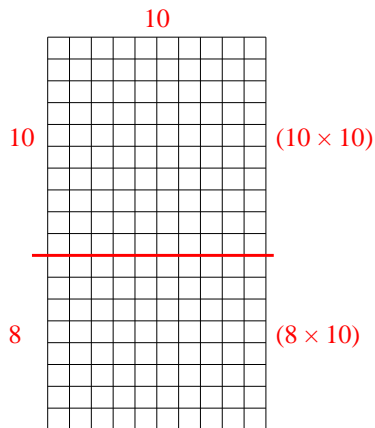
1) $15 \times 20 =$



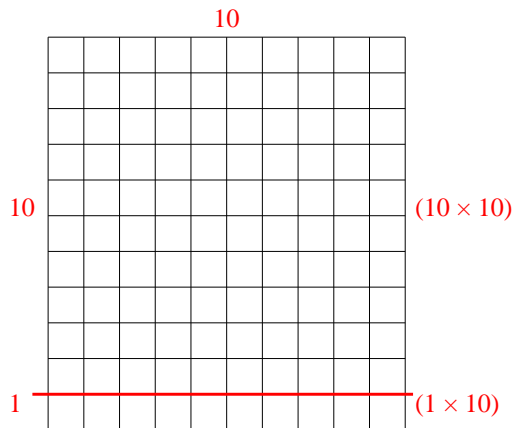
2) $10 \times 16 =$



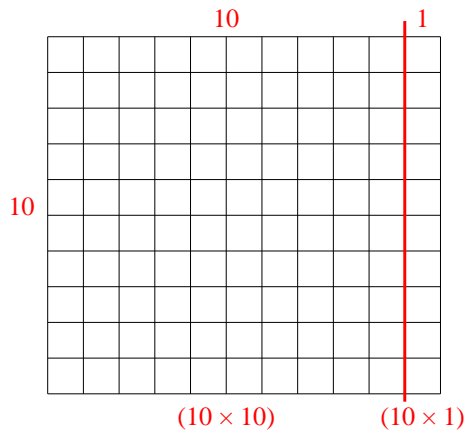
3) $18 \times 10 =$



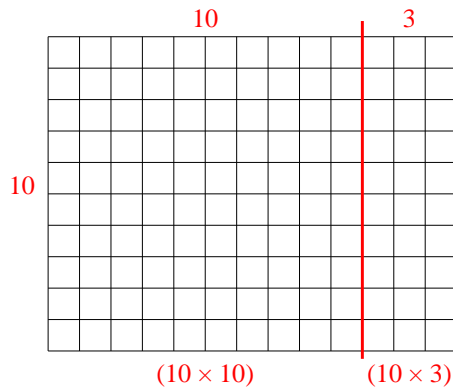
4) $11 \times 10 =$



5) $10 \times 11 =$



6) $10 \times 13 =$




Risposte

1. 300
2. 160
3. 180
4. 110
5. 110
6. 130




Usa le griglie fornite per calcolare i risultati.


1) $19 \times 10 =$




2) $12 \times 10 =$




3) $10 \times 12 =$




4) $16 \times 10 =$



5) $10 \times 16 =$



6) $10 \times 13 =$



Risposte

1. _____

2. _____

3. _____

4. _____

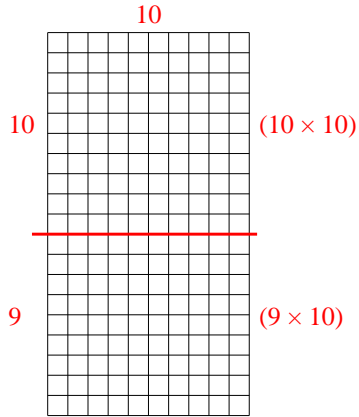
5. _____

6. _____

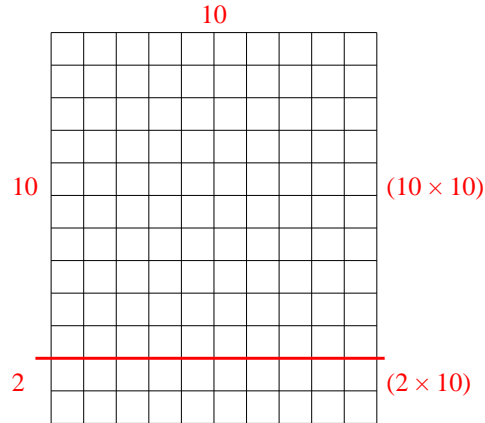


Usa le griglie fornite per calcolare i risultati.

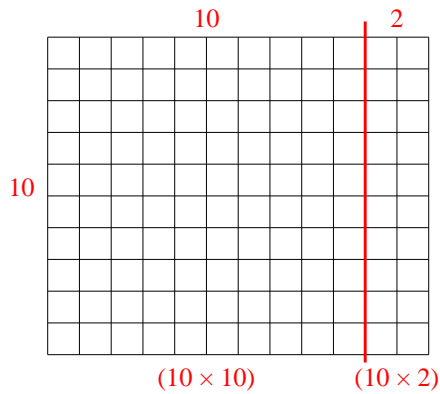
1) $19 \times 10 =$



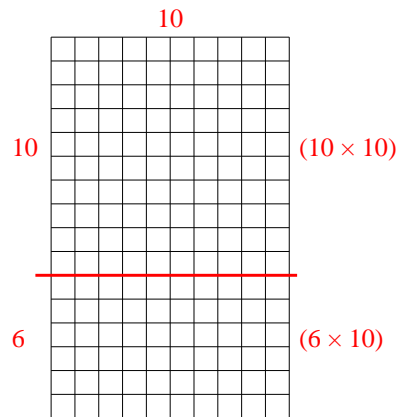
2) $12 \times 10 =$



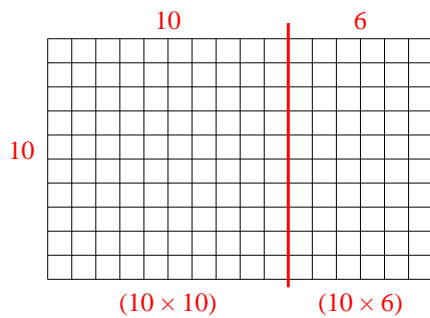
3) $10 \times 12 =$



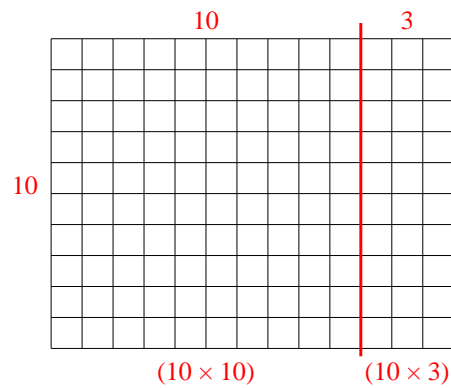
4) $16 \times 10 =$



5) $10 \times 16 =$



6) $10 \times 13 =$




Risposte

1. 190
2. 120
3. 120
4. 160
5. 160
6. 130

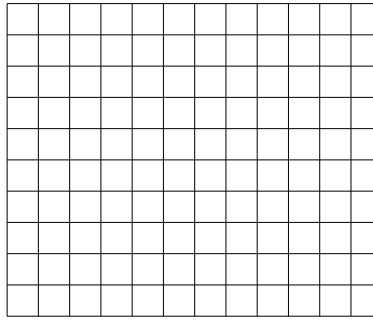


Usa le griglie fornite per calcolare i risultati.


1) $22 \times 10 =$




2) $10 \times 12 =$




3) $17 \times 10 =$




4) $10 \times 18 =$



5) $15 \times 10 =$



6) $10 \times 14 =$



Risposte

1. _____

2. _____

3. _____

4. _____

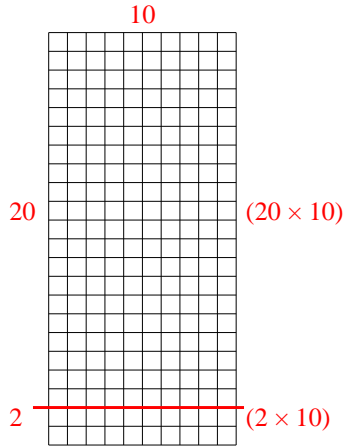
5. _____

6. _____

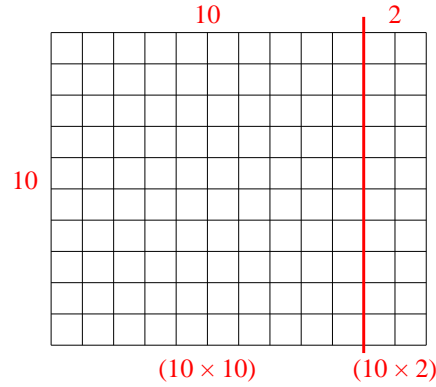


Usa le griglie fornite per calcolare i risultati.

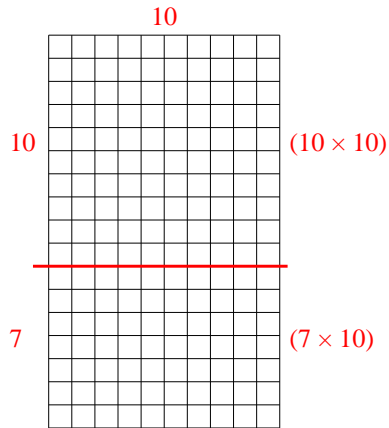
1) $22 \times 10 =$



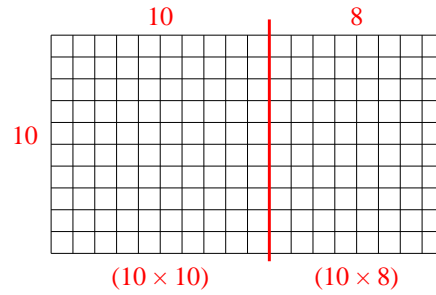
2) $10 \times 12 =$



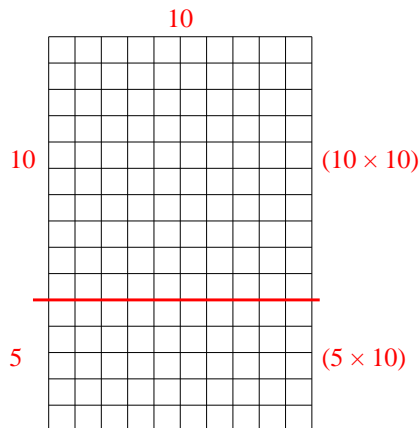
3) $17 \times 10 =$



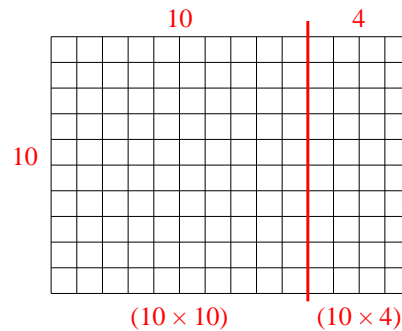
4) $10 \times 18 =$



5) $15 \times 10 =$



6) $10 \times 14 =$




Risposte

1. 220
2. 120
3. 170
4. 180
5. 150
6. 140




Usa le griglie fornite per calcolare i risultati.


1) $28 \times 10 =$




2) $11 \times 20 =$




3) $10 \times 21 =$




4) $10 \times 28 =$



5) $10 \times 18 =$



6) $10 \times 16 =$



Risposte

1. _____

2. _____

3. _____

4. _____

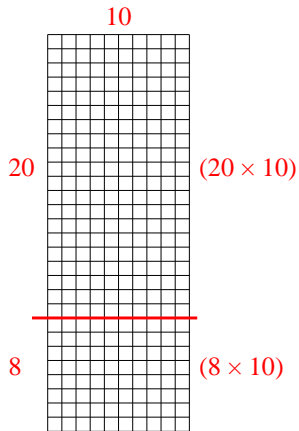
5. _____

6. _____

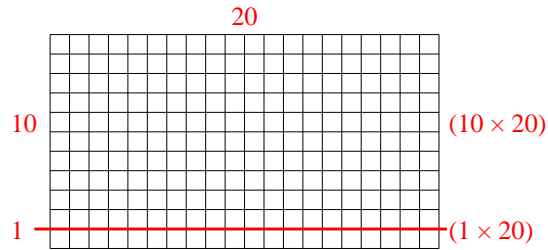


Usa le griglie fornite per calcolare i risultati.

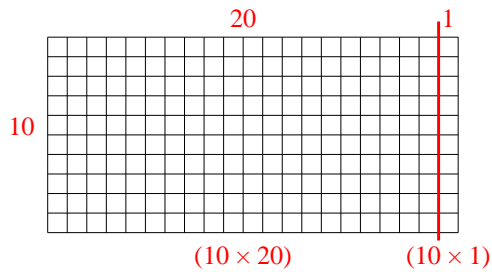
1) $28 \times 10 =$



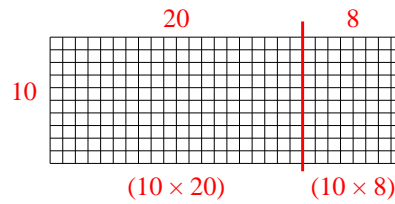
2) $11 \times 20 =$



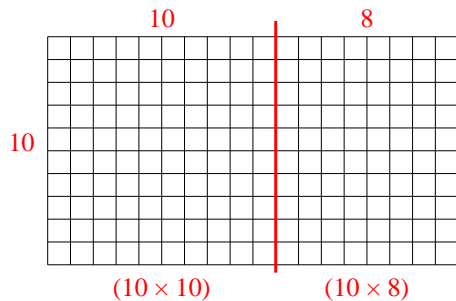
3) $10 \times 21 =$



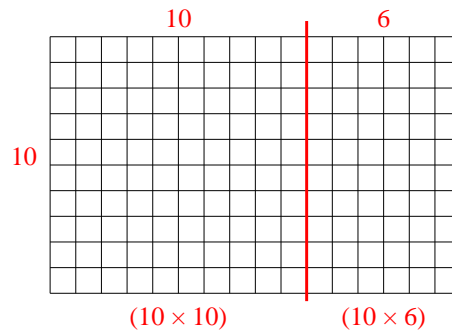
4) $10 \times 28 =$



5) $10 \times 18 =$



6) $10 \times 16 =$



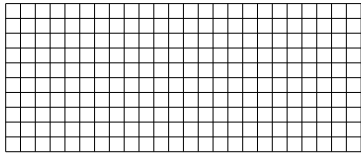
Risposte

1. 280
2. 220
3. 210
4. 280
5. 180
6. 160




Usa le griglie fornite per calcolare i risultati.


1) $10 \times 24 =$




2) $28 \times 10 =$




3) $21 \times 10 =$




4) $10 \times 17 =$



5) $10 \times 14 =$



6) $19 \times 10 =$



Risposte

1. _____

2. _____

3. _____

4. _____

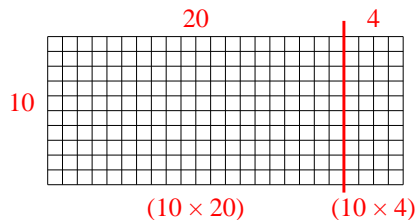
5. _____

6. _____

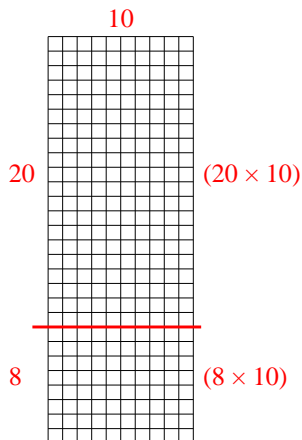


Usa le griglie fornite per calcolare i risultati.

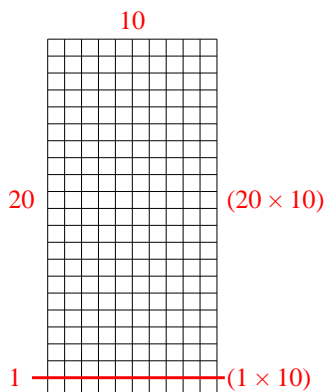
1) $10 \times 24 =$



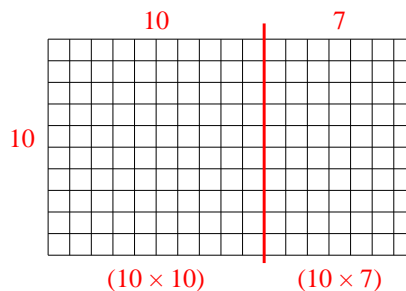
2) $28 \times 10 =$



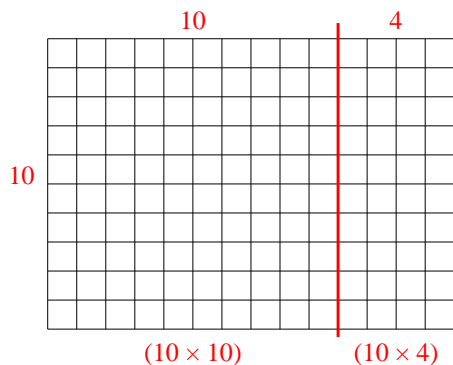
3) $21 \times 10 =$



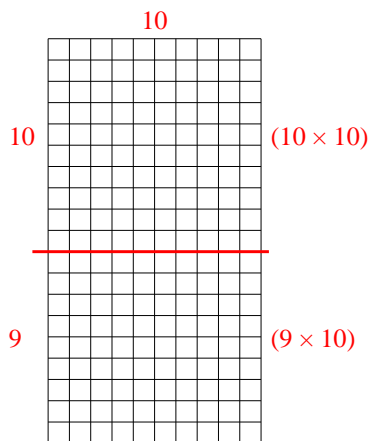
4) $10 \times 17 =$



5) $10 \times 14 =$



6) $19 \times 10 =$



Risposte

1. 240

2. 280

3. 210

4. 170

5. 140

6. 190