





Usa le griglie fornite per calcolare i risultati.


1) $28 \times 10 =$




2) $11 \times 20 =$




3) $10 \times 21 =$




4) $10 \times 28 =$



5) $10 \times 18 =$



6) $10 \times 16 =$



Risposte

1. _____

2. _____

3. _____

4. _____

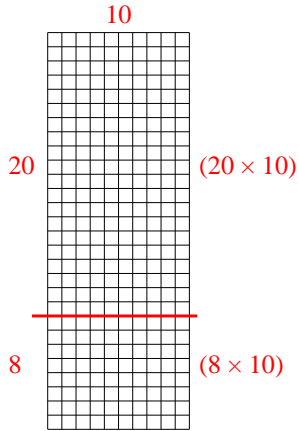
5. _____

6. _____

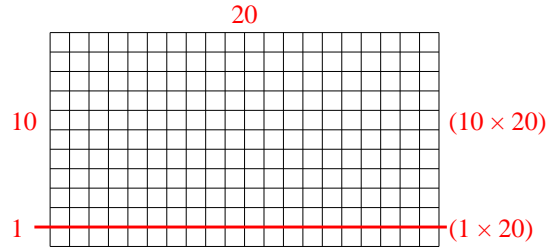


Usa le griglie fornite per calcolare i risultati.

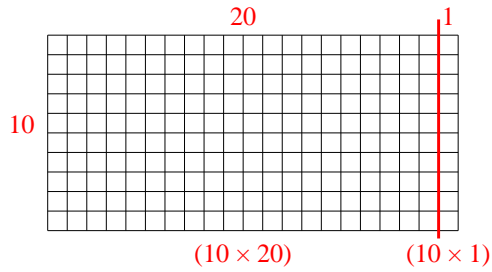
1) $28 \times 10 =$



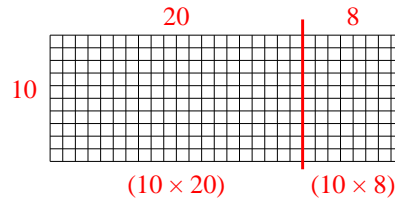
2) $11 \times 20 =$



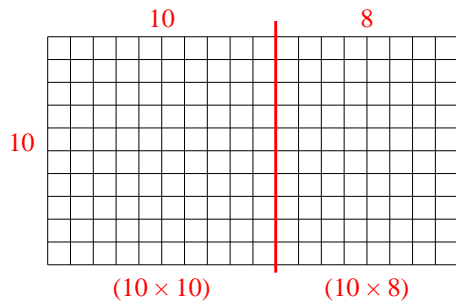
3) $10 \times 21 =$



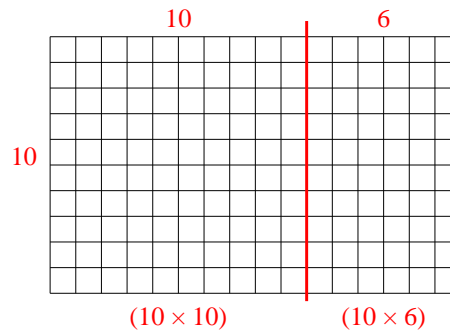
4) $10 \times 28 =$



5) $10 \times 18 =$



6) $10 \times 16 =$



Risposte

1. 280
2. 220
3. 210
4. 280
5. 180
6. 160