


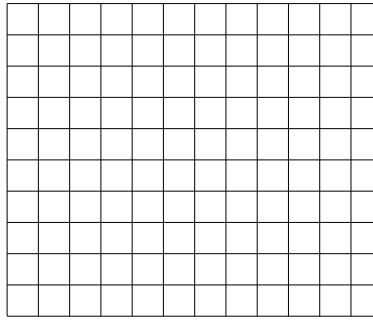


Usa le griglie fornite per calcolare i risultati.


1) $22 \times 10 =$




2) $10 \times 12 =$




3) $17 \times 10 =$




4) $10 \times 18 =$



5) $15 \times 10 =$



6) $10 \times 14 =$



Risposte

1. _____

2. _____

3. _____

4. _____

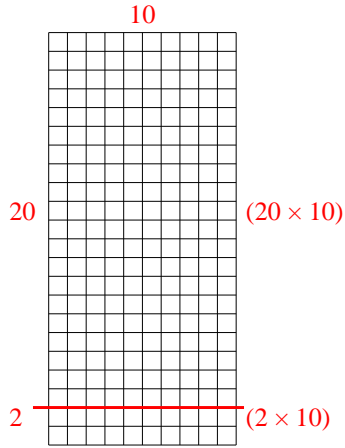
5. _____

6. _____

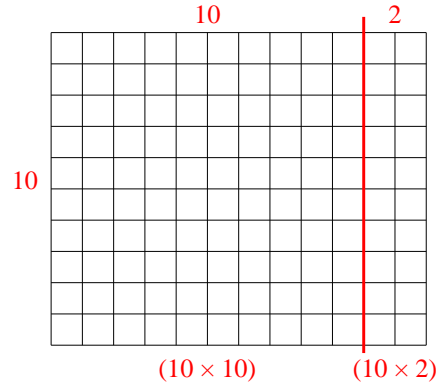


Usa le griglie fornite per calcolare i risultati.

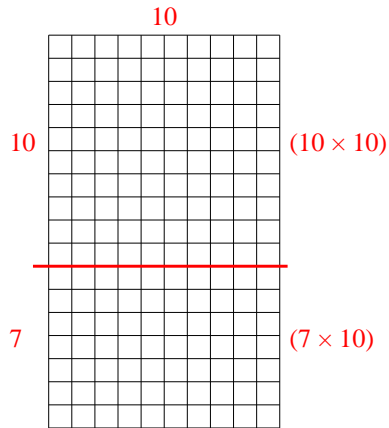
1) $22 \times 10 =$



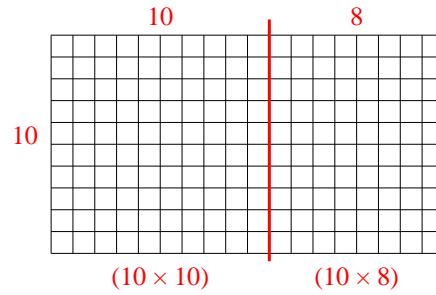
2) $10 \times 12 =$



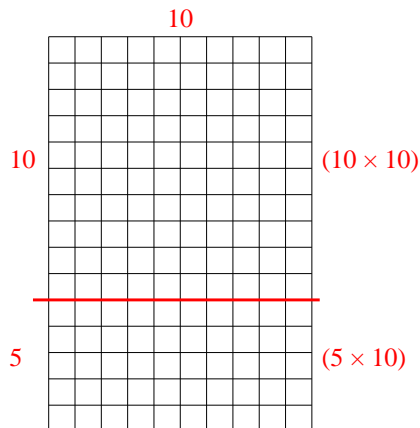
3) $17 \times 10 =$



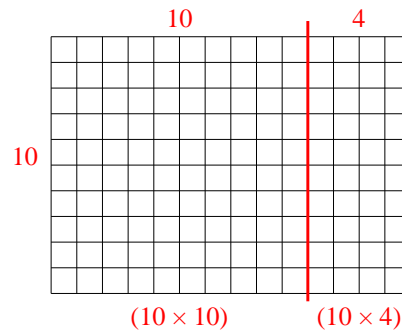
4) $10 \times 18 =$



5) $15 \times 10 =$



6) $10 \times 14 =$



Risposte

1. 220
2. 120
3. 170
4. 180
5. 150
6. 140