





Usa le griglie fornite per calcolare i risultati.


1) $19 \times 10 =$




2) $12 \times 10 =$



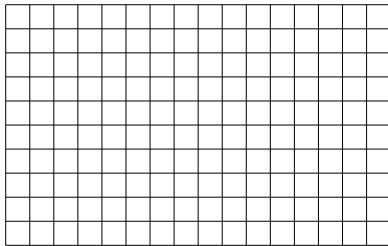
3) $10 \times 12 =$




4) $16 \times 10 =$



5) $10 \times 16 =$



6) $10 \times 13 =$



Risposte

1. _____

2. _____

3. _____

4. _____

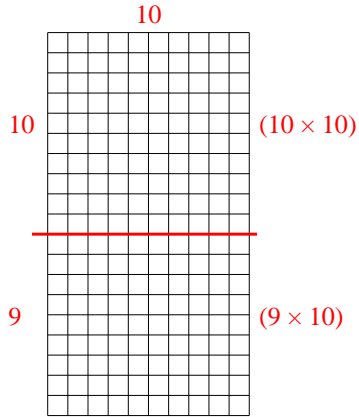
5. _____

6. _____

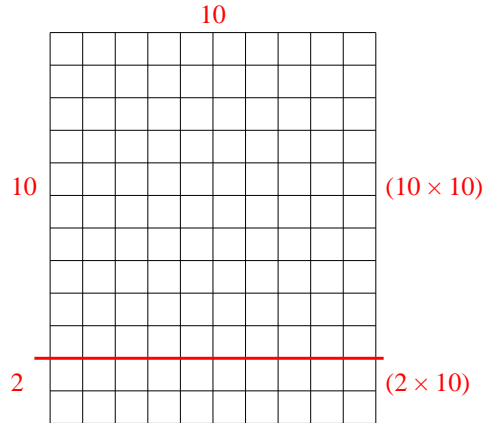


Usa le griglie fornite per calcolare i risultati.

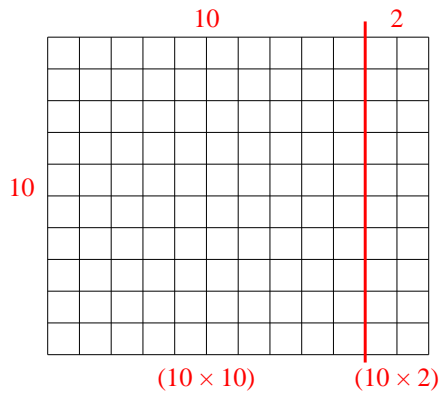
1) $19 \times 10 =$



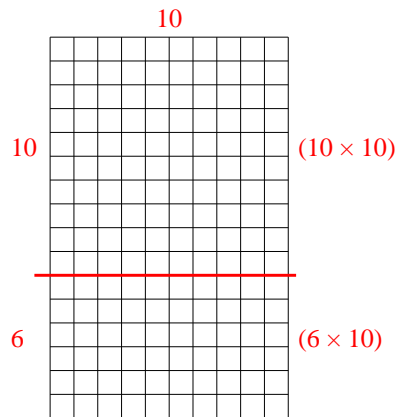
2) $12 \times 10 =$



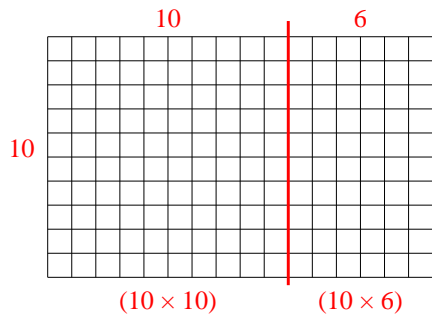
3) $10 \times 12 =$



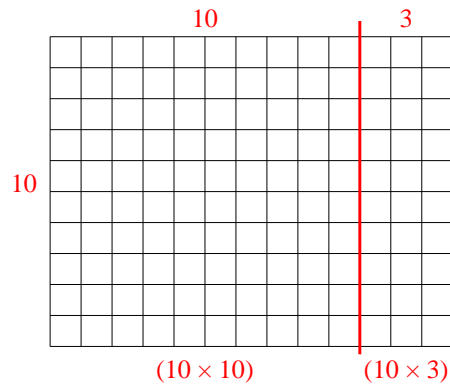
4) $16 \times 10 =$



5) $10 \times 16 =$



6) $10 \times 13 =$



Risposte

1. 190
2. 120
3. 120
4. 160
5. 160
6. 130