


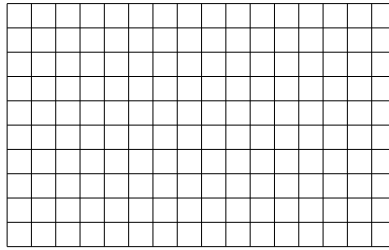


Usa le griglie fornite per calcolare i risultati.


1)  $15 \times 20 =$




2)  $10 \times 16 =$




3)  $18 \times 10 =$




4)  $11 \times 10 =$



5)  $10 \times 11 =$



6)  $10 \times 13 =$



**Risposte**

1. \_\_\_\_\_

2. \_\_\_\_\_

3. \_\_\_\_\_

4. \_\_\_\_\_

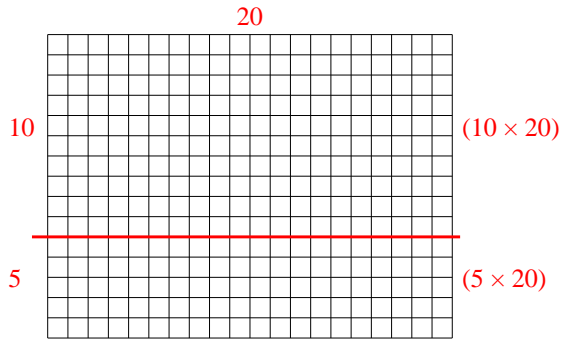
5. \_\_\_\_\_

6. \_\_\_\_\_

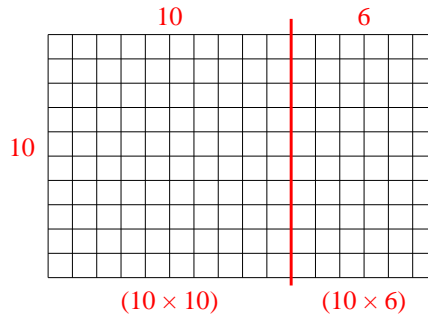


Usa le griglie fornite per calcolare i risultati.

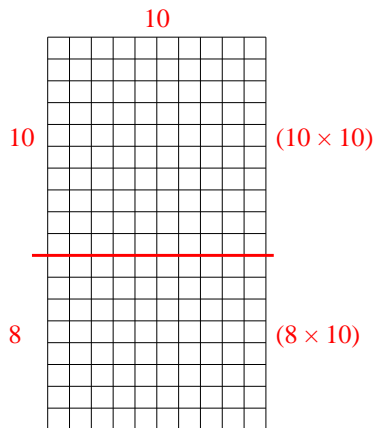
1)  $15 \times 20 =$



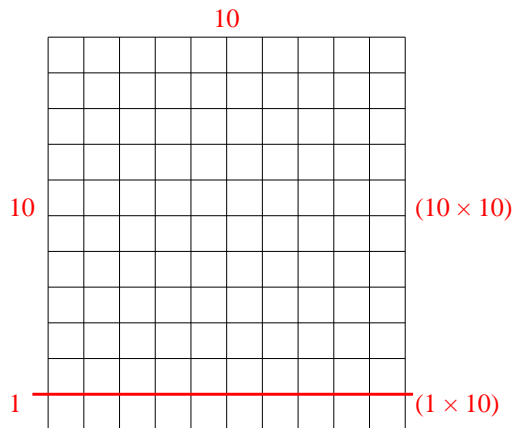
2)  $10 \times 16 =$



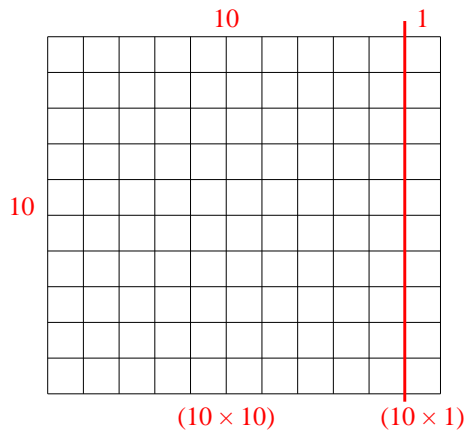
3)  $18 \times 10 =$



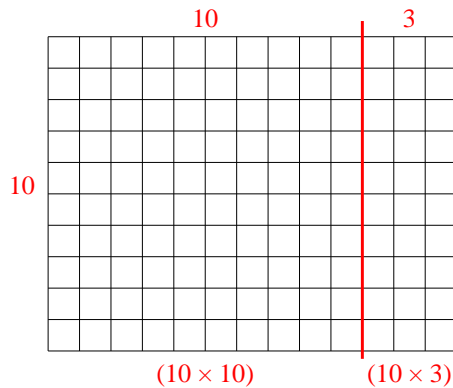
4)  $11 \times 10 =$



5)  $10 \times 11 =$



6)  $10 \times 13 =$



Risposte

1. 300
2. 160
3. 180
4. 110
5. 110
6. 130