


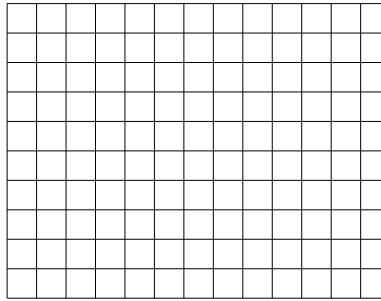


Usa le griglie fornite per calcolare i risultati.


1)  $11 \times 10 =$



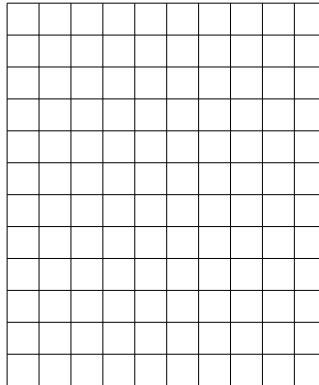
2)  $10 \times 13 =$




3)  $17 \times 10 =$




4)  $12 \times 10 =$



5)  $10 \times 15 =$



6)  $18 \times 10 =$



**Risposte**

1. \_\_\_\_\_

2. \_\_\_\_\_

3. \_\_\_\_\_

4. \_\_\_\_\_

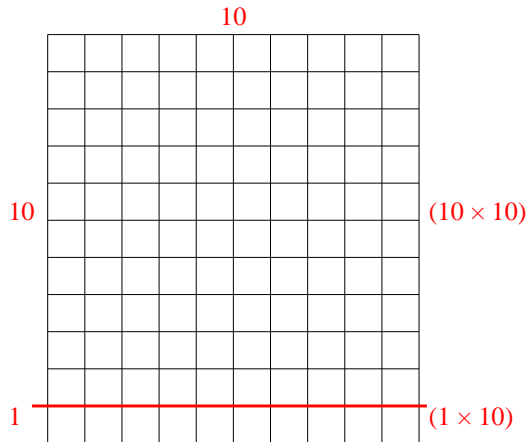
5. \_\_\_\_\_

6. \_\_\_\_\_

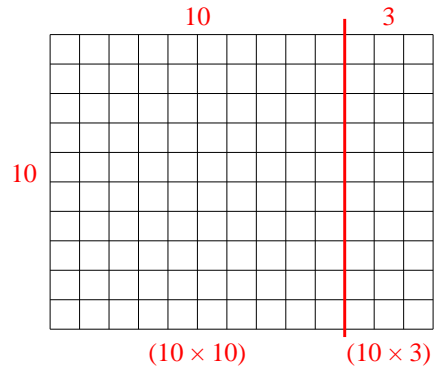


Usa le griglie fornite per calcolare i risultati.

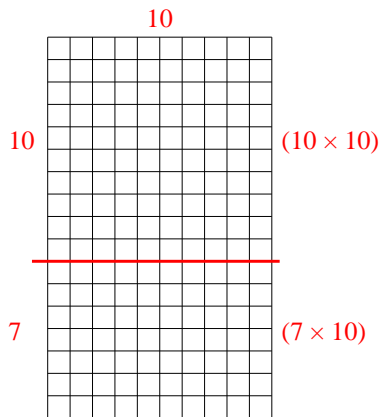
1)  $11 \times 10 =$



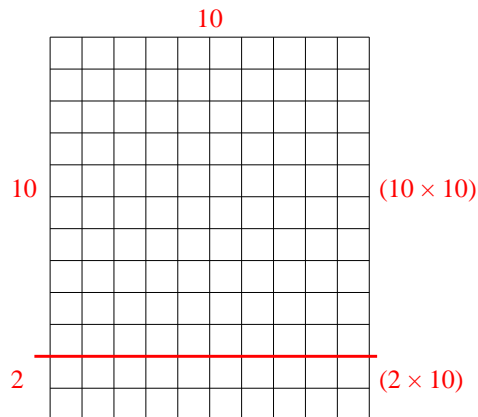
2)  $10 \times 13 =$



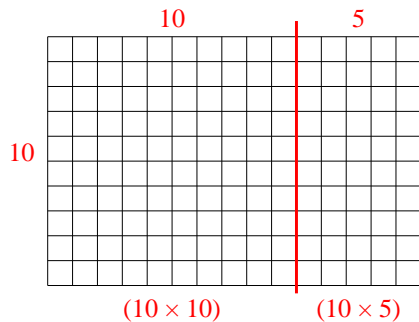
3)  $17 \times 10 =$



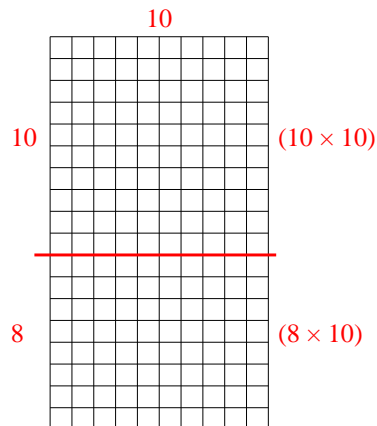
4)  $12 \times 10 =$



5)  $10 \times 15 =$



6)  $18 \times 10 =$



Risposte

1. 110
2. 130
3. 170
4. 120
5. 150
6. 180