





Usa le griglie fornite per calcolare i risultati.


1)  $28 \times 10 =$




2)  $11 \times 10 =$




3)  $17 \times 10 =$




4)  $10 \times 11 =$



5)  $10 \times 12 =$



6)  $10 \times 18 =$



**Risposte**

1. \_\_\_\_\_

2. \_\_\_\_\_

3. \_\_\_\_\_

4. \_\_\_\_\_

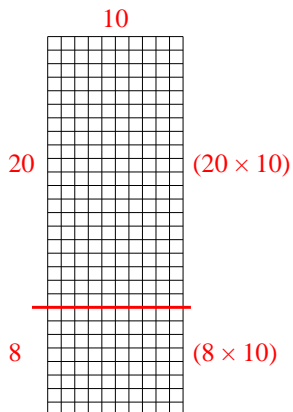
5. \_\_\_\_\_

6. \_\_\_\_\_

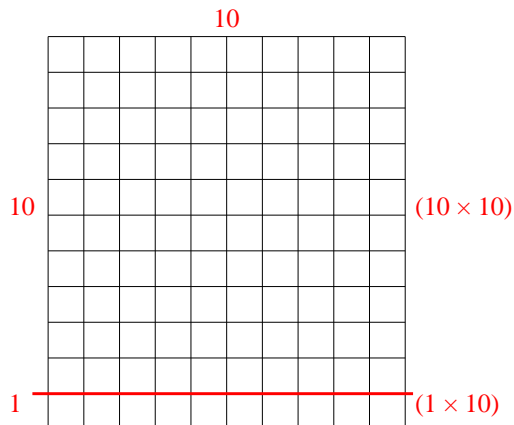


Usa le griglie fornite per calcolare i risultati.

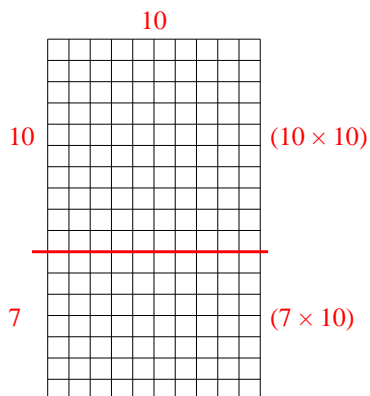
1)  $28 \times 10 =$



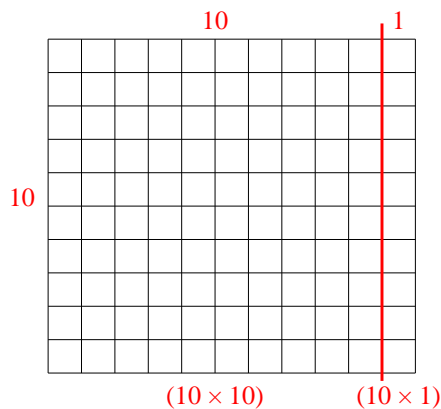
2)  $11 \times 10 =$



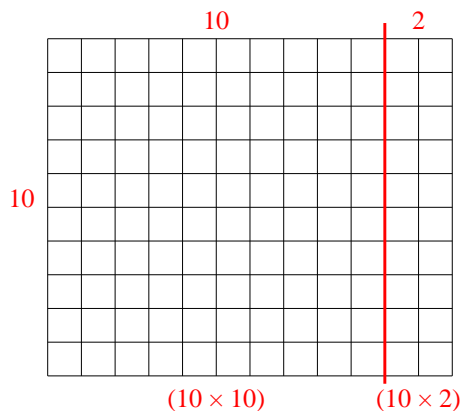
3)  $17 \times 10 =$



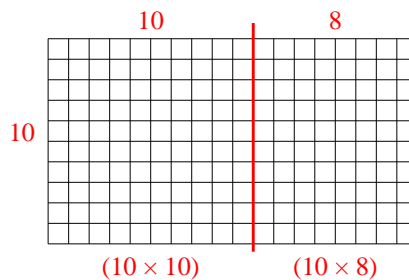
4)  $10 \times 11 =$



5)  $10 \times 12 =$



6)  $10 \times 18 =$



**Risposte**

1. 280

2. 110

3. 170

4. 110

5. 120

6. 180