





Usa le griglie fornite per calcolare i risultati.


1)  $10 \times 19 =$




2)  $10 \times 15 =$




3)  $13 \times 10 =$




4)  $10 \times 14 =$



5)  $10 \times 11 =$



6)  $16 \times 10 =$



**Risposte**

1. \_\_\_\_\_

2. \_\_\_\_\_

3. \_\_\_\_\_

4. \_\_\_\_\_

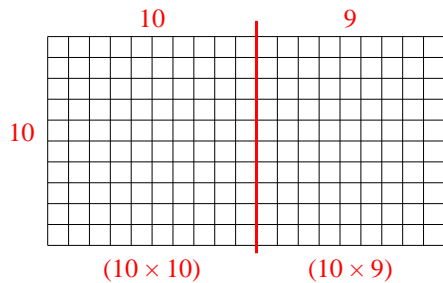
5. \_\_\_\_\_

6. \_\_\_\_\_

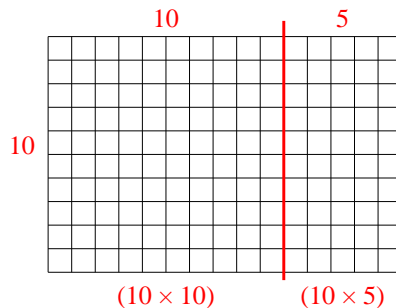


Usa le griglie fornite per calcolare i risultati.

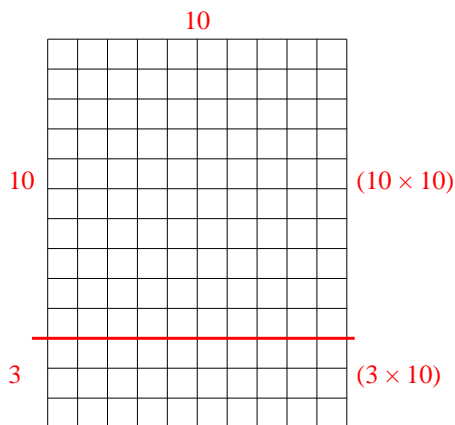
1)  $10 \times 19 =$



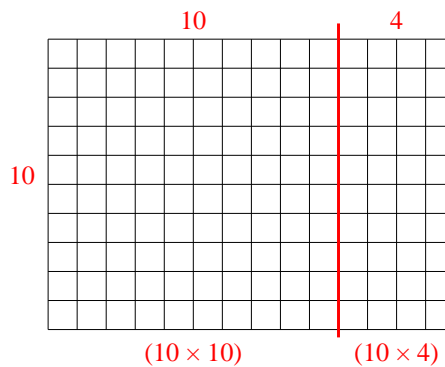
2)  $10 \times 15 =$



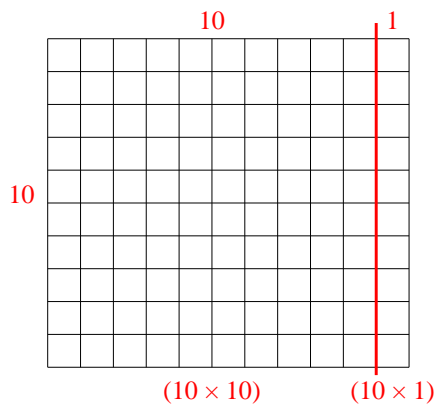
3)  $13 \times 10 =$



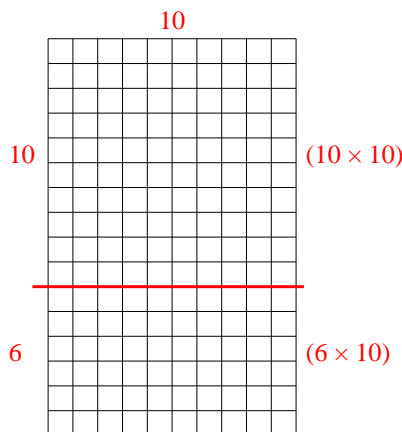
4)  $10 \times 14 =$



5)  $10 \times 11 =$



6)  $16 \times 10 =$



Risposte

1. 190

2. 150

3. 130

4. 140

5. 110

6. 160