





Usa le griglie fornite per calcolare i risultati.


1)  $20 \times 13 =$




2)  $17 \times 10 =$




3)  $10 \times 13 =$




4)  $14 \times 10 =$



5)  $10 \times 15 =$



6)  $10 \times 17 =$



**Risposte**

1. \_\_\_\_\_

2. \_\_\_\_\_

3. \_\_\_\_\_

4. \_\_\_\_\_

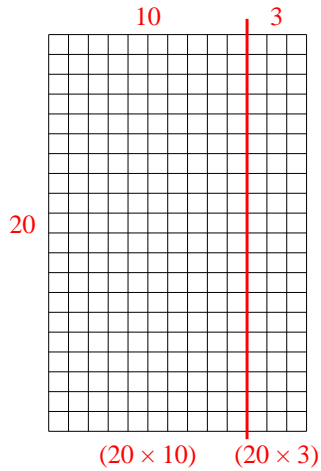
5. \_\_\_\_\_

6. \_\_\_\_\_

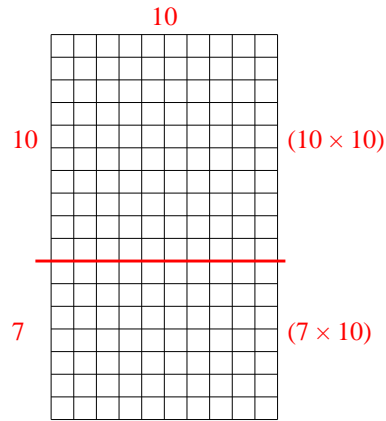


Usa le griglie fornite per calcolare i risultati.

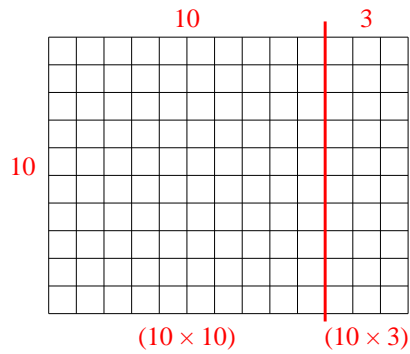
1)  $20 \times 13 =$



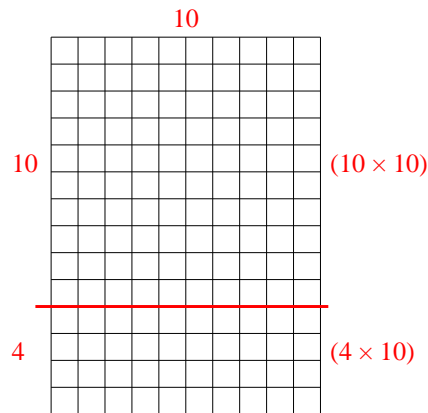
2)  $17 \times 10 =$



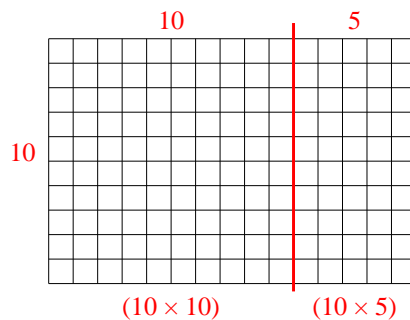
3)  $10 \times 13 =$



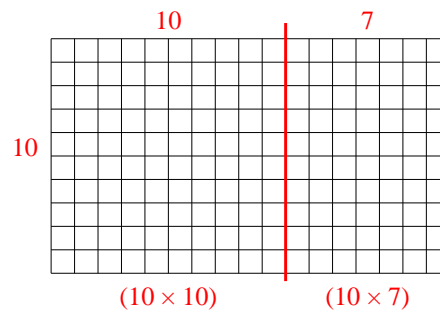
4)  $14 \times 10 =$



5)  $10 \times 15 =$



6)  $10 \times 17 =$



**Risposte**

1. 260
2. 170
3. 130
4. 140
5. 150
6. 170