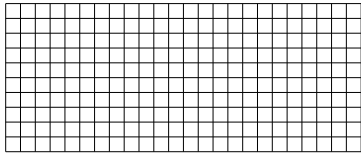





Usa le griglie fornite per calcolare i risultati.


1)  $10 \times 24 =$




2)  $28 \times 10 =$




3)  $21 \times 10 =$




4)  $10 \times 17 =$



5)  $10 \times 14 =$



6)  $19 \times 10 =$



**Risposte**

1. \_\_\_\_\_

2. \_\_\_\_\_

3. \_\_\_\_\_

4. \_\_\_\_\_

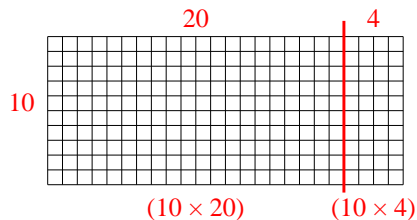
5. \_\_\_\_\_

6. \_\_\_\_\_

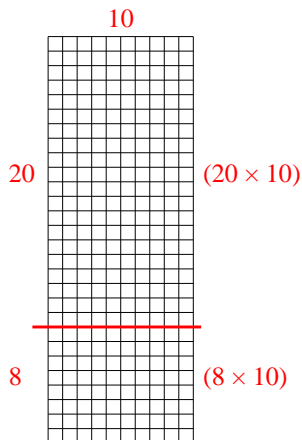


Usa le griglie fornite per calcolare i risultati.

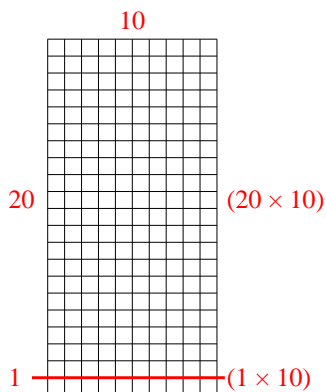
1)  $10 \times 24 =$



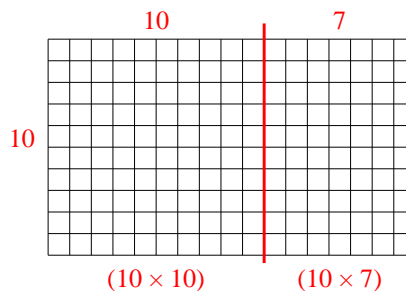
2)  $28 \times 10 =$



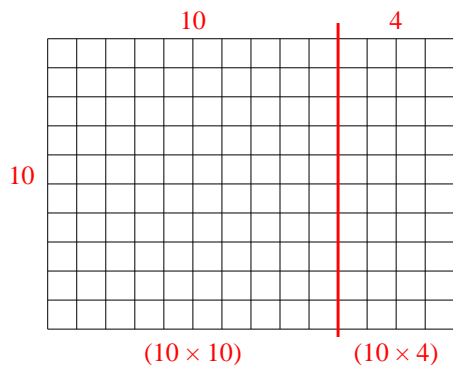
3)  $21 \times 10 =$



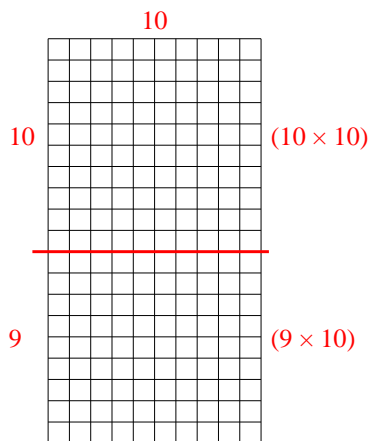
4)  $10 \times 17 =$



5)  $10 \times 14 =$



6)  $19 \times 10 =$



Risposte

1. 240
2. 280
3. 210
4. 170
5. 140
6. 190