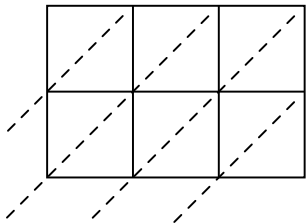


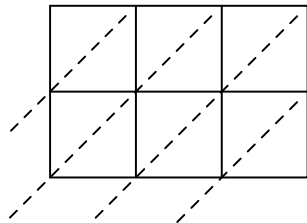


Usa la moltiplicazione del reticolo per risolvere ogni problema.

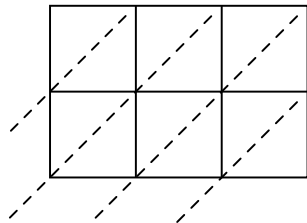
1) $639 \times 81 =$



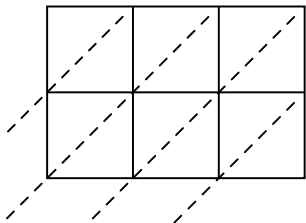
2) $871 \times 69 =$



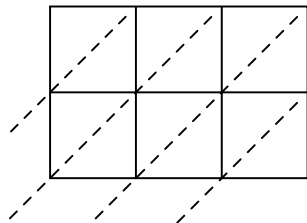
3) $336 \times 47 =$



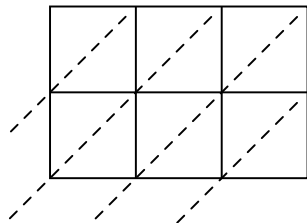
4) $519 \times 45 =$



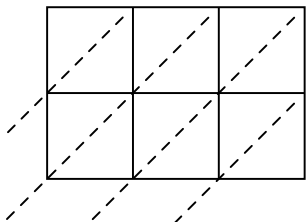
5) $920 \times 20 =$



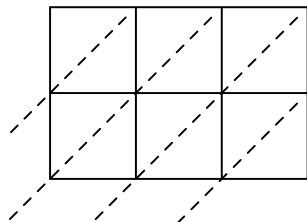
6) $966 \times 31 =$



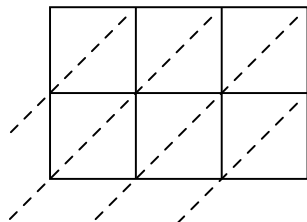
7) $844 \times 92 =$



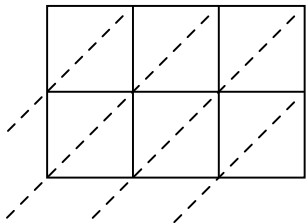
8) $352 \times 91 =$



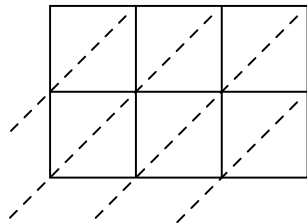
9) $541 \times 75 =$



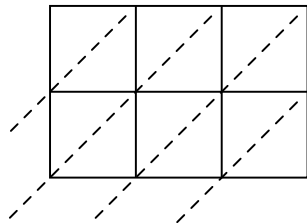
10) $963 \times 15 =$



11) $279 \times 38 =$



12) $152 \times 27 =$



Risposte

1. _____

2. _____

3. _____

4. _____

5. _____

6. _____

7. _____

8. _____

9. _____

10. _____

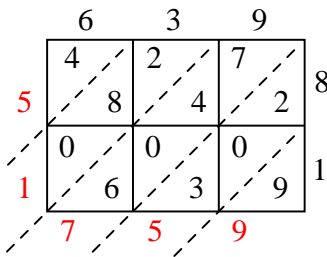
11. _____

12. _____

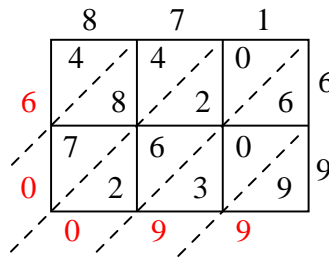


Usa la moltiplicazione del reticolo per risolvere ogni problema.

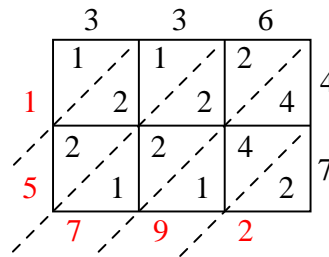
1) $639 \times 81 =$



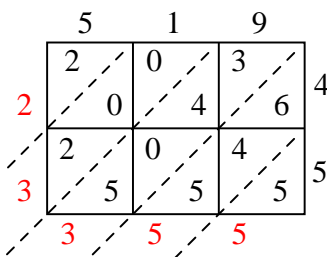
2) $871 \times 69 =$



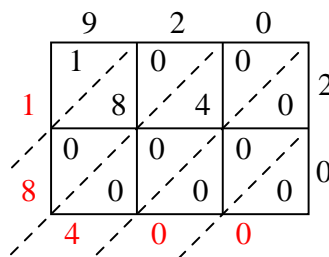
3) $336 \times 47 =$



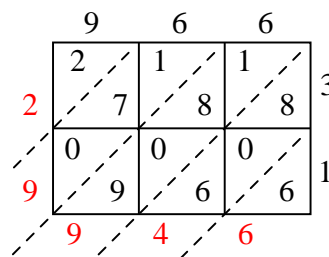
4) $519 \times 45 =$



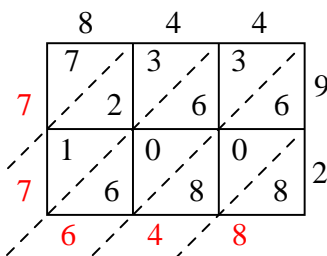
5) $920 \times 20 =$



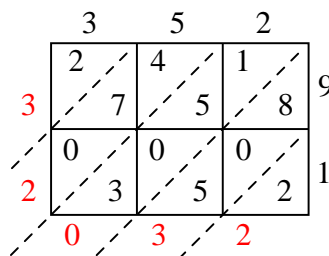
6) $966 \times 31 =$



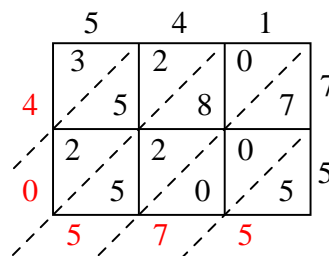
7) $844 \times 92 =$



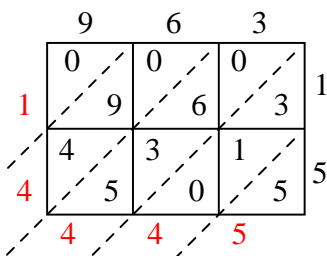
8) $352 \times 91 =$



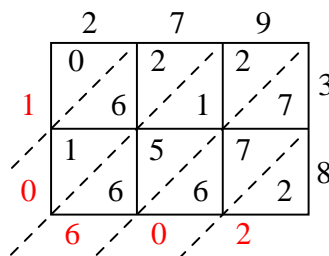
9) $541 \times 75 =$



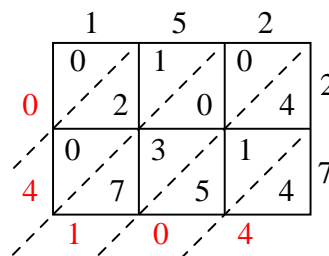
10) $963 \times 15 =$



11) $279 \times 38 =$



12) $152 \times 27 =$

**Risposte**1. **51.759**2. **60.099**3. **15.792**4. **23.355**5. **18.400**6. **29.946**7. **77.648**8. **32.032**9. **40.575**10. **14.445**11. **10.602**12. **4.104**