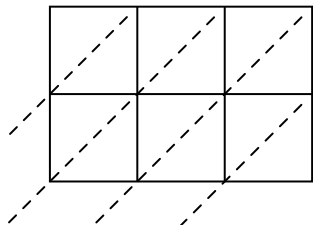


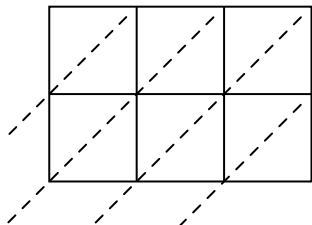


Usa la moltiplicazione del reticolo per risolvere ogni problema.

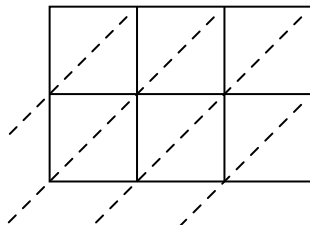
1) $233 \times 22 =$



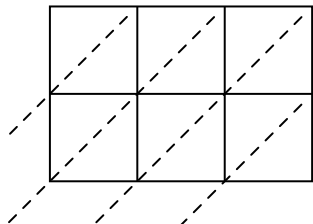
2) $685 \times 83 =$



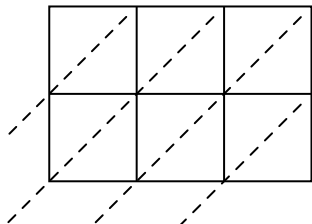
3) $677 \times 22 =$



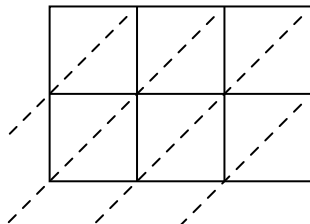
4) $825 \times 63 =$



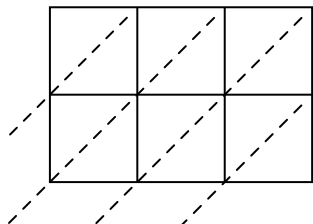
5) $928 \times 93 =$



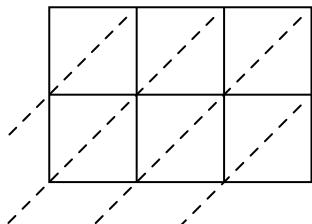
6) $647 \times 85 =$



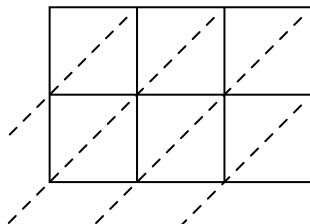
7) $173 \times 76 =$



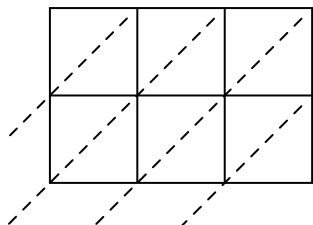
8) $910 \times 56 =$



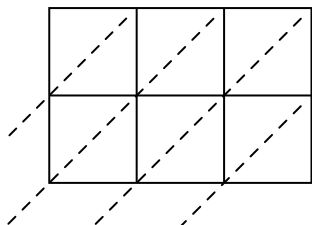
9) $745 \times 35 =$



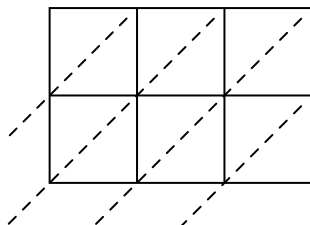
10) $124 \times 19 =$



11) $928 \times 79 =$



12) $847 \times 60 =$



Risposte

1. _____

2. _____

3. _____

4. _____

5. _____

6. _____

7. _____

8. _____

9. _____

10. _____

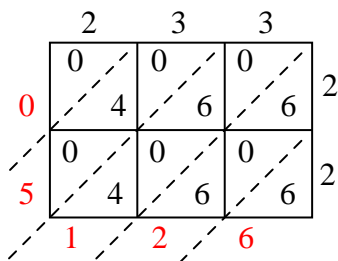
11. _____

12. _____

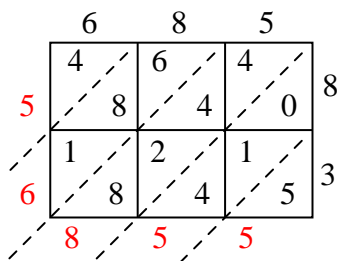


Usa la moltiplicazione del reticolo per risolvere ogni problema.

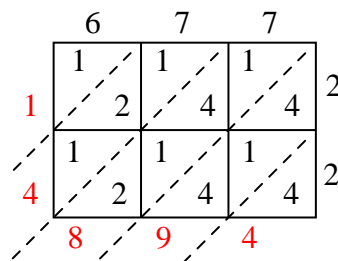
1) $233 \times 22 =$



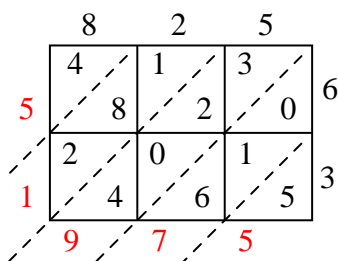
2) $685 \times 83 =$



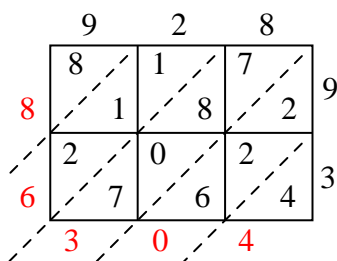
3) $677 \times 22 =$



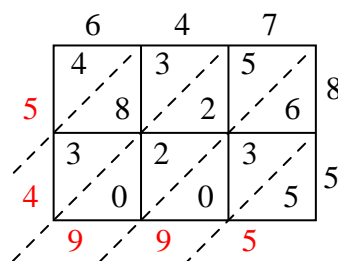
4) $825 \times 63 =$



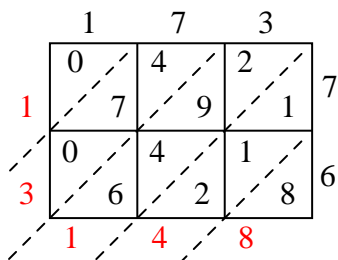
5) $928 \times 93 =$



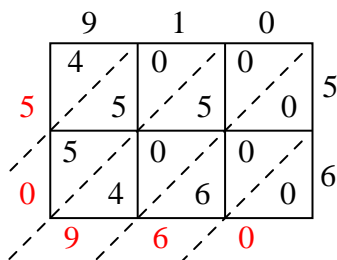
6) $647 \times 85 =$



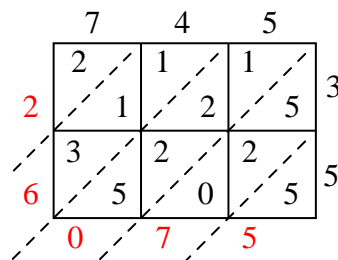
7) $173 \times 76 =$



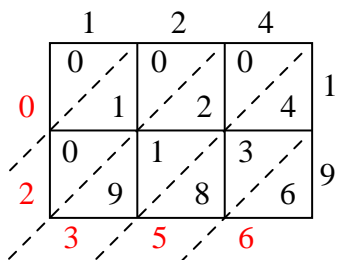
8) $910 \times 56 =$



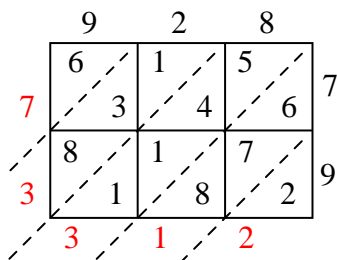
9) $745 \times 35 =$



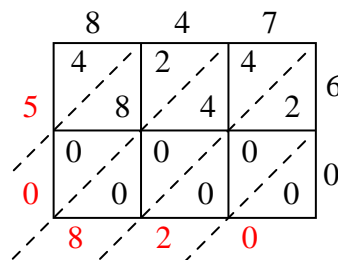
10) $124 \times 19 =$



11) $928 \times 79 =$



12) $847 \times 60 =$

**Risposte**1. 5.1262. 56.8553. 14.8944. 51.9755. 86.3046. 54.9957. 13.1488. 50.9609. 26.07510. 2.35611. 73.31212. 50.820