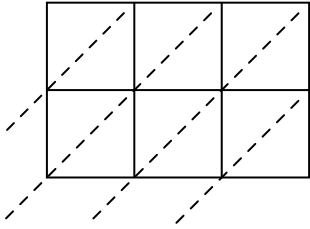


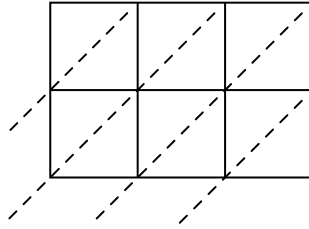


Usa la moltiplicazione del reticolo per risolvere ogni problema.

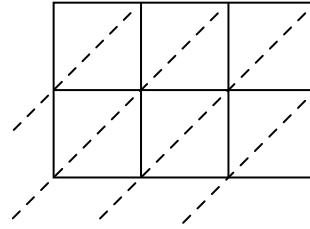
1) $594 \times 50 =$



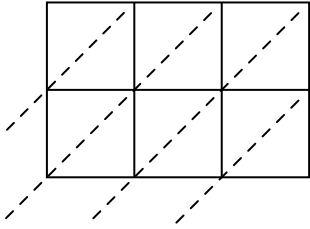
2) $936 \times 22 =$



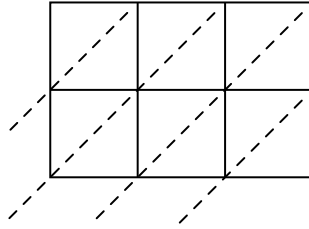
3) $913 \times 95 =$



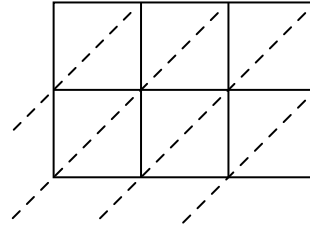
4) $214 \times 99 =$



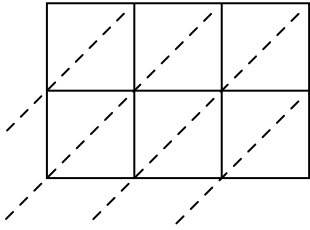
5) $183 \times 40 =$



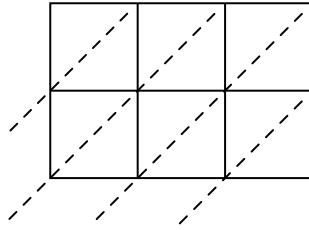
6) $903 \times 81 =$



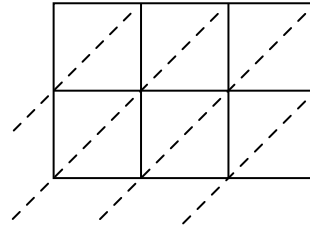
7) $963 \times 64 =$



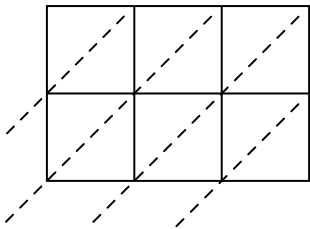
8) $838 \times 34 =$



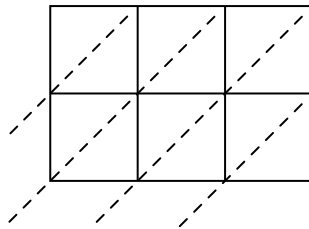
9) $863 \times 29 =$



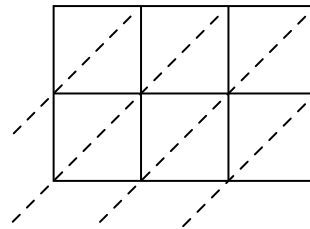
10) $104 \times 67 =$



11) $640 \times 22 =$



12) $134 \times 64 =$



Risposte

1. _____

2. _____

3. _____

4. _____

5. _____

6. _____

7. _____

8. _____

9. _____

10. _____

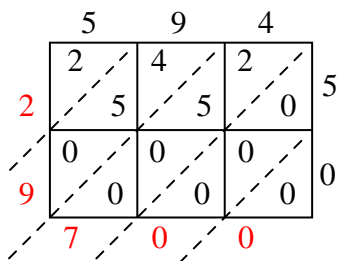
11. _____

12. _____

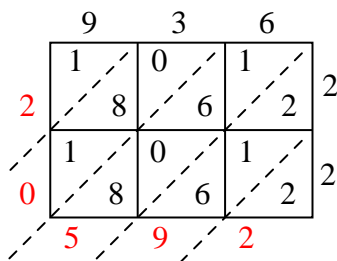


Usa la moltiplicazione del reticolo per risolvere ogni problema.

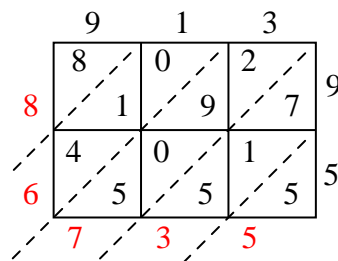
1) $594 \times 50 =$



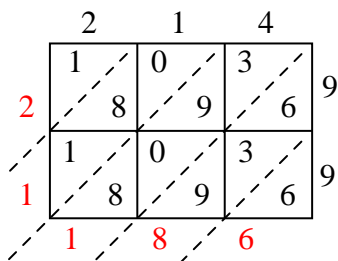
2) $936 \times 22 =$



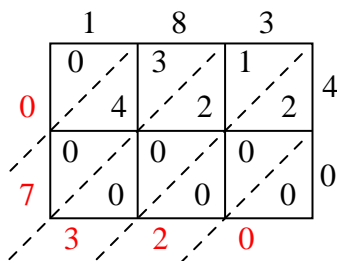
3) $913 \times 95 =$



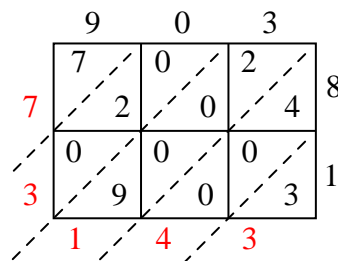
4) $214 \times 99 =$



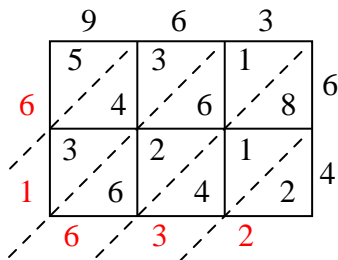
5) $183 \times 40 =$



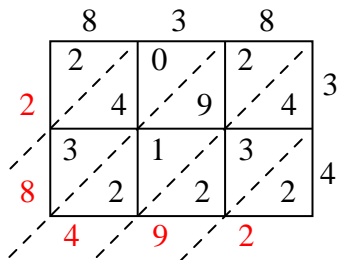
6) $903 \times 81 =$



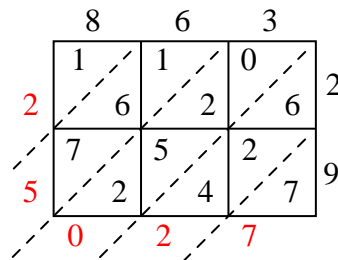
7) $963 \times 64 =$



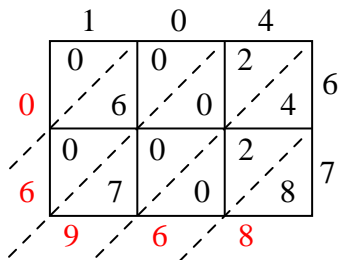
8) $838 \times 34 =$



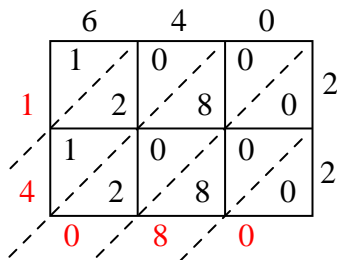
9) $863 \times 29 =$



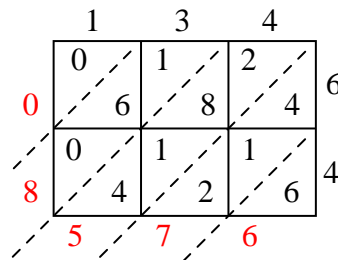
10) $104 \times 67 =$



11) $640 \times 22 =$



12) $134 \times 64 =$

**Risposte**1. 29.7002. 20.5923. 86.7354. 21.1865. 7.3206. 73.1437. 61.6328. 28.4929. 25.02710. 6.96811. 14.08012. 8.576