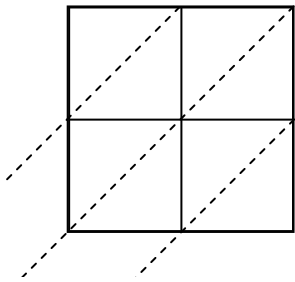


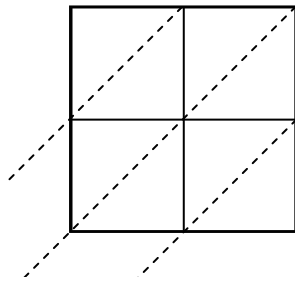


Usa la moltiplicazione del reticolo per risolvere ogni problema.

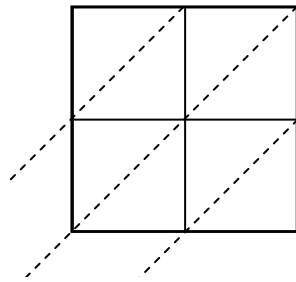
1) $48 \times 37 =$



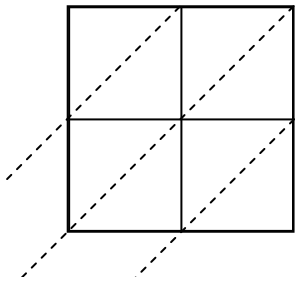
2) $92 \times 79 =$



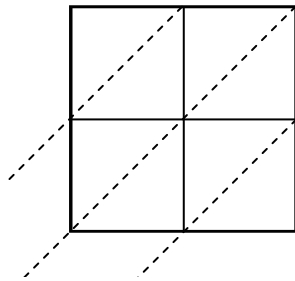
3) $97 \times 30 =$



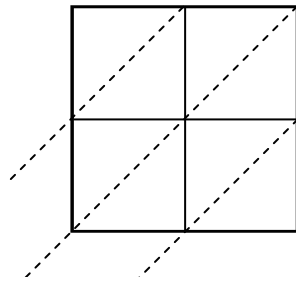
4) $72 \times 67 =$



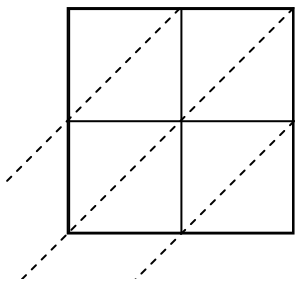
5) $91 \times 86 =$



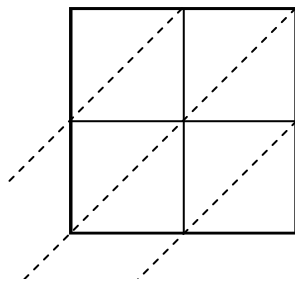
6) $58 \times 35 =$



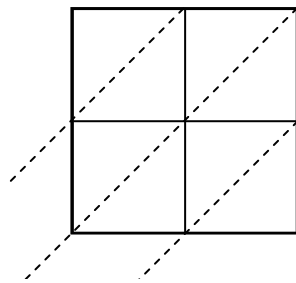
7) $89 \times 35 =$



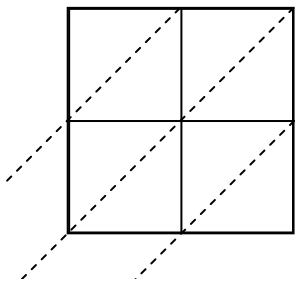
8) $13 \times 72 =$



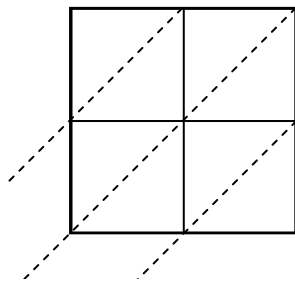
9) $62 \times 94 =$



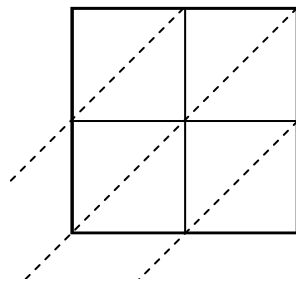
10) $81 \times 53 =$



11) $85 \times 38 =$



12) $35 \times 42 =$

**Risposte**

1. _____

2. _____

3. _____

4. _____

5. _____

6. _____

7. _____

8. _____

9. _____

10. _____

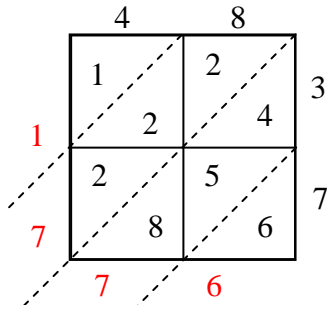
11. _____

12. _____

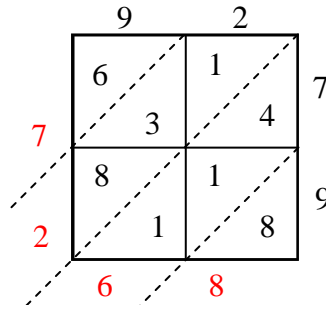


Usa la moltiplicazione del reticolo per risolvere ogni problema.

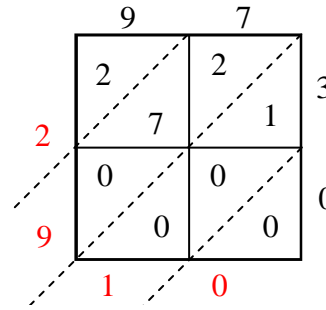
1) $48 \times 37 =$



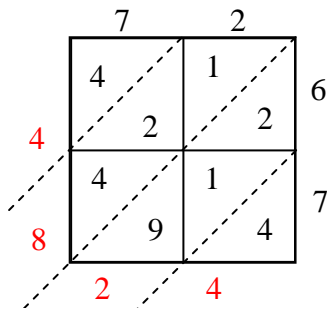
2) $92 \times 79 =$



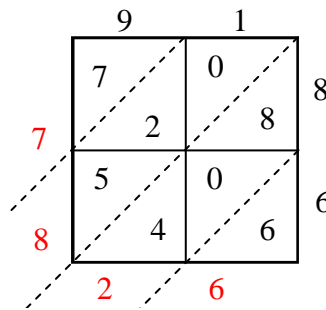
3) $97 \times 30 =$



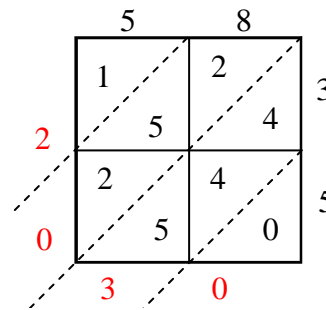
4) $72 \times 67 =$



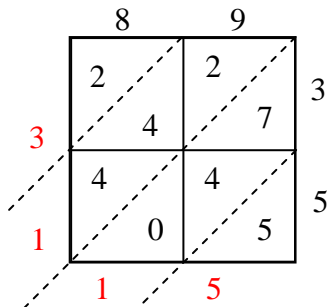
5) $91 \times 86 =$



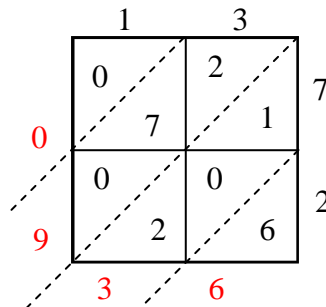
6) $58 \times 35 =$



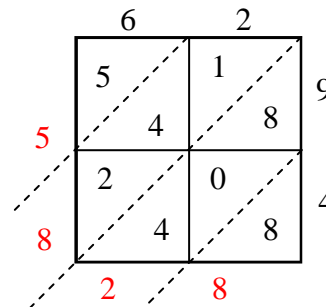
7) $89 \times 35 =$



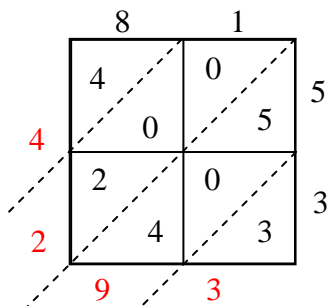
8) $13 \times 72 =$



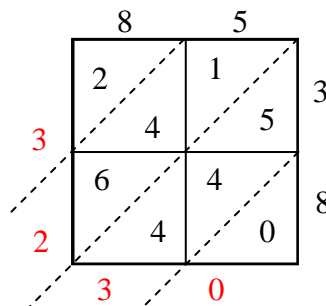
9) $62 \times 94 =$



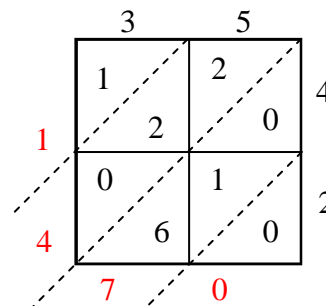
10) $81 \times 53 =$



11) $85 \times 38 =$



12) $35 \times 42 =$

**Risposte**1. 1.7762. 7.2683. 2.9104. 4.8245. 7.8266. 2.0307. 3.1158. 9369. 5.82810. 4.29311. 3.23012. 1.470