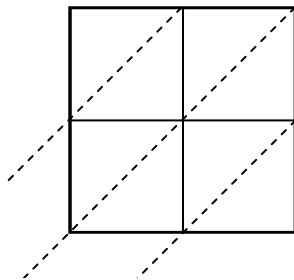


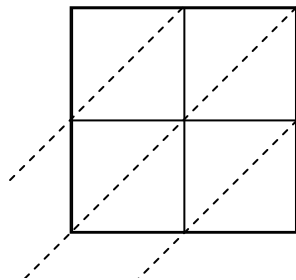


Usa la moltiplicazione del reticolo per risolvere ogni problema.

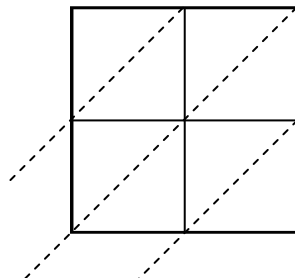
1) $25 \times 80 =$



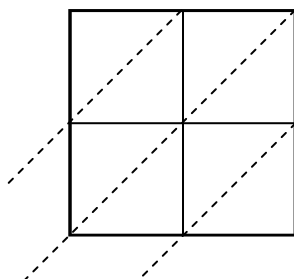
2) $51 \times 33 =$



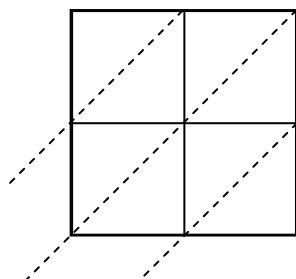
3) $18 \times 14 =$



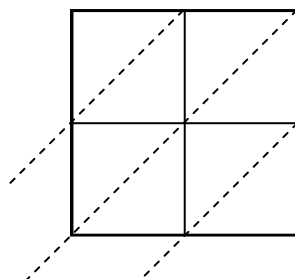
4) $22 \times 57 =$



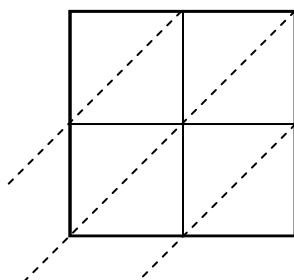
5) $77 \times 36 =$



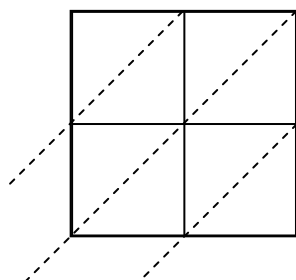
6) $91 \times 94 =$



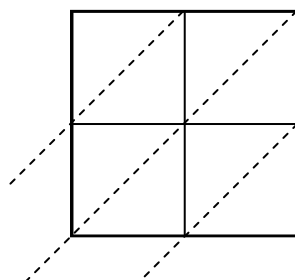
7) $29 \times 76 =$



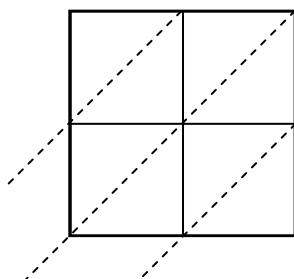
8) $64 \times 52 =$



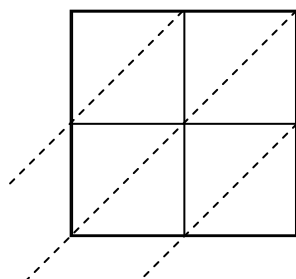
9) $18 \times 19 =$



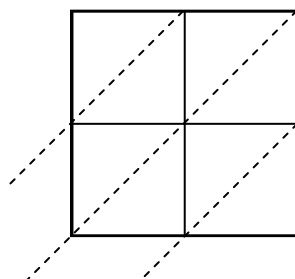
10) $61 \times 63 =$



11) $53 \times 65 =$



12) $68 \times 35 =$



Risposte

1. _____

2. _____

3. _____

4. _____

5. _____

6. _____

7. _____

8. _____

9. _____

10. _____

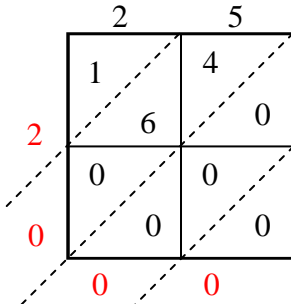
11. _____

12. _____

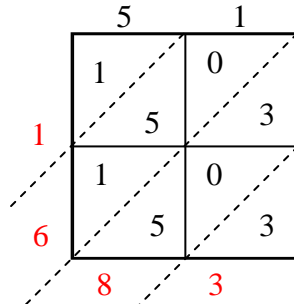


Usa la moltiplicazione del reticolo per risolvere ogni problema.

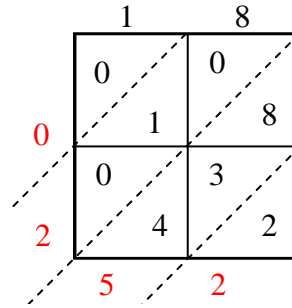
1) $25 \times 80 =$



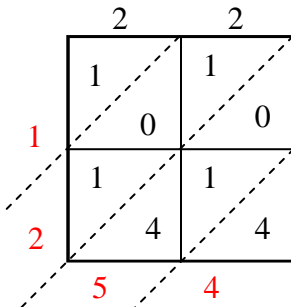
2) $51 \times 33 =$



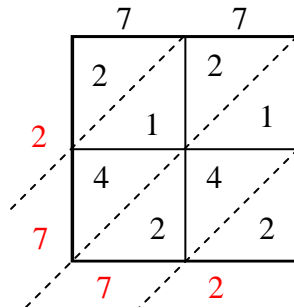
3) $18 \times 14 =$



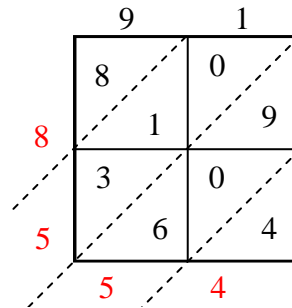
4) $22 \times 57 =$



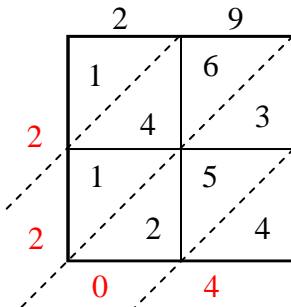
5) $77 \times 36 =$



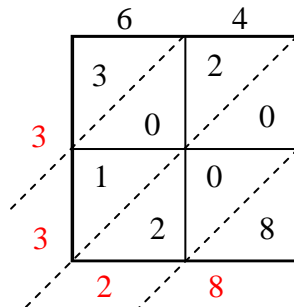
6) $91 \times 94 =$



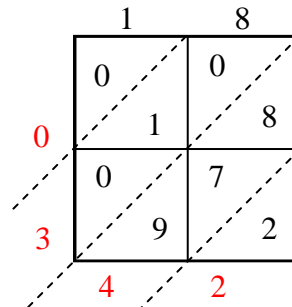
7) $29 \times 76 =$



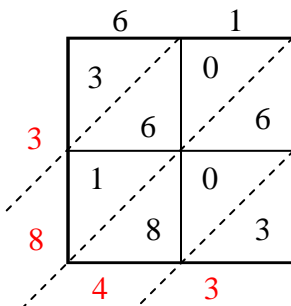
8) $64 \times 52 =$



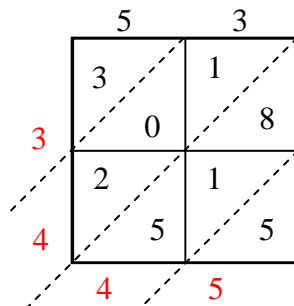
9) $18 \times 19 =$



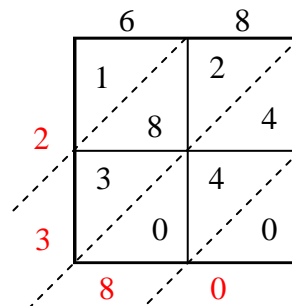
10) $61 \times 63 =$



11) $53 \times 65 =$



12) $68 \times 35 =$

**Risposte**1. **2.000**2. **1.683**3. **252**4. **1.254**5. **2.772**6. **8.554**7. **2.204**8. **3.328**9. **342**10. **3.843**11. **3.445**12. **2.380**