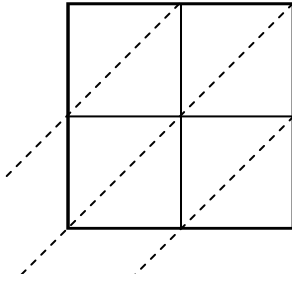


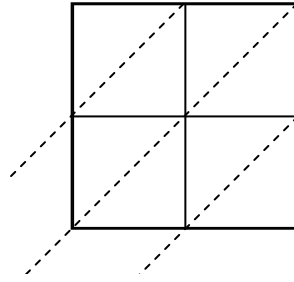


Usa la moltiplicazione del reticolo per risolvere ogni problema.

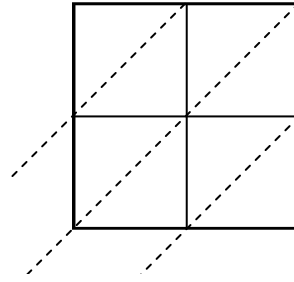
1) $54 \times 15 =$



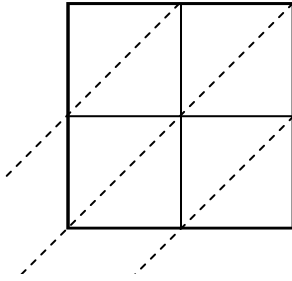
2) $79 \times 57 =$



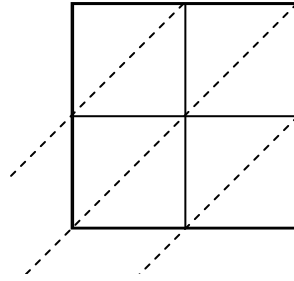
3) $91 \times 43 =$



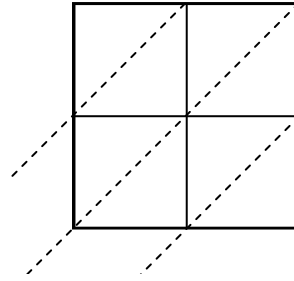
4) $58 \times 72 =$



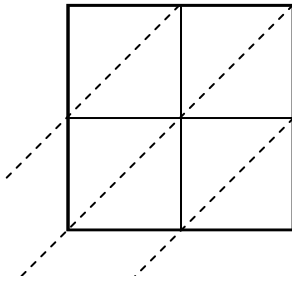
5) $24 \times 62 =$



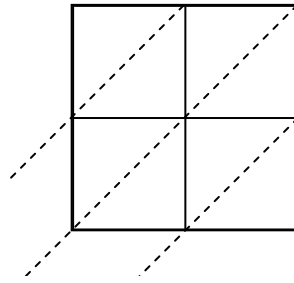
6) $87 \times 83 =$



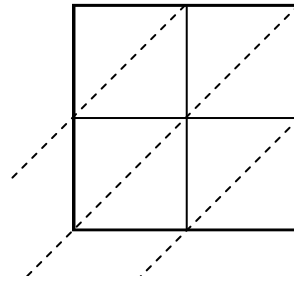
7) $17 \times 69 =$



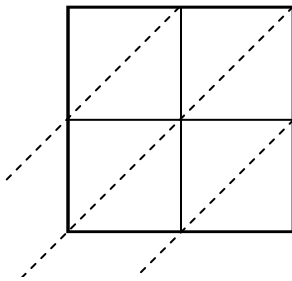
8) $42 \times 64 =$



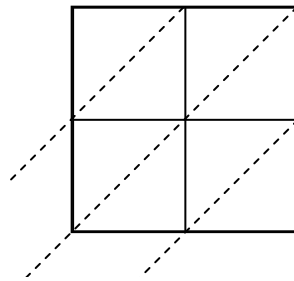
9) $13 \times 17 =$



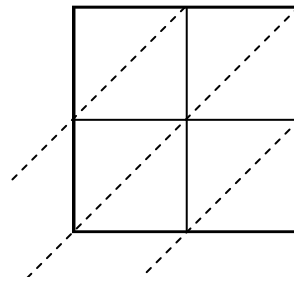
10) $19 \times 35 =$



11) $86 \times 83 =$



12) $72 \times 60 =$



Risposte

1. _____

2. _____

3. _____

4. _____

5. _____

6. _____

7. _____

8. _____

9. _____

10. _____

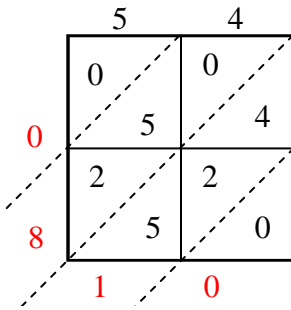
11. _____

12. _____

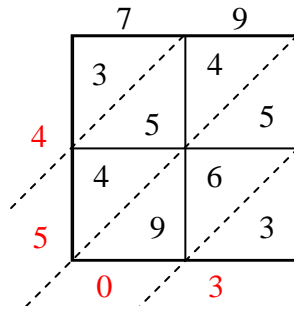


Usa la moltiplicazione del reticolo per risolvere ogni problema.

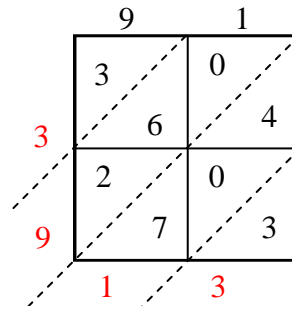
1) $54 \times 15 =$



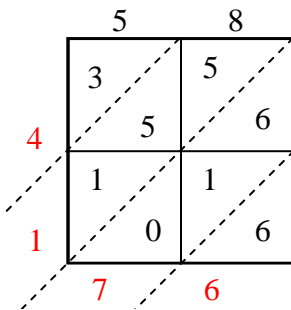
2) $79 \times 57 =$



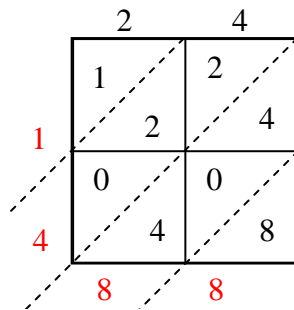
3) $91 \times 43 =$



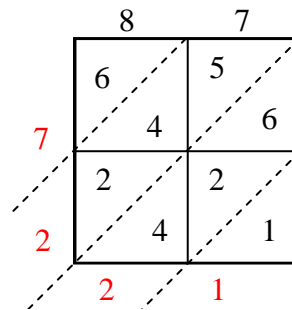
4) $58 \times 72 =$



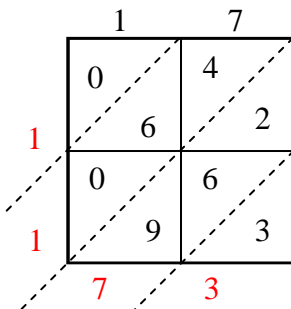
5) $24 \times 62 =$



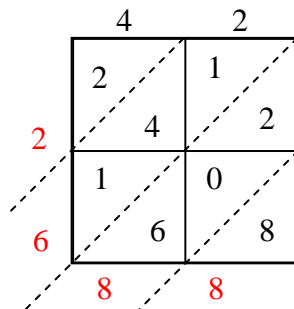
6) $87 \times 83 =$



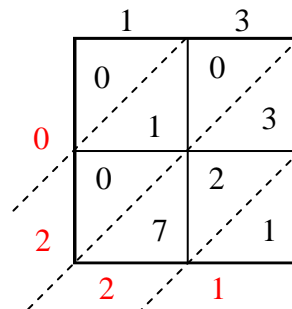
7) $17 \times 69 =$



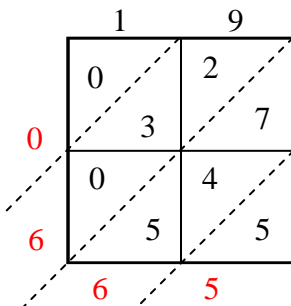
8) $42 \times 64 =$



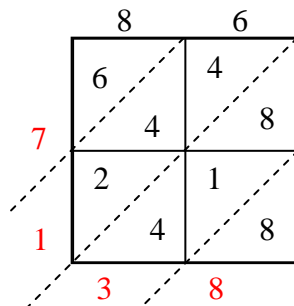
9) $13 \times 17 =$



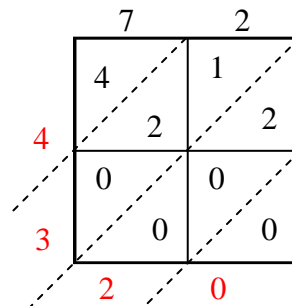
10) $19 \times 35 =$



11) $86 \times 83 =$



12) $72 \times 60 =$

Risposte1. 8102. 4.5033. 3.9134. 4.1765. 1.4886. 7.2217. 1.1738. 2.6889. 22110. 66511. 7.13812. 4.320