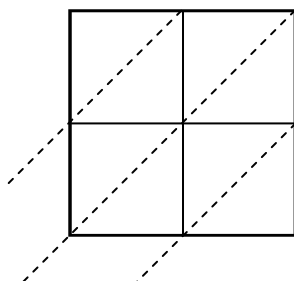


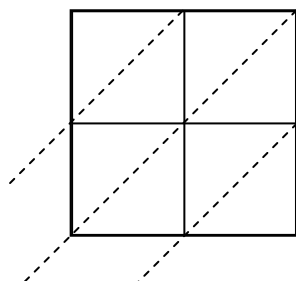


Usa la moltiplicazione del reticolo per risolvere ogni problema.

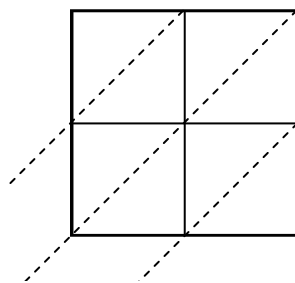
1) $80 \times 46 =$



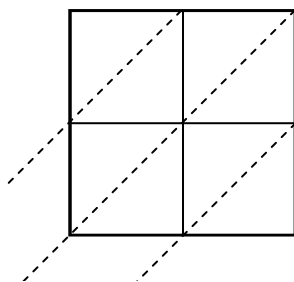
2) $22 \times 97 =$



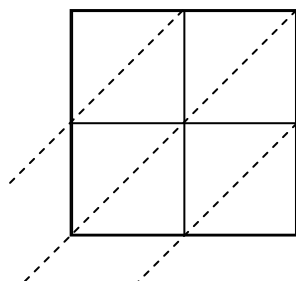
3) $61 \times 27 =$



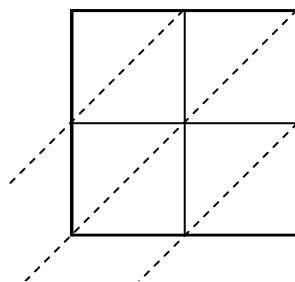
4) $89 \times 27 =$



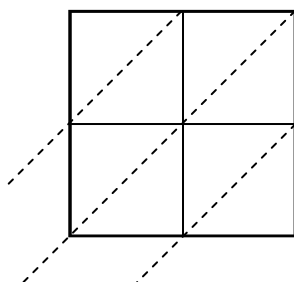
5) $97 \times 40 =$



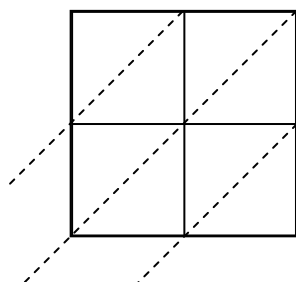
6) $62 \times 94 =$



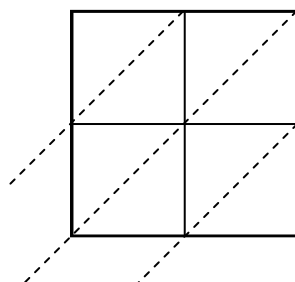
7) $14 \times 14 =$



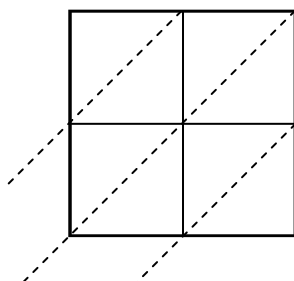
8) $16 \times 26 =$



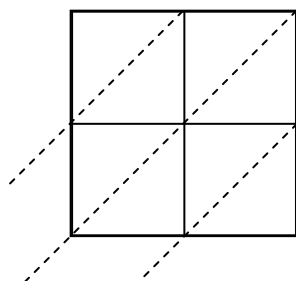
9) $48 \times 16 =$



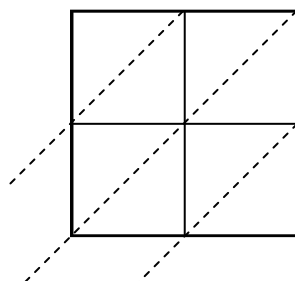
10) $75 \times 46 =$



11) $26 \times 63 =$



12) $42 \times 59 =$



Risposte

1. _____

2. _____

3. _____

4. _____

5. _____

6. _____

7. _____

8. _____

9. _____

10. _____

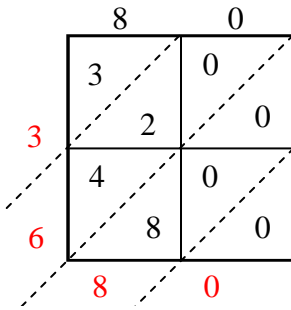
11. _____

12. _____

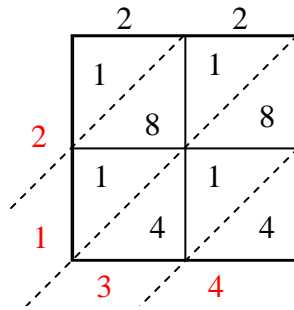


Usa la moltiplicazione del reticolo per risolvere ogni problema.

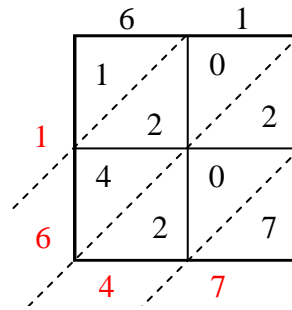
1) $80 \times 46 =$



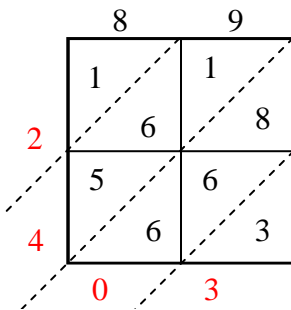
2) $22 \times 97 =$



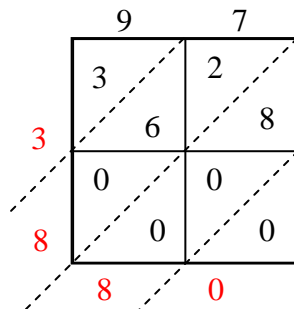
3) $61 \times 27 =$



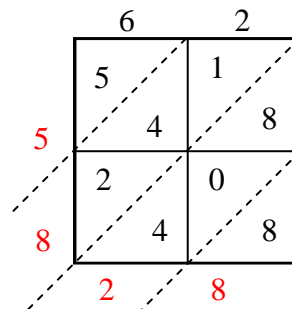
4) $89 \times 27 =$



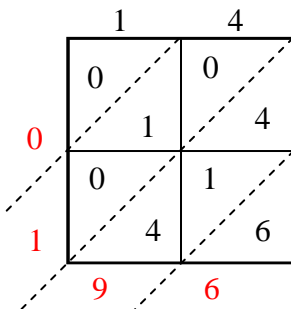
5) $97 \times 40 =$



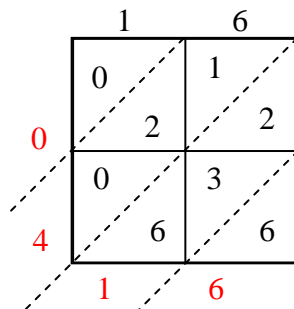
6) $62 \times 94 =$



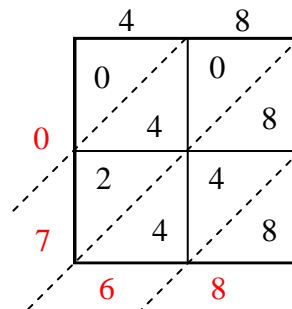
7) $14 \times 14 =$



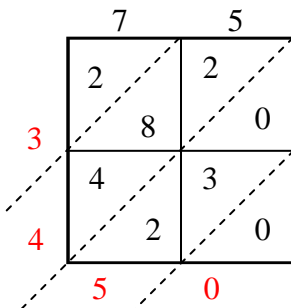
8) $16 \times 26 =$



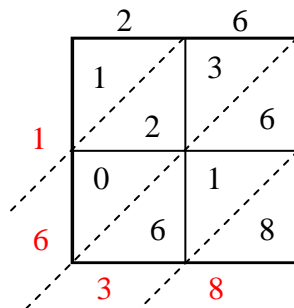
9) $48 \times 16 =$



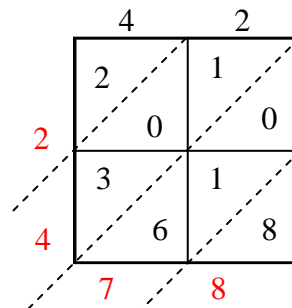
10) $75 \times 46 =$



11) $26 \times 63 =$



12) $42 \times 59 =$

Risposte1. 3.6802. 2.1343. 1.6474. 2.4035. 3.8806. 5.8287. 1968. 4169. 76810. 3.45011. 1.63812. 2.478