










Usa le unità fornite per misurare la lunghezza delle barre.



Risposte

1. _____

2. _____

3. _____

4. _____

5. _____

6. _____

7. _____

8. _____

9. _____







10. _____

Cut out and use the units shown to measure the bars on the previous page.





Usa le unità fornite per misurare la lunghezza delle barre.



Risposte

1. 13

2. 9

3. 3

4. 5

5. 4

6. 7

7. 8

8. 2

9. 6

10. 1