





Usa le unità fornite per misurare la lunghezza delle barre.



**Risposte**

1. \_\_\_\_\_

2. \_\_\_\_\_

3. \_\_\_\_\_

4. \_\_\_\_\_

5. \_\_\_\_\_

6. \_\_\_\_\_

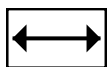
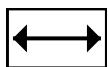
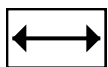
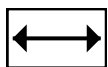
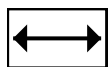
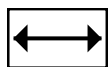
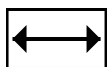
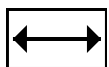
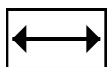
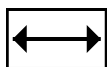
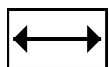
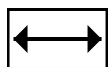
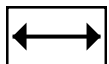
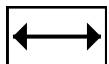
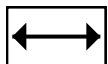
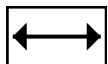
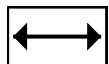
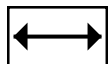
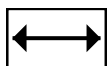
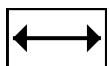
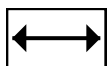
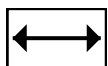
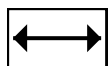
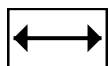
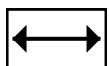
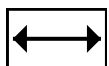
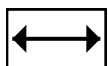
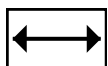
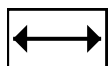
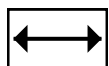
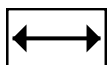
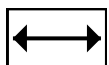
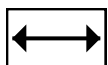
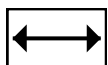
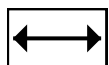
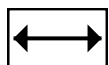
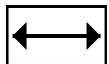
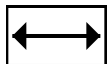
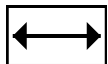
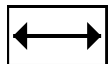
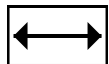
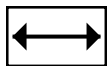
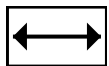
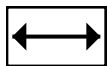
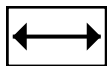
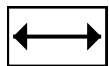
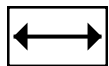
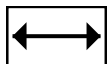
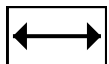
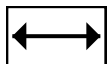
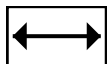
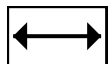
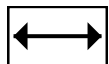
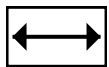
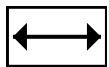
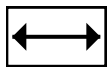
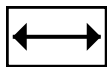
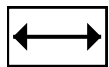
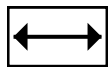
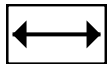
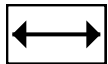
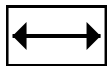
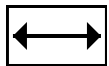
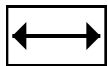
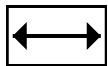
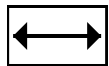
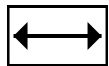
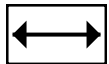
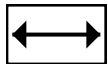
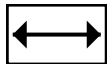
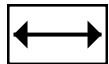
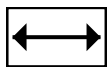
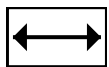
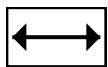
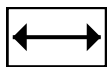
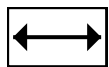
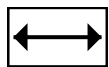
7. \_\_\_\_\_

8. \_\_\_\_\_

9. \_\_\_\_\_


10. \_\_\_\_\_

Cut out and use the units shown to measure the bars on the previous page.





Usa le unità fornite per misurare la lunghezza delle barre.



Risposte

1. 10

2. 4

3. 3

4. 11

5. 8

6. 9

7. 2

8. 7

9. 1

10. 6