






Usa le unità fornite per misurare la lunghezza delle barre.



Risposte

1. _____

2. _____

3. _____

4. _____

5. _____

6. _____

7. _____

8. _____

9. _____




10. _____

Cut out and use the units shown to measure the bars on the previous page.





Usa le unità fornite per misurare la lunghezza delle barre.



Risposte

1. 6

2. 10

3. 5

4. 4

5. 9

6. 11

7. 3

8. 12

9. 13

10. 1