




Misura la lunghezza e l'altezza di ogni rettangolo in pollici e in centimetri

Es)



Risposte


Es.(in-w) 5

Es.(in-h) 1 1/2

Es.(cm-w) 12

Es.(cm-h) 4

1)




1.(in-w) _____

1.(in-h) _____

1.(cm-w) _____

2)




1.(cm-h) _____

2.(in-w) _____

2.(in-h) _____

2.(cm-w) _____

3)



2.(cm-h) _____

3.(in-w) _____

3.(in-h) _____

3.(cm-w) _____

4)



3.(cm-h) _____

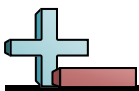
4.(in-w) _____

4.(in-h) _____

4.(cm-w) _____


4.(cm-h) _____

In		1		2		3		4		5		6		7				
Cm	1	2	3	4	5	6	7	8	9	10	11	12	13	14	15	16	17	18
In		1		2		3		4		5		6		7				
Cm	1	2	3	4	5	6	7	8	9	10	11	12	13	14	15	16	17	18
In		1		2		3		4		5		6		7				
Cm	1	2	3	4	5	6	7	8	9	10	11	12	13	14	15	16	17	18
In		1		2		3		4		5		6		7				
Cm	1	2	3	4	5	6	7	8	9	10	11	12	13	14	15	16	17	18
In		1		2		3		4		5		6		7				
Cm	1	2	3	4	5	6	7	8	9	10	11	12	13	14	15	16	17	18
In		1		2		3		4		5		6		7				
Cm	1	2	3	4	5	6	7	8	9	10	11	12	13	14	15	16	17	18
In		1		2		3		4		5		6		7				
Cm	1	2	3	4	5	6	7	8	9	10	11	12	13	14	15	16	17	18
In		1		2		3		4		5		6		7				
Cm	1	2	3	4	5	6	7	8	9	10	11	12	13	14	15	16	17	18
In		1		2		3		4		5		6		7				
Cm	1	2	3	4	5	6	7	8	9	10	11	12	13	14	15	16	17	18




Misura la lunghezza e l'altezza di ogni rettangolo in pollici e in centimetri


Es)




1)



2)



3)



4)



Risposte

Es.(in-w) 5

Es.(in-h) 1 1/2

Es.(cm-w) 12

Es.(cm-h) 4

1.(in-w) 2

1.(in-h) 1 1/2

1.(cm-w) 5,1

1.(cm-h) 3,8

2.(in-w) 4

2.(in-h) 1 1/2

2.(cm-w) 10,2

2.(cm-h) 3,8

3.(in-w) 1 1/2

3.(in-h) 1

3.(cm-w) 3,8

3.(cm-h) 2,5

4.(in-w) 3 1/2

4.(in-h) 0 1/2

4.(cm-w) 8,9

4.(cm-h) 1,3