




Misura la lunghezza e l'altezza di ogni rettangolo in pollici e in centimetri


Es)



1)




2)



3)



4)



**Risposte**

Es.(in-w) 5

Es.(in-h) 1 1/2

Es.(cm-w) 12

Es.(cm-h) 4

1.(in-w) \_\_\_\_\_

1.(in-h) \_\_\_\_\_

1.(cm-w) \_\_\_\_\_

1.(cm-h) \_\_\_\_\_

2.(in-w) \_\_\_\_\_

2.(in-h) \_\_\_\_\_

2.(cm-w) \_\_\_\_\_

2.(cm-h) \_\_\_\_\_

3.(in-w) \_\_\_\_\_

3.(in-h) \_\_\_\_\_

3.(cm-w) \_\_\_\_\_

3.(cm-h) \_\_\_\_\_

4.(in-w) \_\_\_\_\_

4.(in-h) \_\_\_\_\_

4.(cm-w) \_\_\_\_\_


4.(cm-h) \_\_\_\_\_

In		1		2		3		4		5		6		7				
Cm	1	2	3	4	5	6	7	8	9	10	11	12	13	14	15	16	17	18
In		1		2		3		4		5		6		7				
Cm	1	2	3	4	5	6	7	8	9	10	11	12	13	14	15	16	17	18
In		1		2		3		4		5		6		7				
Cm	1	2	3	4	5	6	7	8	9	10	11	12	13	14	15	16	17	18
In		1		2		3		4		5		6		7				
Cm	1	2	3	4	5	6	7	8	9	10	11	12	13	14	15	16	17	18
In		1		2		3		4		5		6		7				
Cm	1	2	3	4	5	6	7	8	9	10	11	12	13	14	15	16	17	18
In		1		2		3		4		5		6		7				
Cm	1	2	3	4	5	6	7	8	9	10	11	12	13	14	15	16	17	18
In		1		2		3		4		5		6		7				
Cm	1	2	3	4	5	6	7	8	9	10	11	12	13	14	15	16	17	18
In		1		2		3		4		5		6		7				
Cm	1	2	3	4	5	6	7	8	9	10	11	12	13	14	15	16	17	18
In		1		2		3		4		5		6		7				
Cm	1	2	3	4	5	6	7	8	9	10	11	12	13	14	15	16	17	18



Misura la lunghezza e l'altezza di ogni rettangolo in pollici e in centimetri


Es)



1)




2)



3)



4)



**Risposte**

Es.(in-w) 5

Es.(in-h) 1 1/2

Es.(cm-w) 12

Es.(cm-h) 4

1.(in-w) 3

1.(in-h) 0 1/2

1.(cm-w) 7,6

1.(cm-h) 1,3

2.(in-w) 5 1/2

2.(in-h) 1

2.(cm-w) 14

2.(cm-h) 2,5

3.(in-w) 5

3.(in-h) 1 1/2

3.(cm-w) 12,7

3.(cm-h) 3,8

4.(in-w) 0 1/2

4.(in-h) 1

4.(cm-w) 1,3

4.(cm-h) 2,5