



Misura la lunghezza di ogni barra sia in centimetri che in pollici.

Es)



1)



2)



3)




4)




5)



6)



7)



8)



9)



10)



**Risposte**

Es(in). 5

Es(cm). 12

1(in). \_\_\_\_\_

1(cm). \_\_\_\_\_

2(in). \_\_\_\_\_

2(cm). \_\_\_\_\_

3(in). \_\_\_\_\_

3(cm). \_\_\_\_\_

4(in). \_\_\_\_\_

4(cm). \_\_\_\_\_

5(in). \_\_\_\_\_

5(cm). \_\_\_\_\_

6(in). \_\_\_\_\_

6(cm). \_\_\_\_\_

7(in). \_\_\_\_\_

7(cm). \_\_\_\_\_

8(in). \_\_\_\_\_

8(cm). \_\_\_\_\_

9(in). \_\_\_\_\_

9(cm). \_\_\_\_\_

10(in). \_\_\_\_\_

10(cm). \_\_\_\_\_

In		1		2		3		4		5		6		7				
Cm	1	2	3	4	5	6	7	8	9	10	11	12	13	14	15	16	17	18
In		1		2		3		4		5		6		7				
Cm	1	2	3	4	5	6	7	8	9	10	11	12	13	14	15	16	17	18
In		1		2		3		4		5		6		7				
Cm	1	2	3	4	5	6	7	8	9	10	11	12	13	14	15	16	17	18
In		1		2		3		4		5		6		7				
Cm	1	2	3	4	5	6	7	8	9	10	11	12	13	14	15	16	17	18
In		1		2		3		4		5		6		7				
Cm	1	2	3	4	5	6	7	8	9	10	11	12	13	14	15	16	17	18
In		1		2		3		4		5		6		7				
Cm	1	2	3	4	5	6	7	8	9	10	11	12	13	14	15	16	17	18
In		1		2		3		4		5		6		7				
Cm	1	2	3	4	5	6	7	8	9	10	11	12	13	14	15	16	17	18
In		1		2		3		4		5		6		7				
Cm	1	2	3	4	5	6	7	8	9	10	11	12	13	14	15	16	17	18
In		1		2		3		4		5		6		7				
Cm	1	2	3	4	5	6	7	8	9	10	11	12	13	14	15	16	17	18



Misura la lunghezza di ogni barra sia in centimetri che in pollici.

Es)



1)



2)



3)




4)



5)



6)



7)



8)



9)



10)



**Risposte**

Es(in). 5

Es(cm). 12

1(in). 1

1(cm). 2 - 3

2(in). 1 1/2

2(cm). 3 - 4

3(in). 4 1/2

3(cm). 11 - 12

4(in). 2 1/2

4(cm). 6 - 7

5(in). 5 1/2

5(cm). 13 - 14

6(in). 4

6(cm). 10 - 11

7(in). 0 1/2

7(cm). 1 - 2

8(in). 3

8(cm). 7 - 8

9(in). 3 1/2

9(cm). 8 - 9

10(in). 5

10(cm). 12 - 13