




Misura la lunghezza di ogni barra sia in centimetri che in pollici.

Es)



**Risposte**

Es(in). 5

Es(cm). 12

1)



1(in). \_\_\_\_\_


2)



1(cm). \_\_\_\_\_

2(in). \_\_\_\_\_


3)



2(cm). \_\_\_\_\_

3(in). \_\_\_\_\_

4)



3(cm). \_\_\_\_\_

4(in). \_\_\_\_\_

5)



4(cm). \_\_\_\_\_

5(in). \_\_\_\_\_

6)



5(cm). \_\_\_\_\_

6(in). \_\_\_\_\_

7)



6(cm). \_\_\_\_\_

7(in). \_\_\_\_\_


8)



7(cm). \_\_\_\_\_

8(in). \_\_\_\_\_

9)



8(cm). \_\_\_\_\_

9(in). \_\_\_\_\_

10)



9(cm). \_\_\_\_\_

10(in). \_\_\_\_\_

10(cm). \_\_\_\_\_

In		1		2		3		4		5		6		7				
Cm	1	2	3	4	5	6	7	8	9	10	11	12	13	14	15	16	17	18
In		1		2		3		4		5		6		7				
Cm	1	2	3	4	5	6	7	8	9	10	11	12	13	14	15	16	17	18
In		1		2		3		4		5		6		7				
Cm	1	2	3	4	5	6	7	8	9	10	11	12	13	14	15	16	17	18
In		1		2		3		4		5		6		7				
Cm	1	2	3	4	5	6	7	8	9	10	11	12	13	14	15	16	17	18
In		1		2		3		4		5		6		7				
Cm	1	2	3	4	5	6	7	8	9	10	11	12	13	14	15	16	17	18
In		1		2		3		4		5		6		7				
Cm	1	2	3	4	5	6	7	8	9	10	11	12	13	14	15	16	17	18
In		1		2		3		4		5		6		7				
Cm	1	2	3	4	5	6	7	8	9	10	11	12	13	14	15	16	17	18
In		1		2		3		4		5		6		7				
Cm	1	2	3	4	5	6	7	8	9	10	11	12	13	14	15	16	17	18
In		1		2		3		4		5		6		7				
Cm	1	2	3	4	5	6	7	8	9	10	11	12	13	14	15	16	17	18



Misura la lunghezza di ogni barra sia in centimetri che in pollici.

Es)




1)




2)



3)



4)



5)



6)




7)



8)



9)



10)



**Risposte**

Es(in). 5

Es(cm). 12

1(in). 5 1/2

1(cm). 13 - 14

2(in). 3

2(cm). 7 - 8

3(in). 0 1/2

3(cm). 1 - 2

4(in). 3 1/2

4(cm). 8 - 9

5(in). 1

5(cm). 2 - 3

6(in). 2 1/2

6(cm). 6 - 7

7(in). 4 1/2

7(cm). 11 - 12

8(in). 1 1/2

8(cm). 3 - 4

9(in). 5

9(cm). 12 - 13

10(in). 4

10(cm). 10 - 11