




Misura la lunghezza di ogni barra sia in centimetri che in pollici.

Es)



1)



2)




3)



4)



5)



6)



7)



8)



9)



10)



Risposte

Es(in). 5

Es(cm). 12

1(in). _____

1(cm). _____

2(in). _____

2(cm). _____

3(in). _____

3(cm). _____

4(in). _____

4(cm). _____

5(in). _____

5(cm). _____

6(in). _____

6(cm). _____

7(in). _____

7(cm). _____

8(in). _____

8(cm). _____

9(in). _____

9(cm). _____


10(in). _____

10(cm). _____

In		1		2		3		4		5		6		7				
Cm	1	2	3	4	5	6	7	8	9	10	11	12	13	14	15	16	17	18
In		1		2		3		4		5		6		7				
Cm	1	2	3	4	5	6	7	8	9	10	11	12	13	14	15	16	17	18
In		1		2		3		4		5		6		7				
Cm	1	2	3	4	5	6	7	8	9	10	11	12	13	14	15	16	17	18
In		1		2		3		4		5		6		7				
Cm	1	2	3	4	5	6	7	8	9	10	11	12	13	14	15	16	17	18
In		1		2		3		4		5		6		7				
Cm	1	2	3	4	5	6	7	8	9	10	11	12	13	14	15	16	17	18
In		1		2		3		4		5		6		7				
Cm	1	2	3	4	5	6	7	8	9	10	11	12	13	14	15	16	17	18
In		1		2		3		4		5		6		7				
Cm	1	2	3	4	5	6	7	8	9	10	11	12	13	14	15	16	17	18
In		1		2		3		4		5		6		7				
Cm	1	2	3	4	5	6	7	8	9	10	11	12	13	14	15	16	17	18
In		1		2		3		4		5		6		7				
Cm	1	2	3	4	5	6	7	8	9	10	11	12	13	14	15	16	17	18



Misura la lunghezza di ogni barra sia in centimetri che in pollici.



Risposte

Es(in). 5

Es(cm). 12

1(in). 2

1(cm). 5 - 6

2(in). 5 1/2

2(cm). 13 - 14

3(in). 3 1/2

3(cm). 8 - 9

4(in). 3

4(cm). 7 - 8

5(in). 0 1/2

5(cm). 1 - 2

6(in). 5

6(cm). 12 - 13

7(in). 4

7(cm). 10 - 11

8(in). 4 1/2

8(cm). 11 - 12

9(in). 2 1/2

9(cm). 6 - 7

10(in). 1

10(cm). 2 - 3