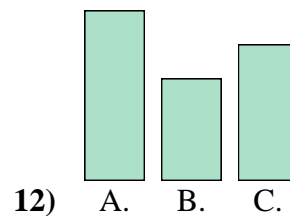
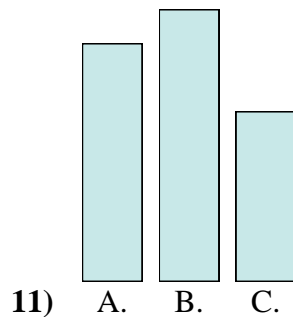
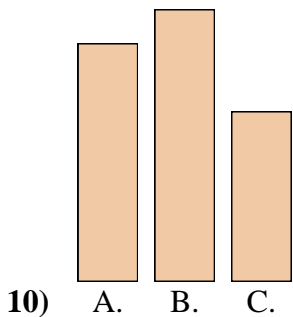
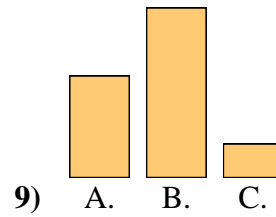
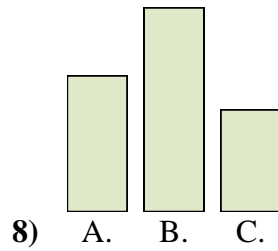
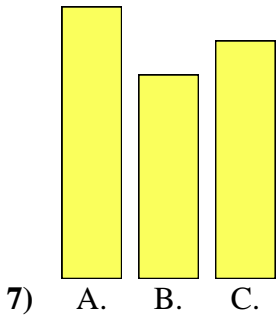
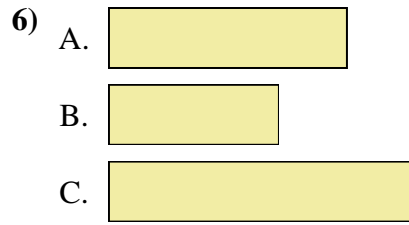
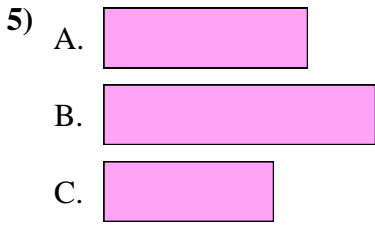
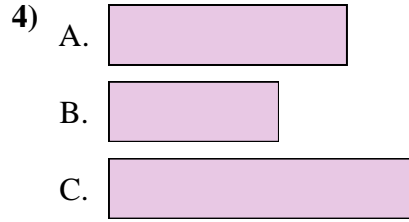
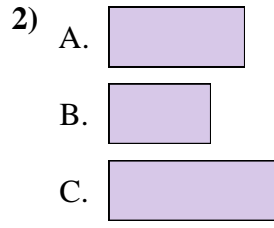
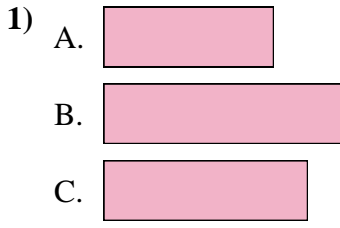




Metti in ordine gli oggetti dal più piccolo al più grande.

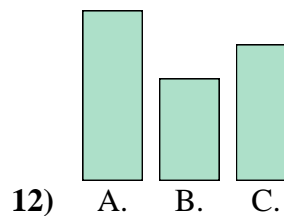
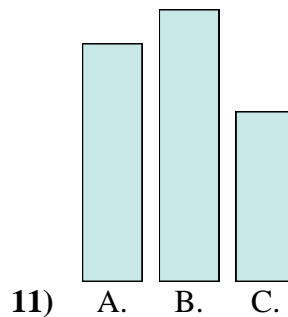
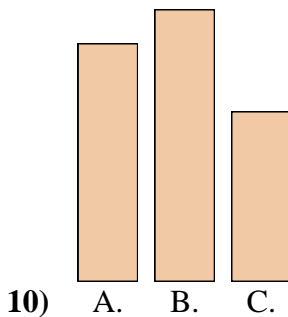
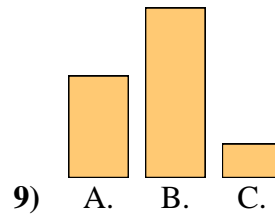
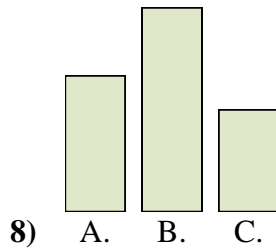
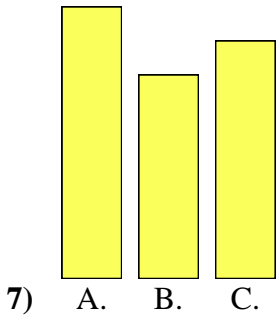
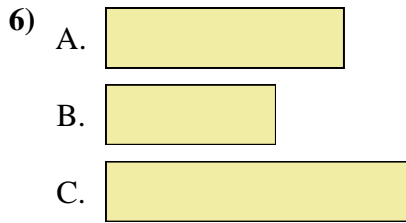
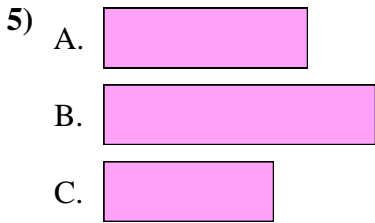
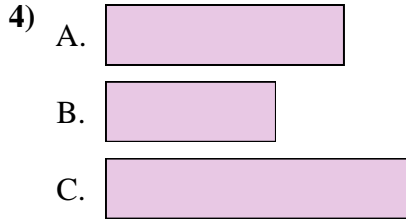
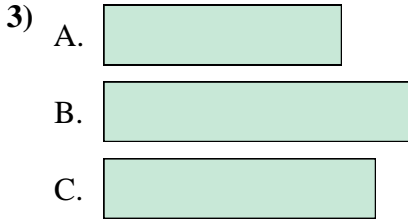
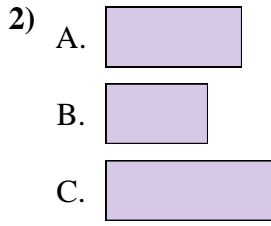
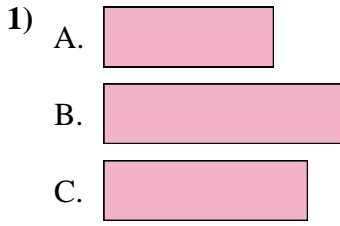


Risposte

1. \_\_\_\_\_
2. \_\_\_\_\_
3. \_\_\_\_\_
4. \_\_\_\_\_
5. \_\_\_\_\_
6. \_\_\_\_\_
7. \_\_\_\_\_
8. \_\_\_\_\_
9. \_\_\_\_\_
10. \_\_\_\_\_
11. \_\_\_\_\_
12. \_\_\_\_\_



Metti in ordine gli oggetti dal più piccolo al più grande.



**Risposte**

1. A, C, B

2. B, A, C

3. A, C, B

4. B, A, C

5. C, A, B

6. B, A, C

7. B, C, A

8. C, A, B

9. C, A, B

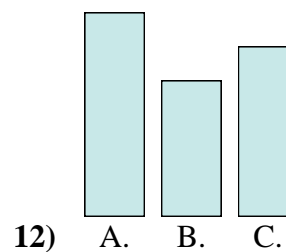
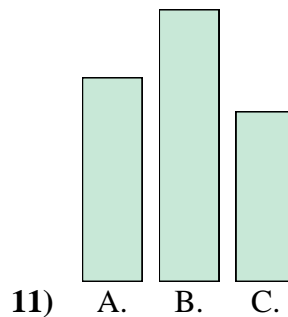
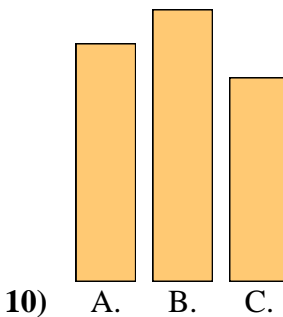
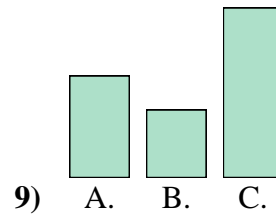
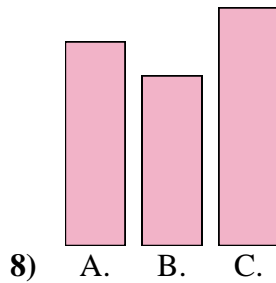
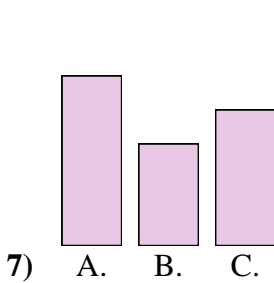
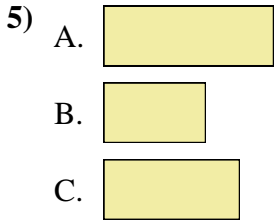
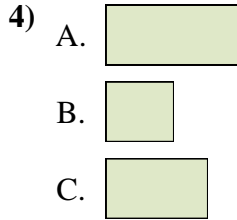
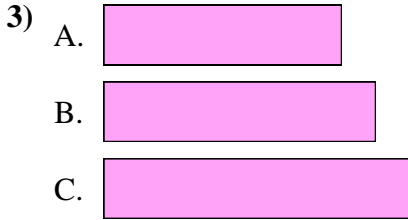
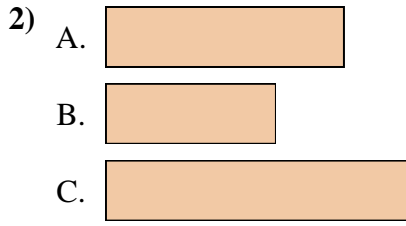
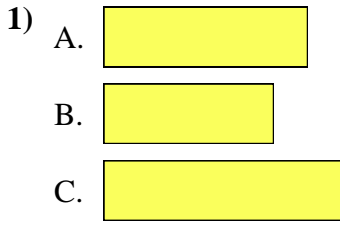
10. C, A, B

11. C, A, B

12. B, C, A



Metti in ordine gli oggetti dal più piccolo al più grande.

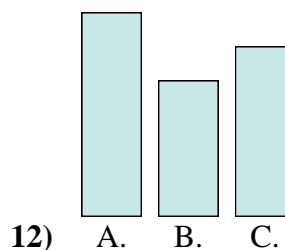
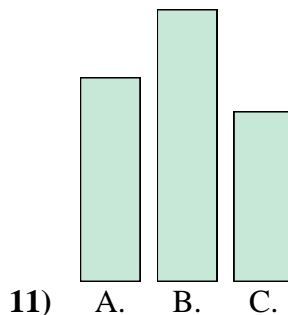
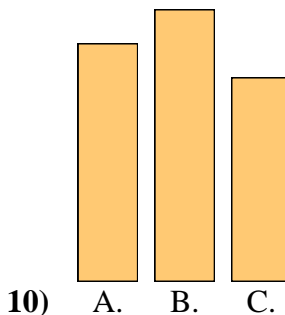
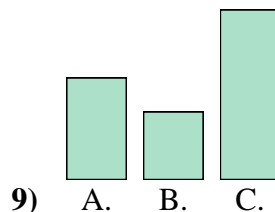
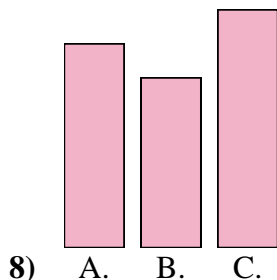
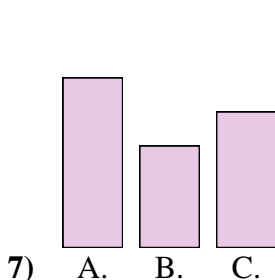
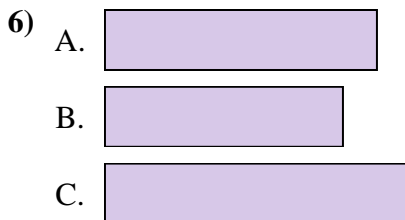
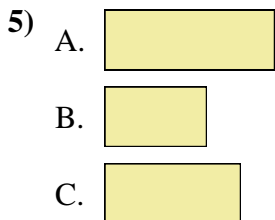
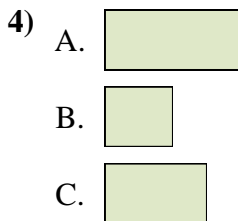

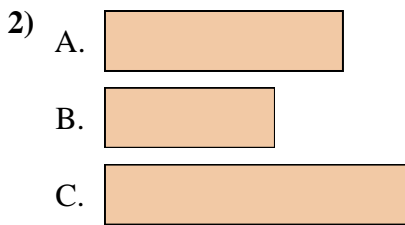
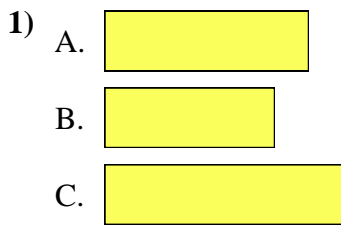


Risposte

1. \_\_\_\_\_
2. \_\_\_\_\_
3. \_\_\_\_\_
4. \_\_\_\_\_
5. \_\_\_\_\_
6. \_\_\_\_\_
7. \_\_\_\_\_
8. \_\_\_\_\_
9. \_\_\_\_\_
10. \_\_\_\_\_
11. \_\_\_\_\_
12. \_\_\_\_\_



Metti in ordine gli oggetti dal più piccolo al più grande.



**Risposte**

1. **B, A, C**

2. **B, A, C**

3. **A, B, C**

4. **B, C, A**

5. **B, C, A**

6. **B, A, C**

7. **B, C, A**

8. **B, A, C**

9. **B, A, C**

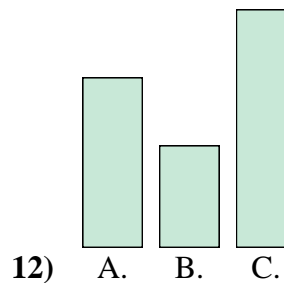
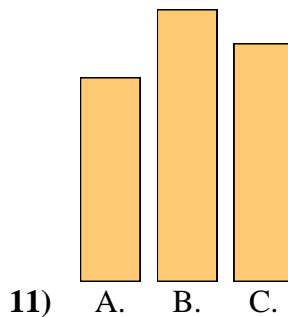
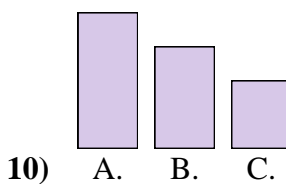
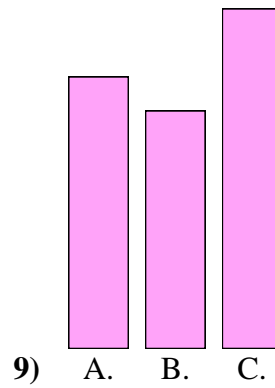
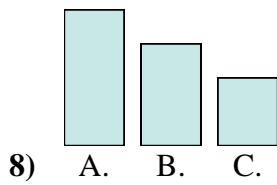
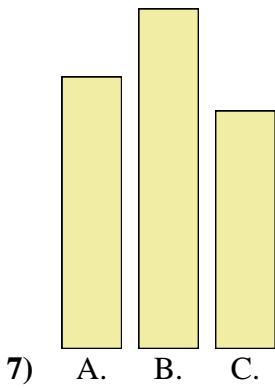
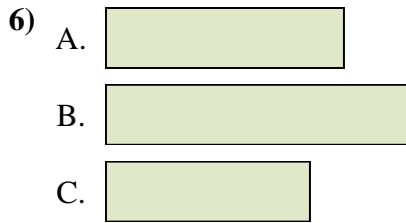
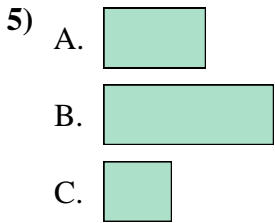
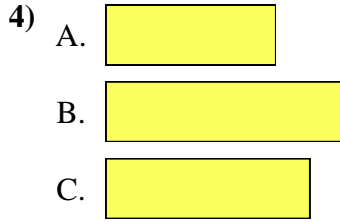
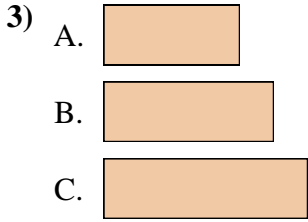
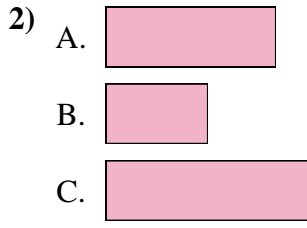
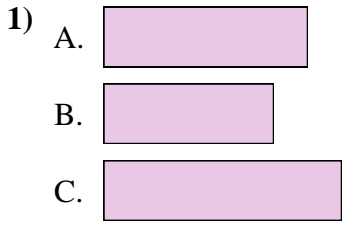
10. **C, A, B**

11. **C, A, B**

12. **B, C, A**



Metti in ordine gli oggetti dal più piccolo al più grande.

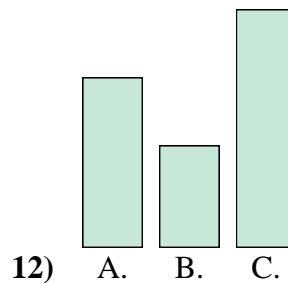
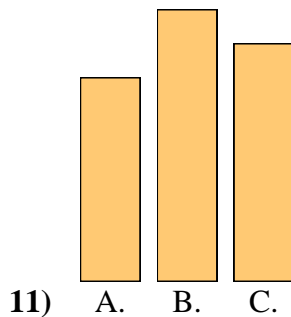
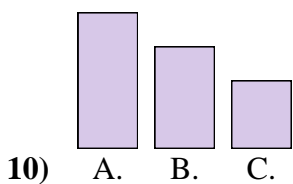
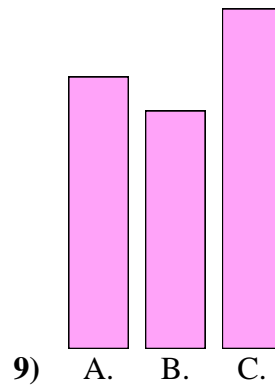
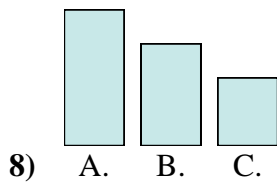
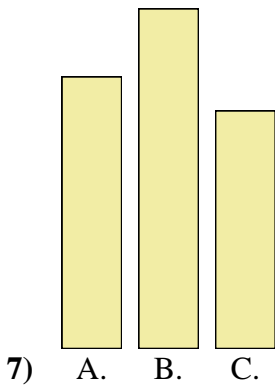
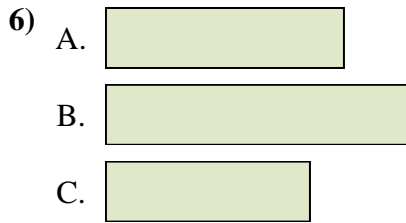
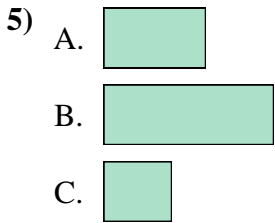
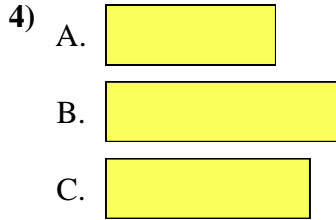
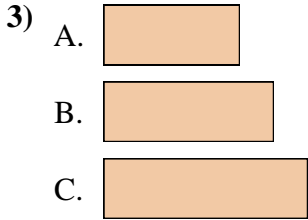
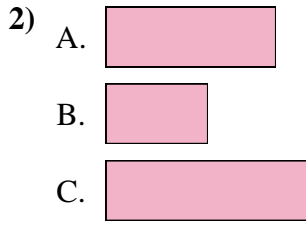
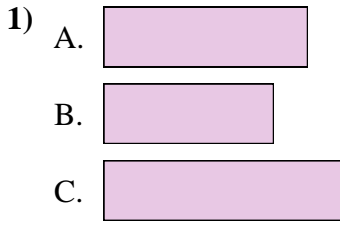


Risposte

1. \_\_\_\_\_
2. \_\_\_\_\_
3. \_\_\_\_\_
4. \_\_\_\_\_
5. \_\_\_\_\_
6. \_\_\_\_\_
7. \_\_\_\_\_
8. \_\_\_\_\_
9. \_\_\_\_\_
10. \_\_\_\_\_
11. \_\_\_\_\_
12. \_\_\_\_\_



Metti in ordine gli oggetti dal più piccolo al più grande.



Risposte

1. B, A, C

2. B, A, C

3. A, B, C

4. A, C, B

5. C, A, B

6. C, A, B

7. C, A, B

8. C, B, A

9. B, A, C

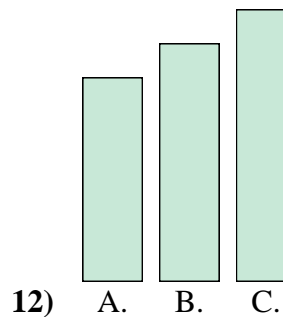
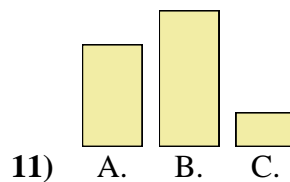
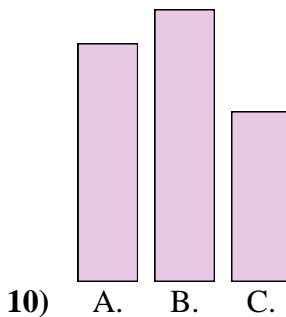
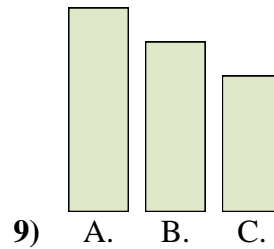
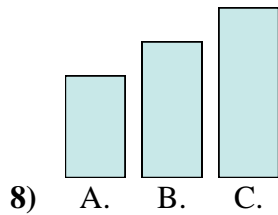

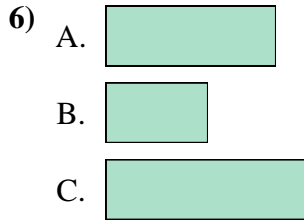
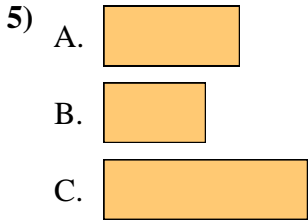
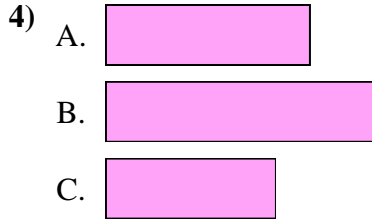
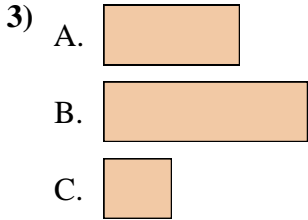
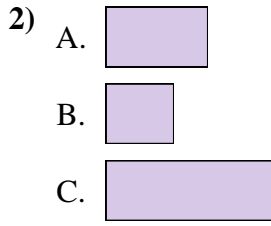
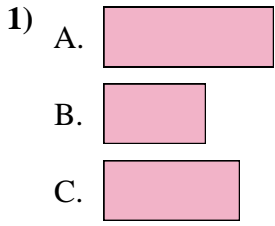
10. C, B, A

11. A, C, B

12. B, A, C



Metti in ordine gli oggetti dal più piccolo al più grande.

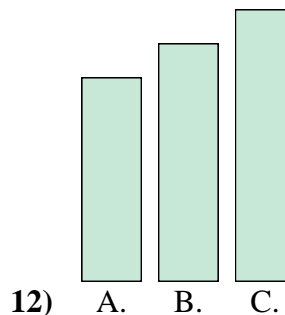
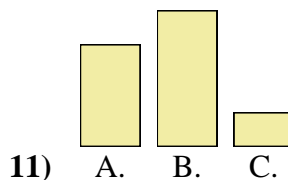
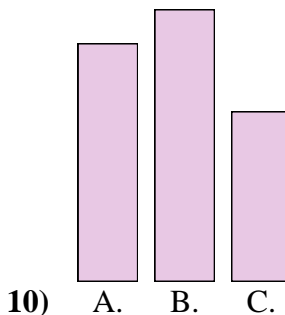
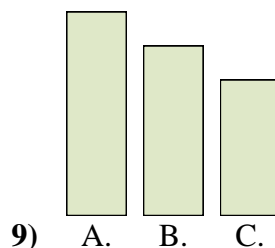
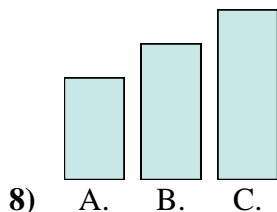

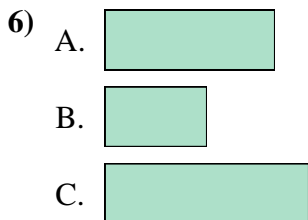
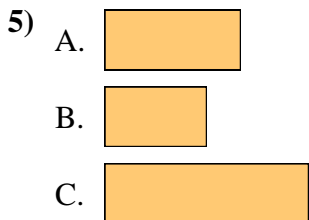
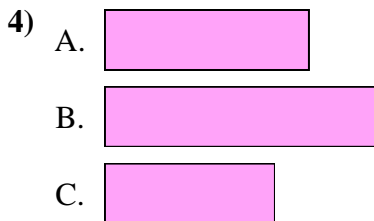
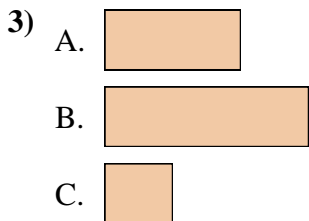
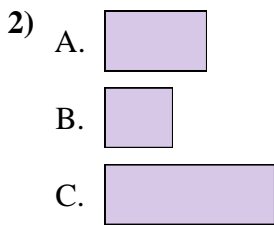
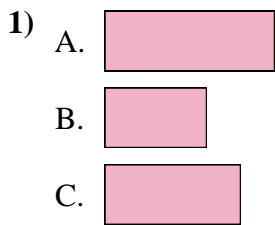


Risposte

1. \_\_\_\_\_
2. \_\_\_\_\_
3. \_\_\_\_\_
4. \_\_\_\_\_
5. \_\_\_\_\_
6. \_\_\_\_\_
7. \_\_\_\_\_
8. \_\_\_\_\_
9. \_\_\_\_\_
10. \_\_\_\_\_
11. \_\_\_\_\_
12. \_\_\_\_\_



Metti in ordine gli oggetti dal più piccolo al più grande.



**Risposte**

1. **B, C, A**

2. **B, A, C**

3. **C, A, B**

4. **C, A, B**

5. **B, A, C**

6. **B, A, C**

7. **B, A, C**

8. **A, B, C**

9. **C, B, A**

10. **C, A, B**

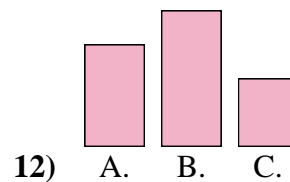
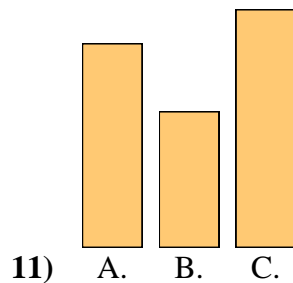
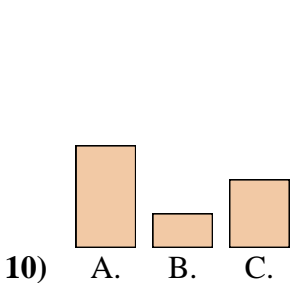
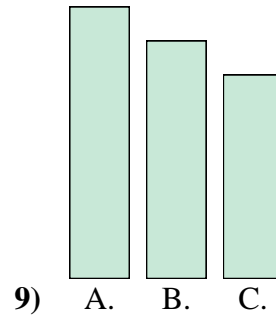
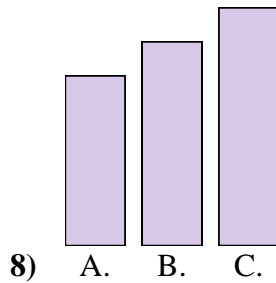
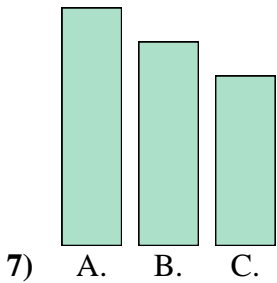
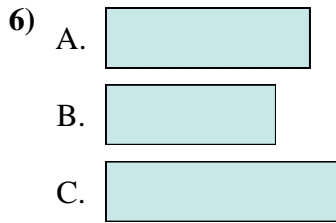

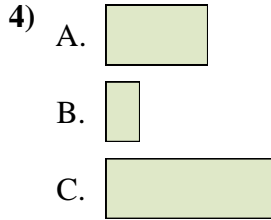
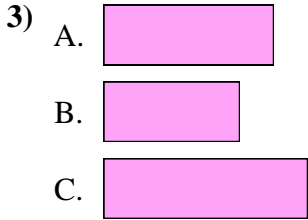
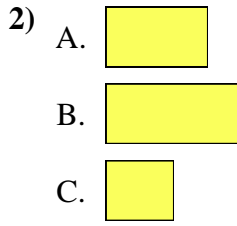
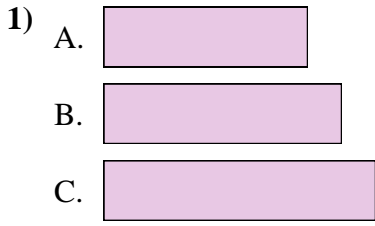
11. **C, A, B**

12. **A, B, C**





Metti in ordine gli oggetti dal più piccolo al più grande.

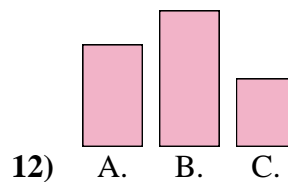
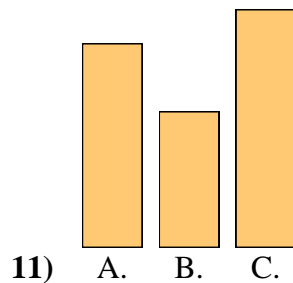
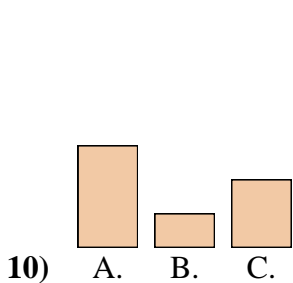
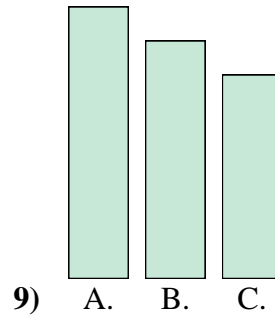
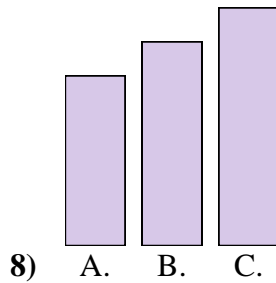
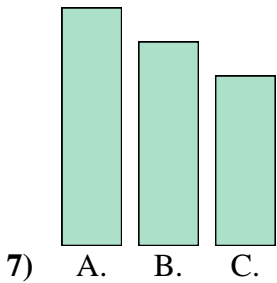
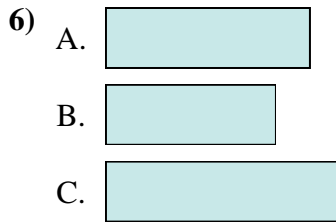

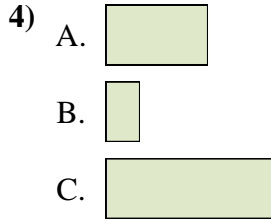
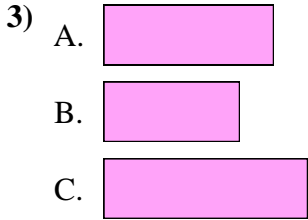
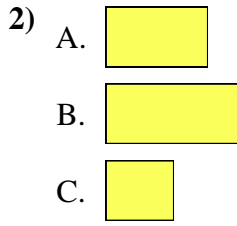
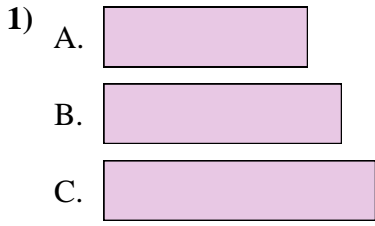


Risposte

1. \_\_\_\_\_
2. \_\_\_\_\_
3. \_\_\_\_\_
4. \_\_\_\_\_
5. \_\_\_\_\_
6. \_\_\_\_\_
7. \_\_\_\_\_
8. \_\_\_\_\_
9. \_\_\_\_\_
10. \_\_\_\_\_
11. \_\_\_\_\_
12. \_\_\_\_\_



Metti in ordine gli oggetti dal più piccolo al più grande.



**Risposte**

1. A, B, C

2. C, A, B

3. B, A, C

4. B, A, C

5. C, A, B

6. B, A, C

7. C, B, A

8. A, B, C

9. C, B, A

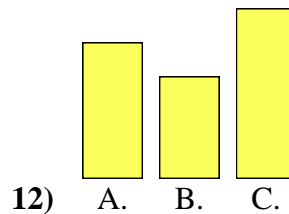
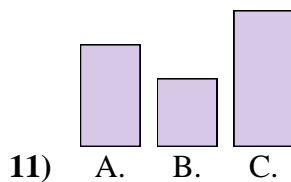
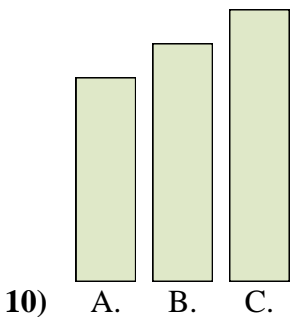
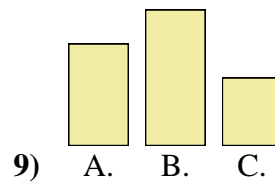
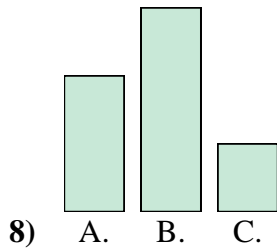
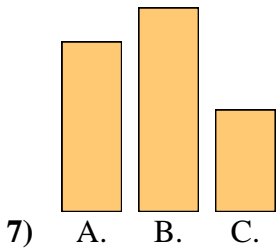
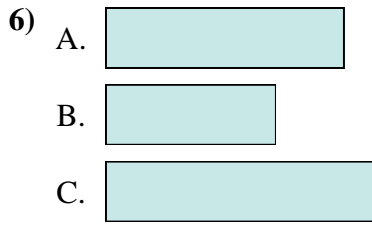
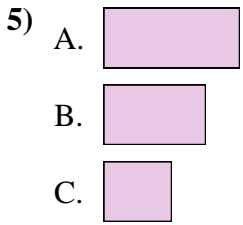
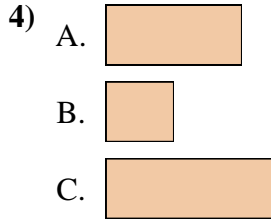
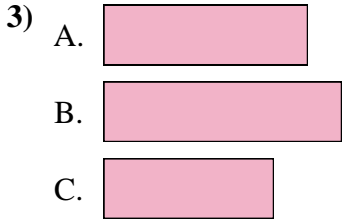
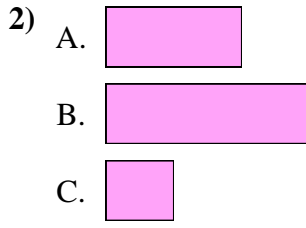
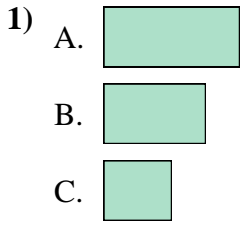
10. B, C, A

11. B, A, C

12. C, A, B



Metti in ordine gli oggetti dal più piccolo al più grande.

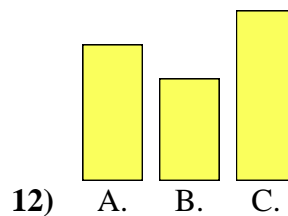
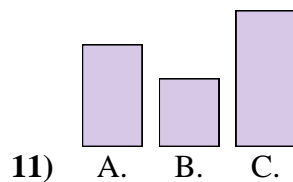
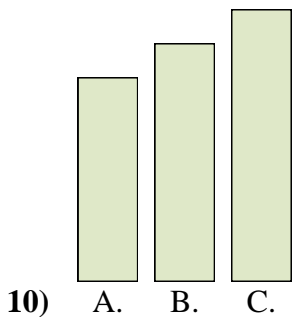
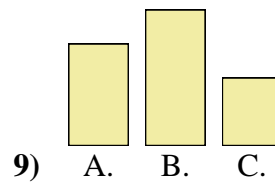
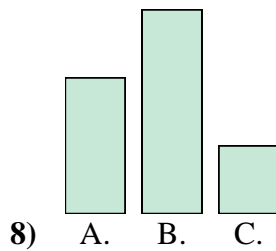
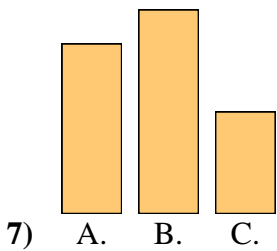
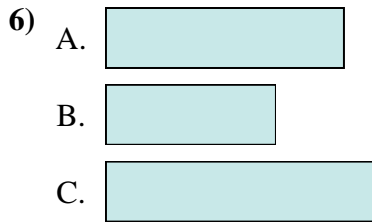
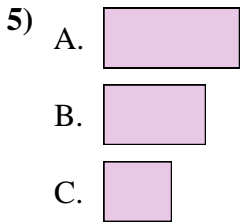
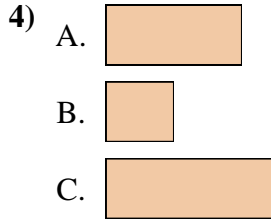
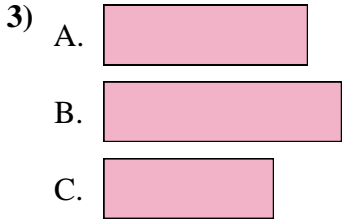
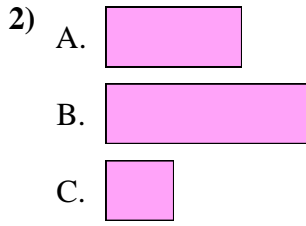
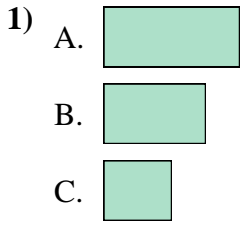


Risposte

1. \_\_\_\_\_
2. \_\_\_\_\_
3. \_\_\_\_\_
4. \_\_\_\_\_
5. \_\_\_\_\_
6. \_\_\_\_\_
7. \_\_\_\_\_
8. \_\_\_\_\_
9. \_\_\_\_\_
10. \_\_\_\_\_
11. \_\_\_\_\_
12. \_\_\_\_\_



Metti in ordine gli oggetti dal più piccolo al più grande.



**Risposte**

1. C, B, A

2. C, A, B

3. C, A, B

4. B, A, C

5. C, B, A

6. B, A, C

7. C, A, B

8. C, A, B

9. C, A, B


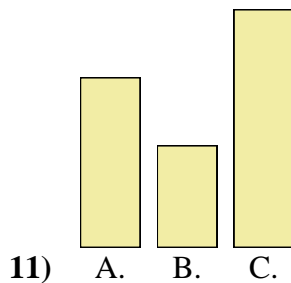
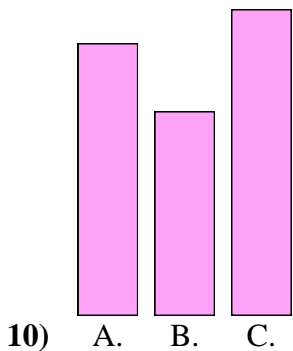
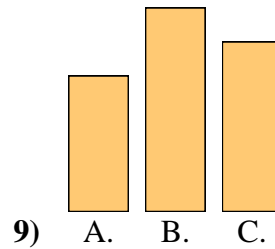
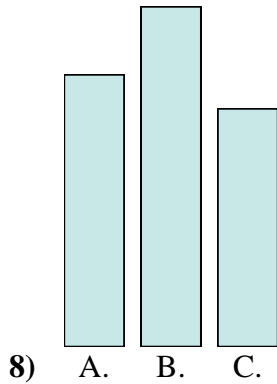
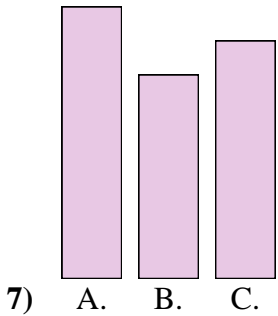
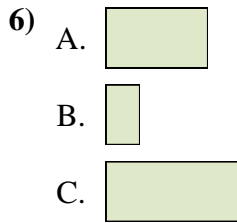
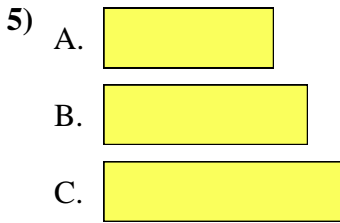
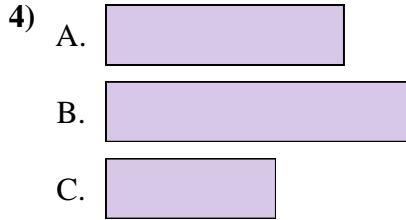
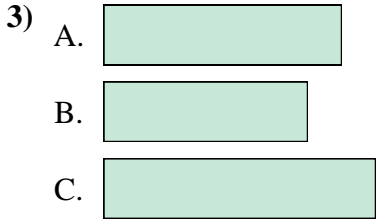
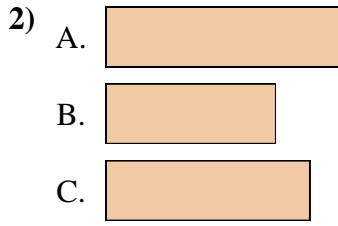
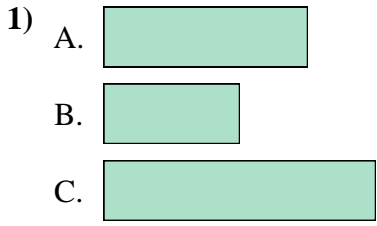
10. A, B, C

11. B, A, C

12. B, A, C



Metti in ordine gli oggetti dal più piccolo al più grande.

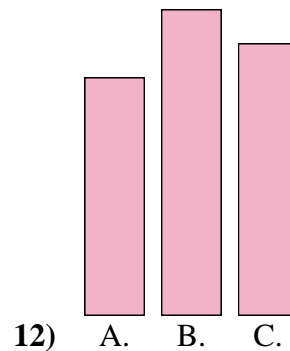
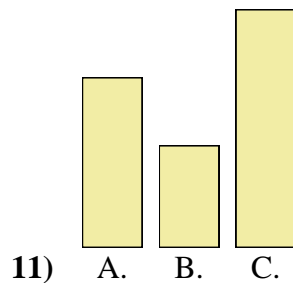
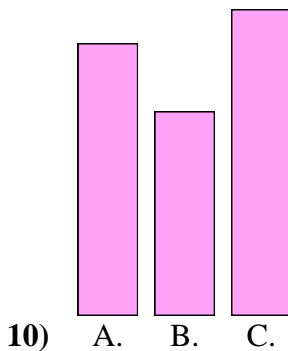
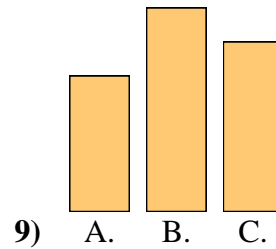
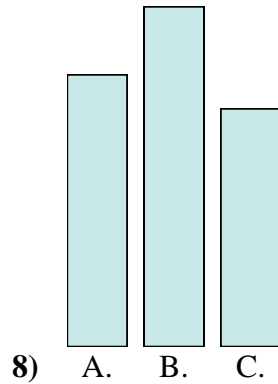
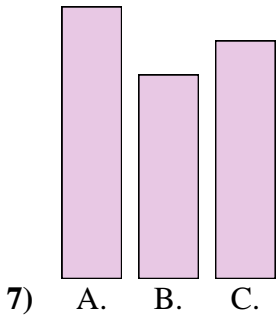
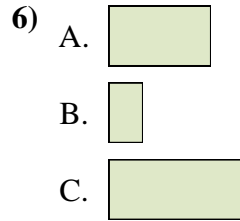
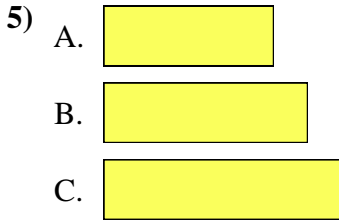
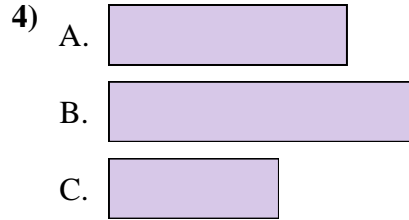
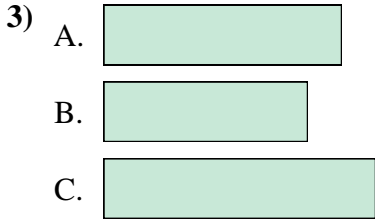
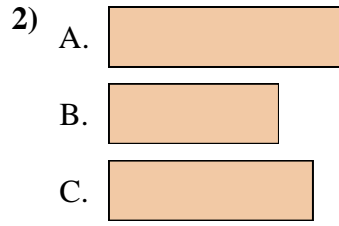
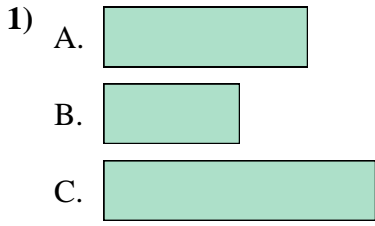


Risposte

1. \_\_\_\_\_
2. \_\_\_\_\_
3. \_\_\_\_\_
4. \_\_\_\_\_
5. \_\_\_\_\_
6. \_\_\_\_\_
7. \_\_\_\_\_
8. \_\_\_\_\_
9. \_\_\_\_\_
10. \_\_\_\_\_
11. \_\_\_\_\_
12. \_\_\_\_\_



Metti in ordine gli oggetti dal più piccolo al più grande.



**Risposte**

1. **B, A, C**

2. **B, C, A**

3. **B, A, C**

4. **C, A, B**

5. **A, B, C**

6. **B, A, C**

7. **B, C, A**

8. **C, A, B**

9. **A, C, B**

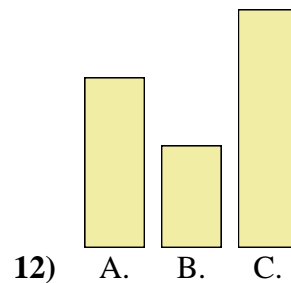
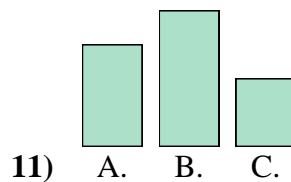
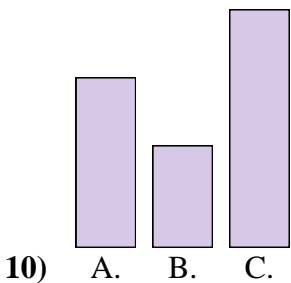
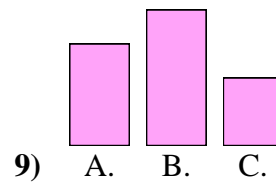
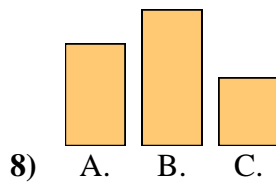
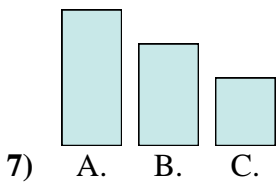
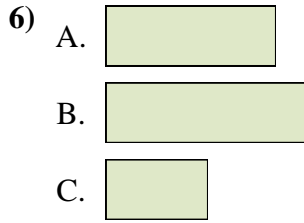
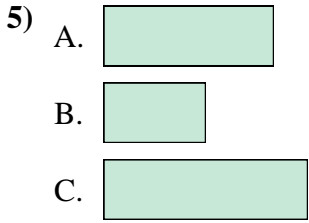
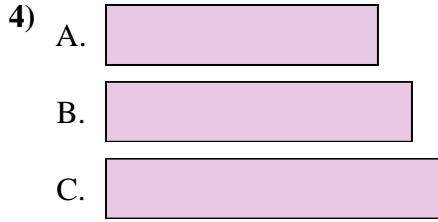
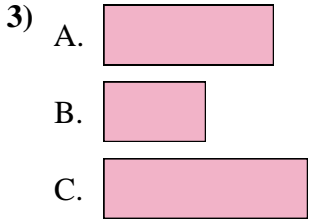

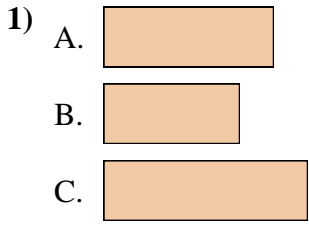
10. **B, A, C**

11. **B, A, C**

12. **A, C, B**



Metti in ordine gli oggetti dal più piccolo al più grande.

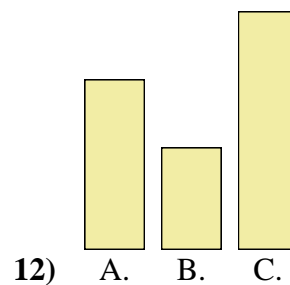
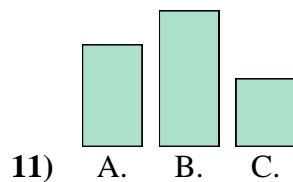
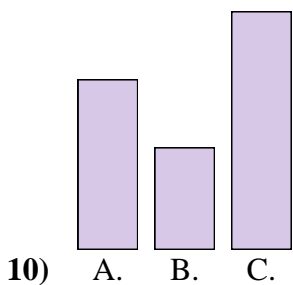
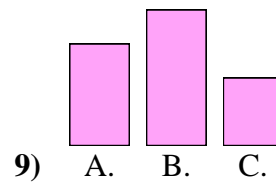
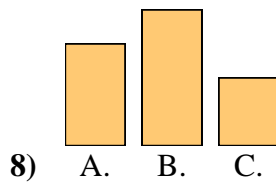
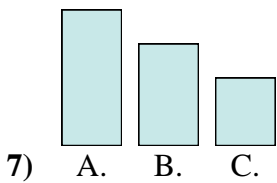
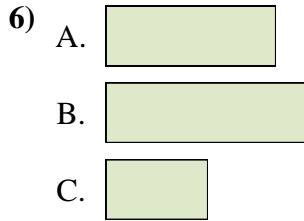
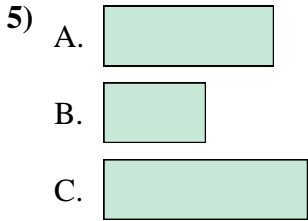
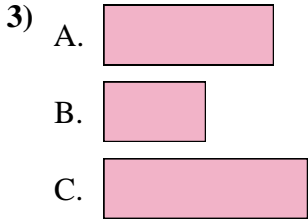

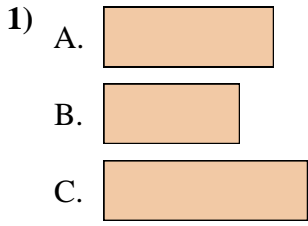


Risposte

1. \_\_\_\_\_
2. \_\_\_\_\_
3. \_\_\_\_\_
4. \_\_\_\_\_
5. \_\_\_\_\_
6. \_\_\_\_\_
7. \_\_\_\_\_
8. \_\_\_\_\_
9. \_\_\_\_\_
10. \_\_\_\_\_
11. \_\_\_\_\_
12. \_\_\_\_\_



Metti in ordine gli oggetti dal più piccolo al più grande.



Risposte

1. **B, A, C**

2. **C, A, B**

3. **B, A, C**

4. **A, B, C**

5. **B, A, C**

6. **C, A, B**

7. **C, B, A**

8. **C, A, B**

9. **C, A, B**

10. **B, A, C**

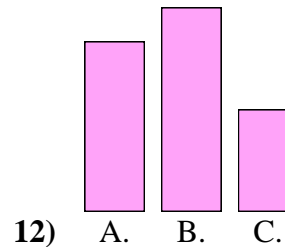

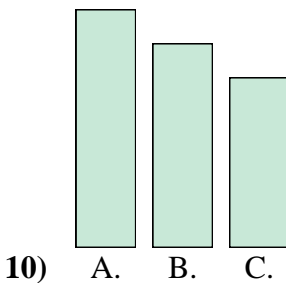
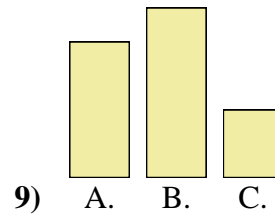
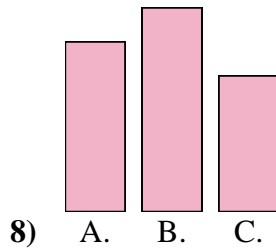
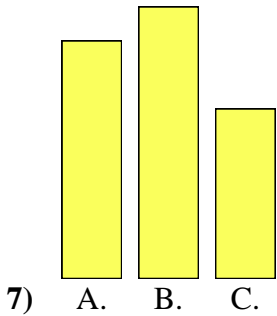
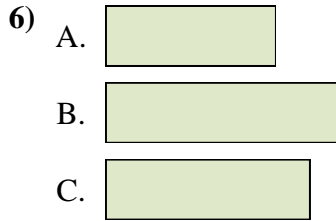
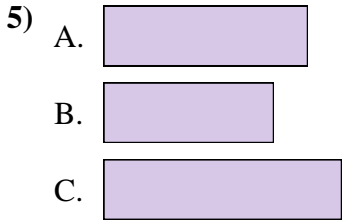
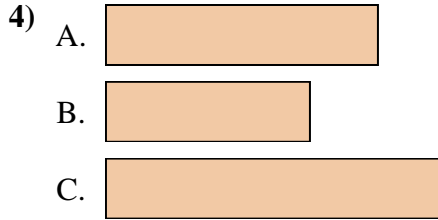
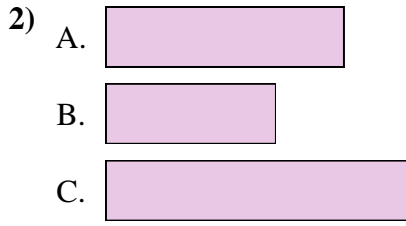
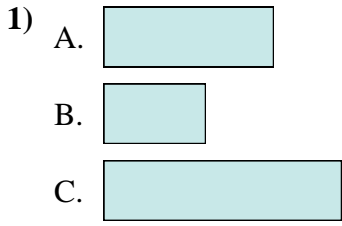
11. **C, A, B**

12. **B, A, C**





Metti in ordine gli oggetti dal più piccolo al più grande.

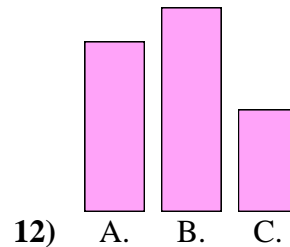
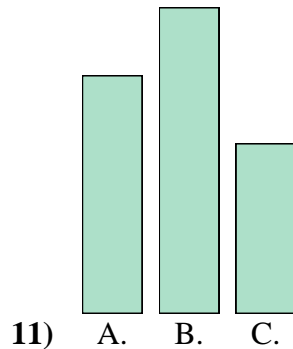
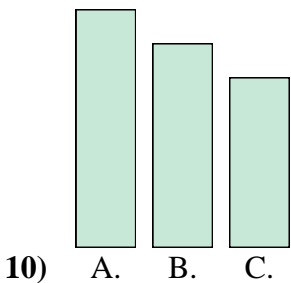
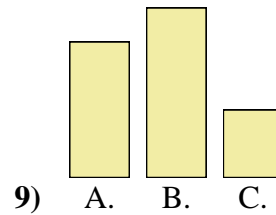
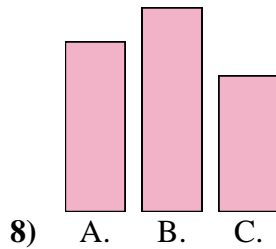
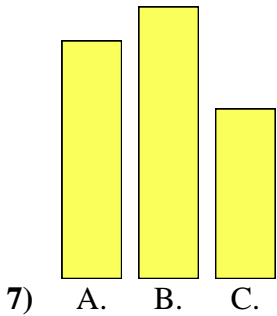
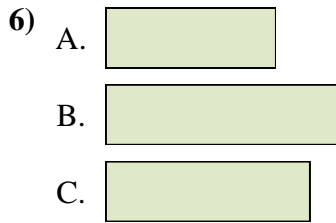
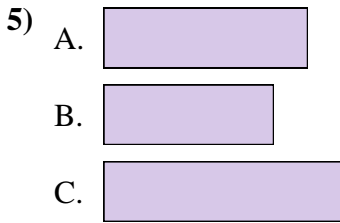
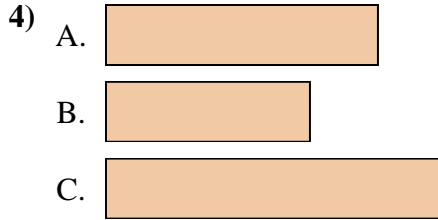
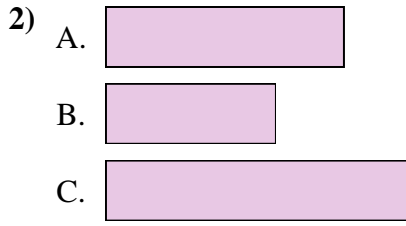
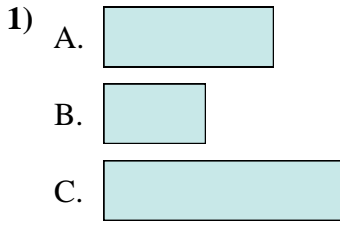


Risposte

1. \_\_\_\_\_
2. \_\_\_\_\_
3. \_\_\_\_\_
4. \_\_\_\_\_
5. \_\_\_\_\_
6. \_\_\_\_\_
7. \_\_\_\_\_
8. \_\_\_\_\_
9. \_\_\_\_\_
10. \_\_\_\_\_
11. \_\_\_\_\_
12. \_\_\_\_\_



Metti in ordine gli oggetti dal più piccolo al più grande.



**Risposte**

1. **B, A, C**

2. **B, A, C**

3. **C, A, B**

4. **B, A, C**

5. **B, A, C**

6. **A, C, B**

7. **C, A, B**

8. **C, A, B**

9. **C, A, B**

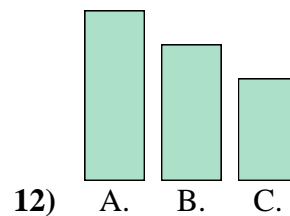
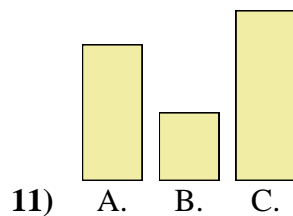
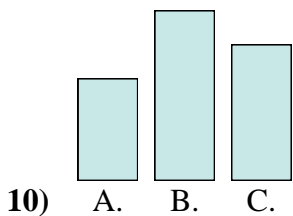
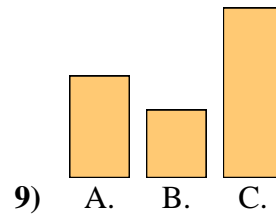
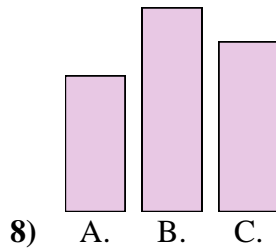
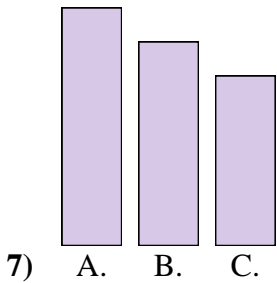
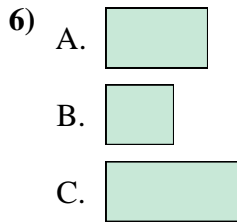
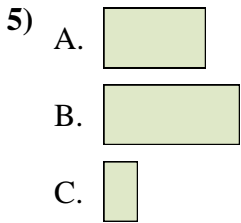
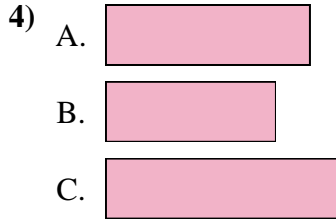
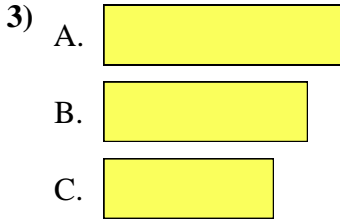
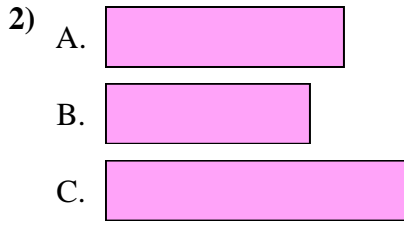
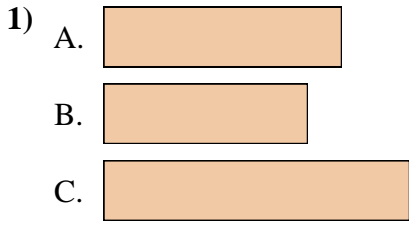
10. **C, B, A**

11. **C, A, B**

12. **C, A, B**



Metti in ordine gli oggetti dal più piccolo al più grande.

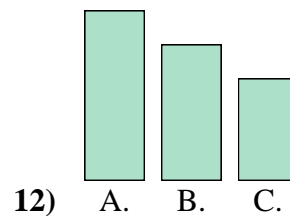
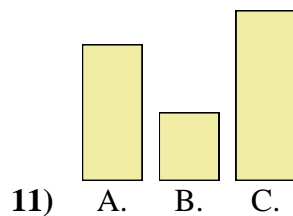
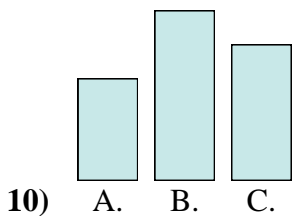
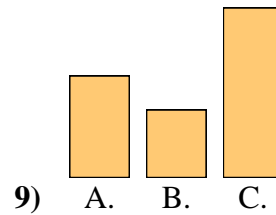
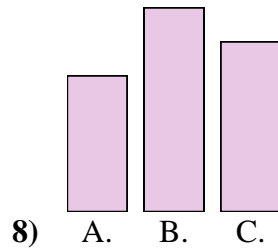
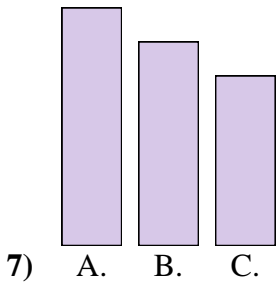
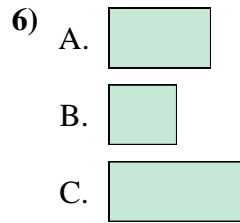
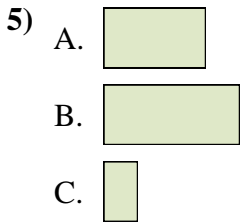
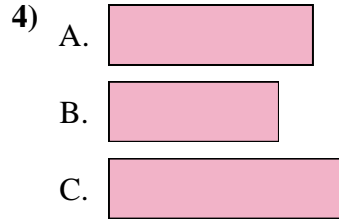
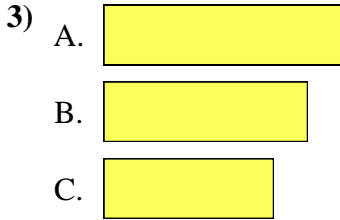
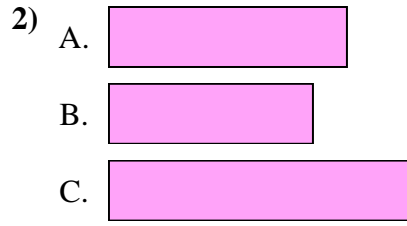
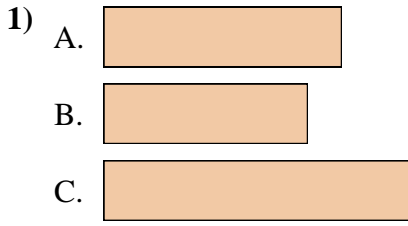


Risposte

1. \_\_\_\_\_
2. \_\_\_\_\_
3. \_\_\_\_\_
4. \_\_\_\_\_
5. \_\_\_\_\_
6. \_\_\_\_\_
7. \_\_\_\_\_
8. \_\_\_\_\_
9. \_\_\_\_\_
10. \_\_\_\_\_
11. \_\_\_\_\_
12. \_\_\_\_\_



Metti in ordine gli oggetti dal più piccolo al più grande.



Risposte

1. B, A, C

2. B, A, C

3. C, B, A

4. B, A, C

5. C, A, B

6. B, A, C

7. C, B, A

8. A, C, B

9. B, A, C

10. A, C, B

11. B, A, C

12. C, B, A