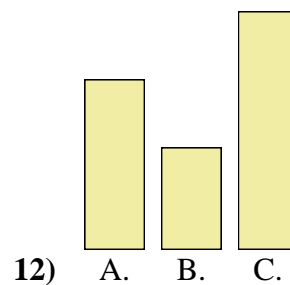
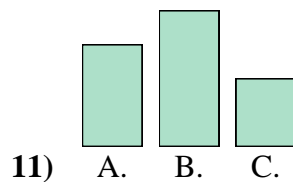
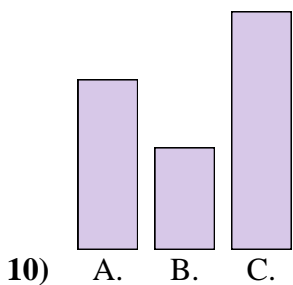
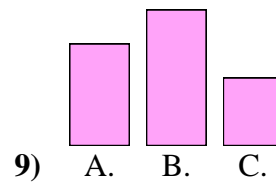
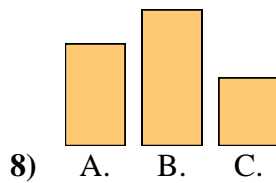
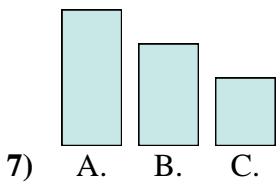
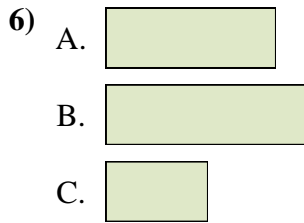
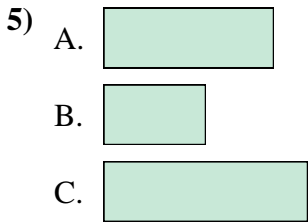
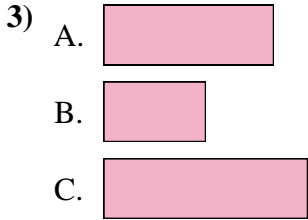

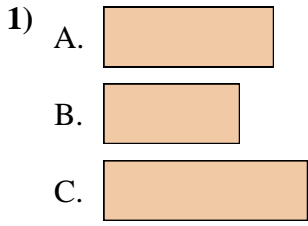




Metti in ordine gli oggetti dal più piccolo al più grande.

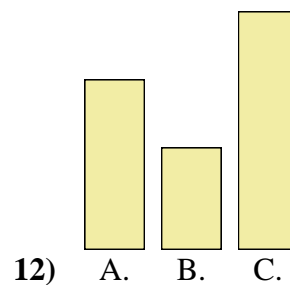
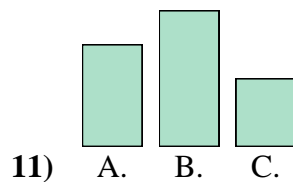
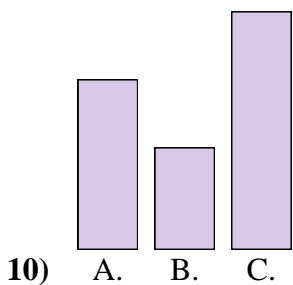
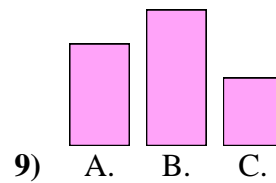
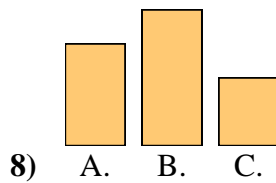
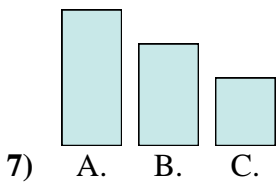
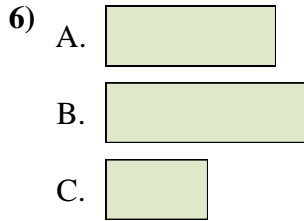
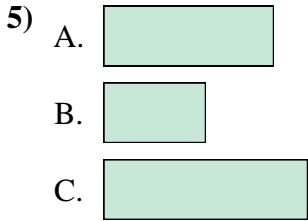
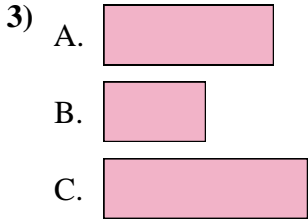

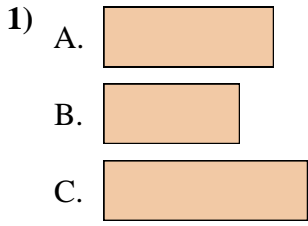


Risposte

1. _____
2. _____
3. _____
4. _____
5. _____
6. _____
7. _____
8. _____
9. _____
10. _____
11. _____
12. _____



Metti in ordine gli oggetti dal più piccolo al più grande.



Risposte

1. **B, A, C**

2. **C, A, B**

3. **B, A, C**

4. **A, B, C**

5. **B, A, C**

6. **C, A, B**

7. **C, B, A**

8. **C, A, B**

9. **C, A, B**

10. **B, A, C**

11. **C, A, B**

12. **B, A, C**