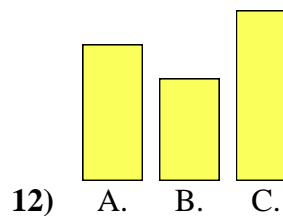
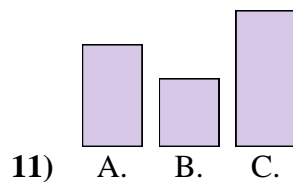
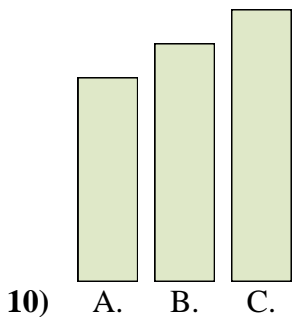
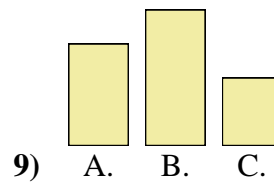
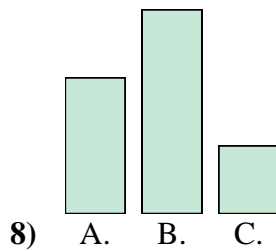
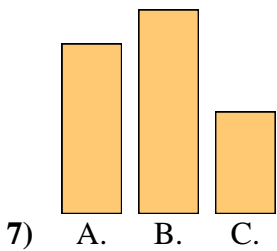
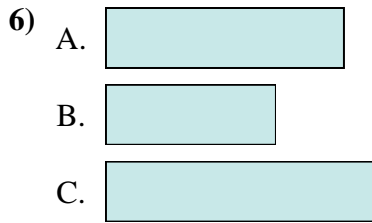
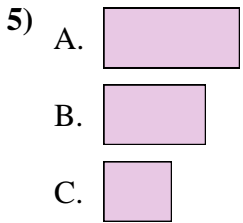
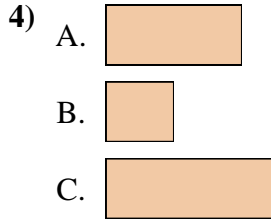
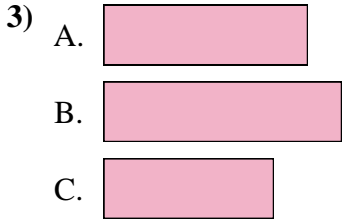
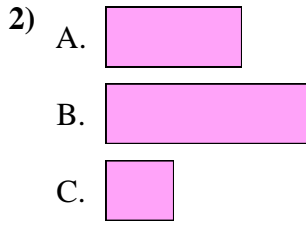
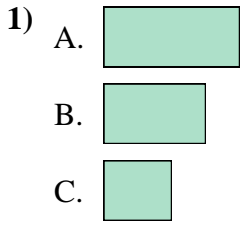




Metti in ordine gli oggetti dal più piccolo al più grande.

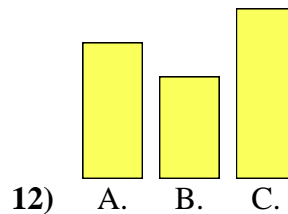
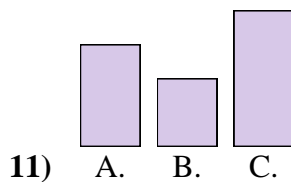
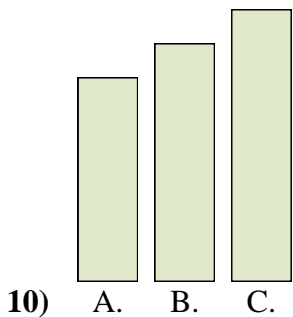
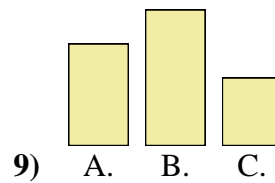
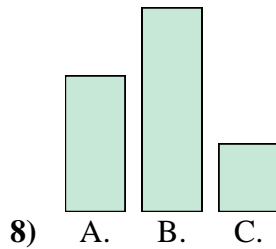
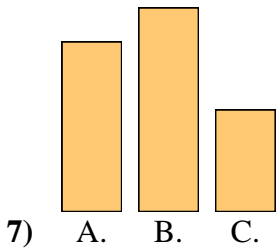
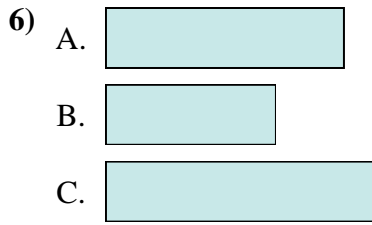
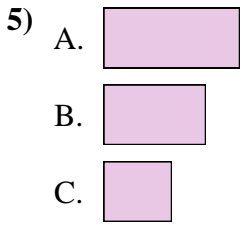
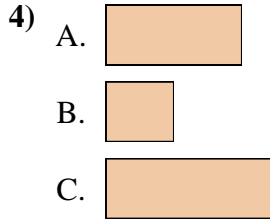
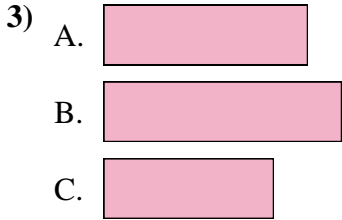
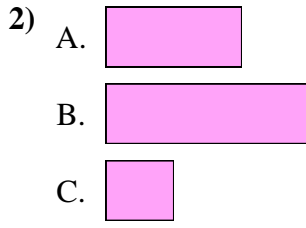
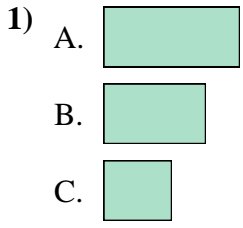


Risposte

1. \_\_\_\_\_
2. \_\_\_\_\_
3. \_\_\_\_\_
4. \_\_\_\_\_
5. \_\_\_\_\_
6. \_\_\_\_\_
7. \_\_\_\_\_
8. \_\_\_\_\_
9. \_\_\_\_\_
10. \_\_\_\_\_
11. \_\_\_\_\_
12. \_\_\_\_\_



Metti in ordine gli oggetti dal più piccolo al più grande.



**Risposte**

1. C, B, A

2. C, A, B

3. C, A, B

4. B, A, C

5. C, B, A

6. B, A, C

7. C, A, B

8. C, A, B

9. C, A, B

10. A, B, C

11. B, A, C

12. B, A, C