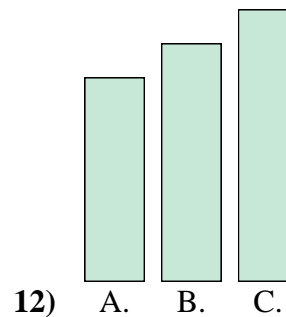
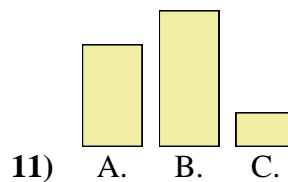
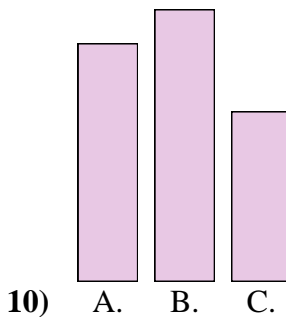
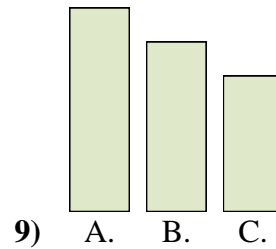
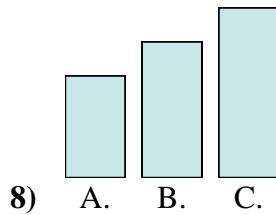

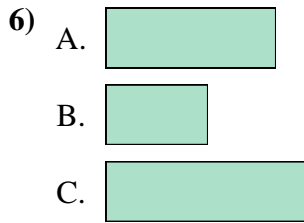
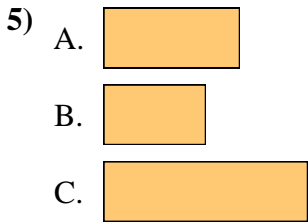
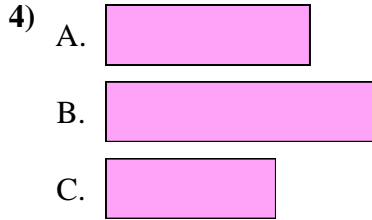
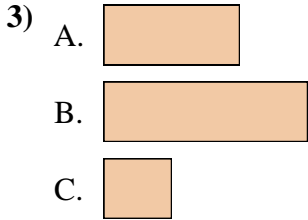
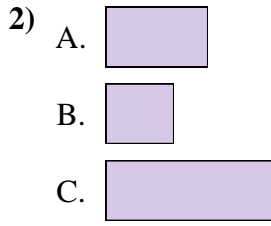
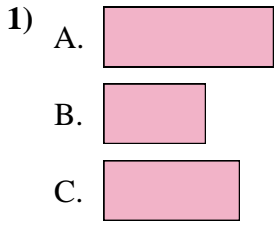




Metti in ordine gli oggetti dal più piccolo al più grande.

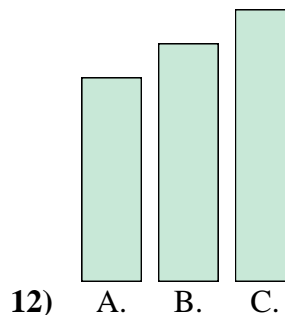
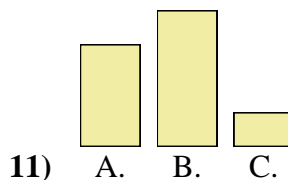
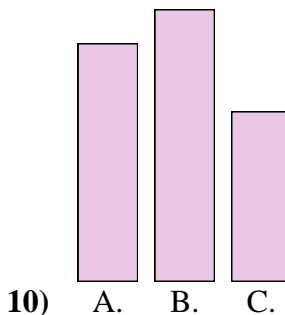

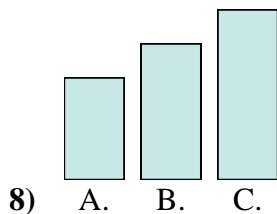

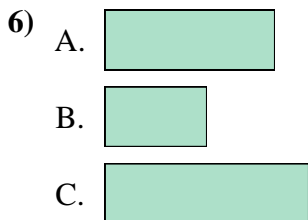
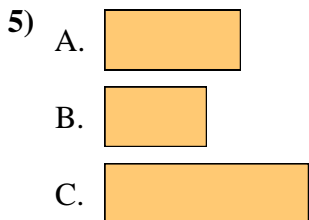
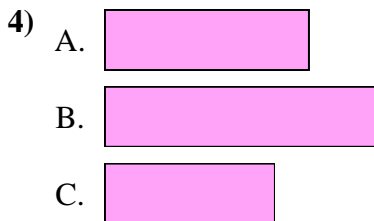
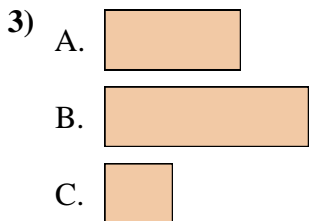
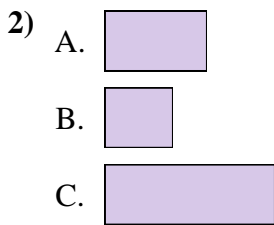
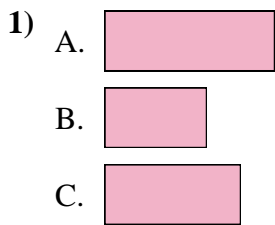


Risposte

1. \_\_\_\_\_
2. \_\_\_\_\_
3. \_\_\_\_\_
4. \_\_\_\_\_
5. \_\_\_\_\_
6. \_\_\_\_\_
7. \_\_\_\_\_
8. \_\_\_\_\_
9. \_\_\_\_\_
10. \_\_\_\_\_
11. \_\_\_\_\_
12. \_\_\_\_\_



Metti in ordine gli oggetti dal più piccolo al più grande.



Risposte

1. B, C, A

2. B, A, C

3. C, A, B

4. C, A, B

5. B, A, C

6. B, A, C

7. B, A, C

8. A, B, C

9. C, B, A

10. C, A, B

11. C, A, B

12. A, B, C