
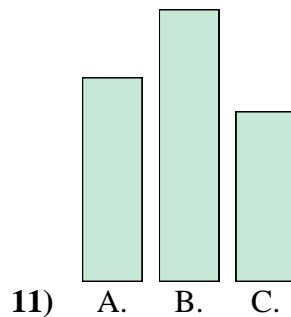
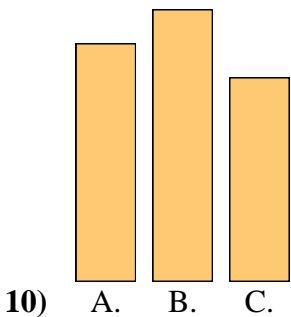
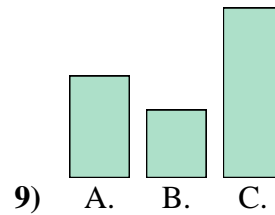
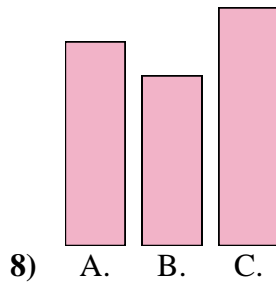
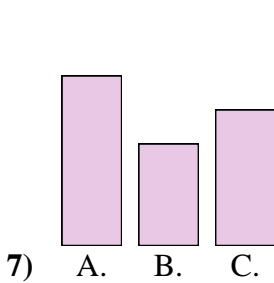
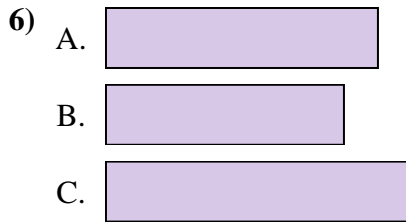
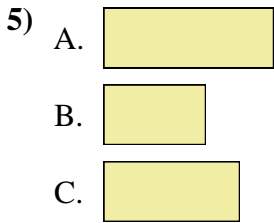
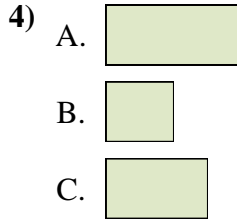
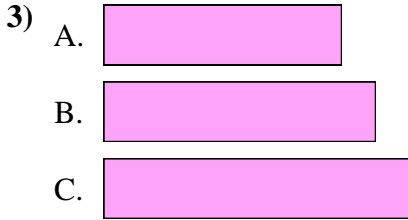
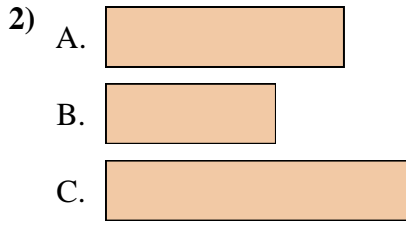
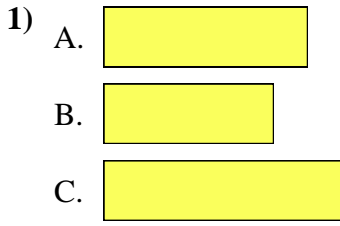




Metti in ordine gli oggetti dal più piccolo al più grande.

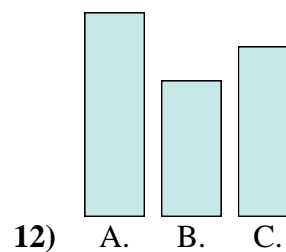
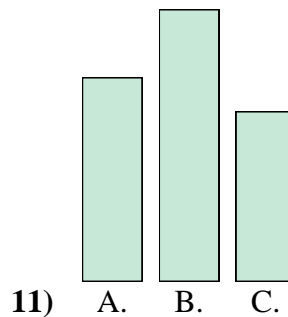
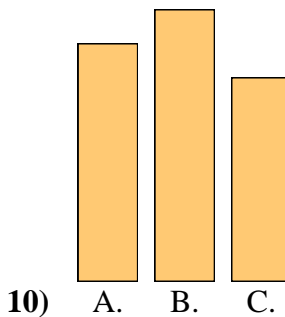
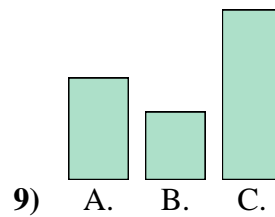
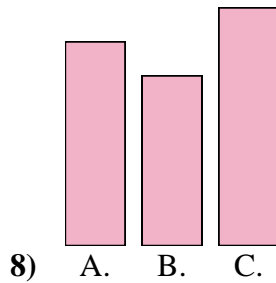
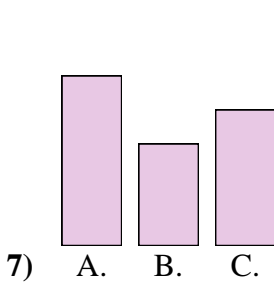
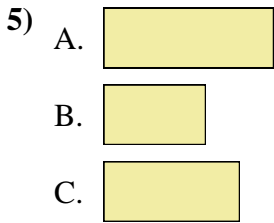
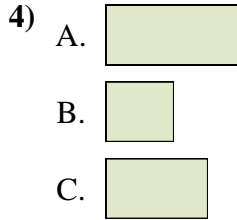
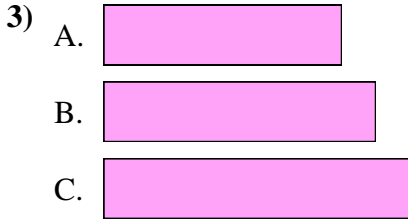
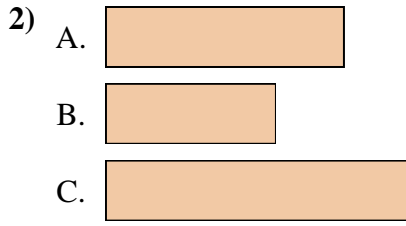
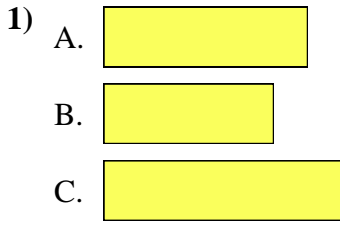


**Risposte**

1. \_\_\_\_\_
2. \_\_\_\_\_
3. \_\_\_\_\_
4. \_\_\_\_\_
5. \_\_\_\_\_
6. \_\_\_\_\_
7. \_\_\_\_\_
8. \_\_\_\_\_
9. \_\_\_\_\_
10. \_\_\_\_\_
11. \_\_\_\_\_
12. \_\_\_\_\_



Metti in ordine gli oggetti dal più piccolo al più grande.



**Risposte**

1. **B, A, C**

2. **B, A, C**

3. **A, B, C**

4. **B, C, A**

5. **B, C, A**

6. **B, A, C**

7. **B, C, A**

8. **B, A, C**

9. **B, A, C**

10. **C, A, B**

11. **C, A, B**

12. **B, C, A**