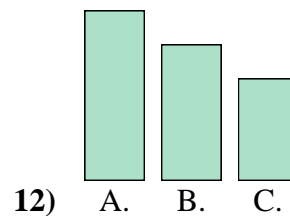
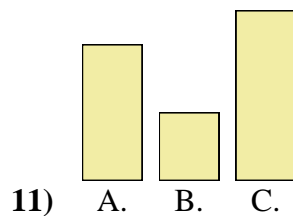
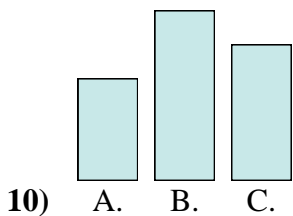
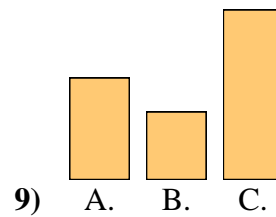
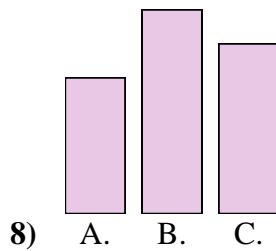
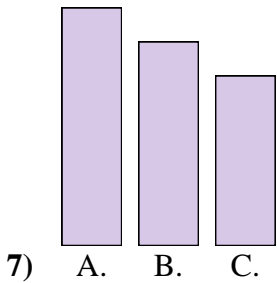
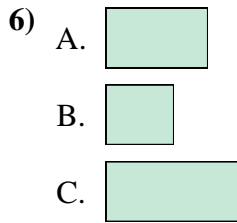
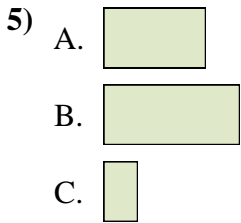
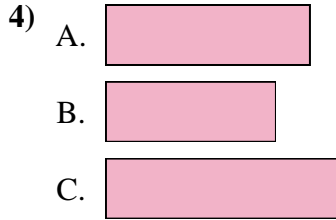
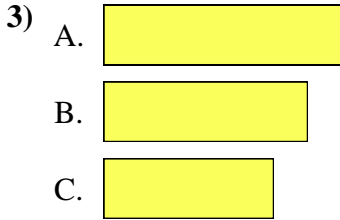
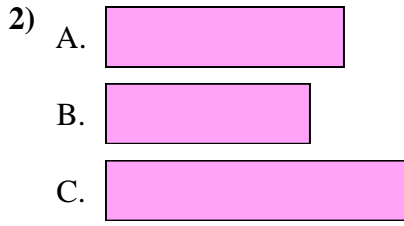
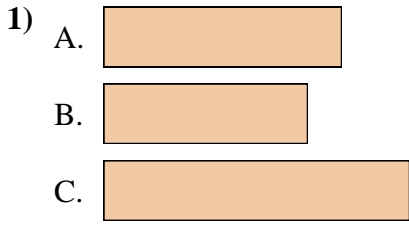




Metti in ordine gli oggetti dal più piccolo al più grande.

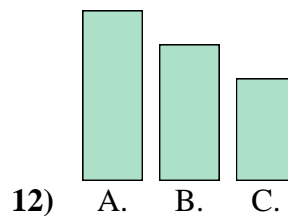
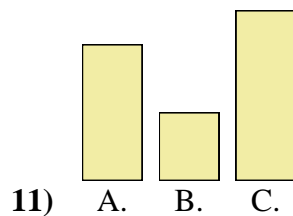
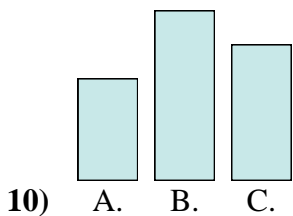
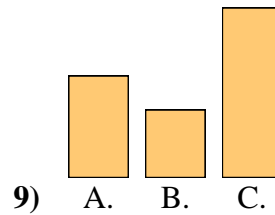
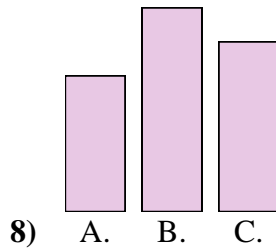
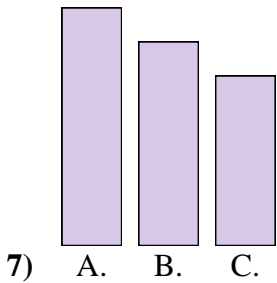
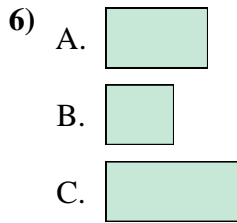
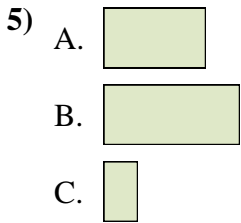
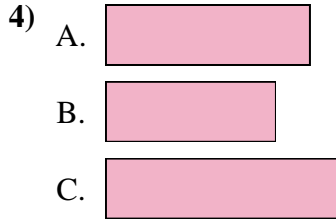
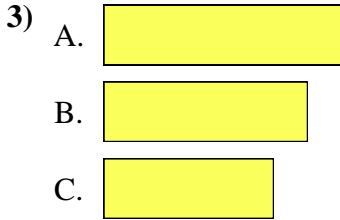
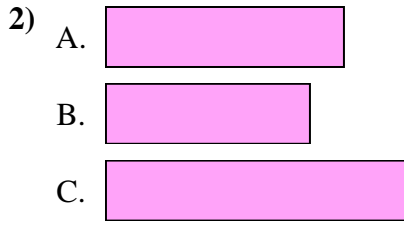
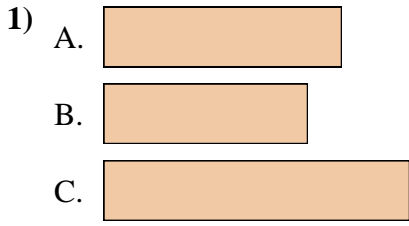


Risposte

1. \_\_\_\_\_
2. \_\_\_\_\_
3. \_\_\_\_\_
4. \_\_\_\_\_
5. \_\_\_\_\_
6. \_\_\_\_\_
7. \_\_\_\_\_
8. \_\_\_\_\_
9. \_\_\_\_\_
10. \_\_\_\_\_
11. \_\_\_\_\_
12. \_\_\_\_\_



Metti in ordine gli oggetti dal più piccolo al più grande.



Risposte

1. B, A, C

2. B, A, C

3. C, B, A

4. B, A, C

5. C, A, B

6. B, A, C

7. C, B, A

8. A, C, B

9. B, A, C

10. A, C, B

11. B, A, C

12. C, B, A