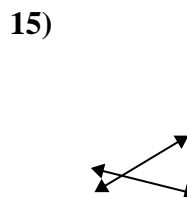
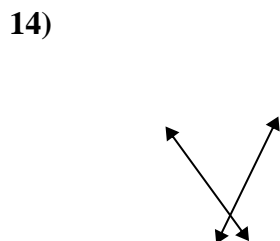
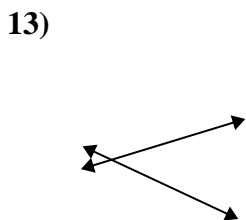
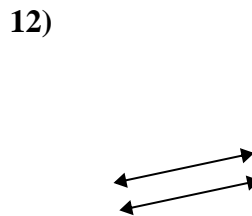
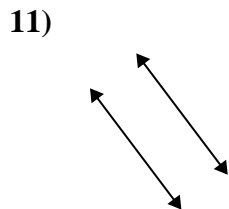
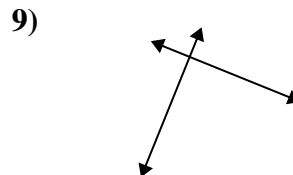
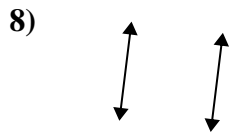
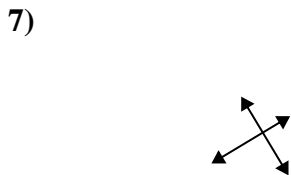
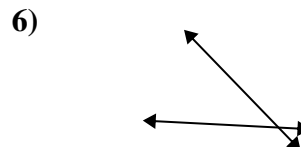
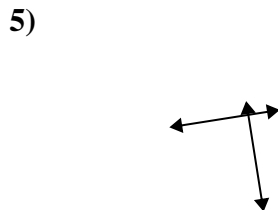
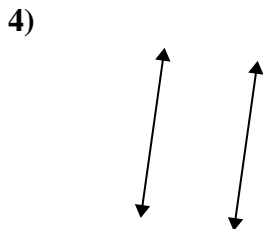
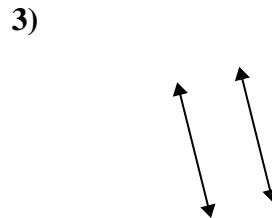
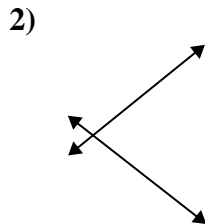
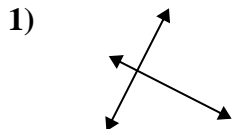




Definisci 'parallele', 'perp'(perpendicolare) o 'inter'(intersezione) per descrivere le linee.

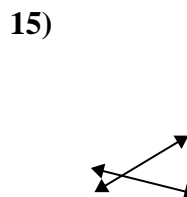
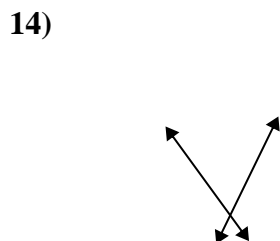
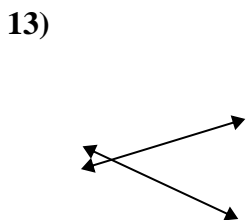
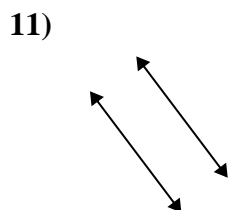

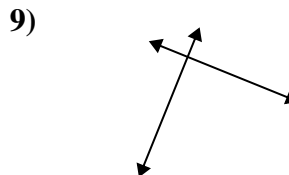
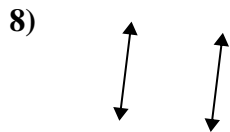
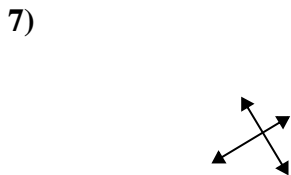
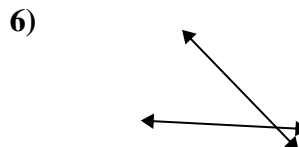
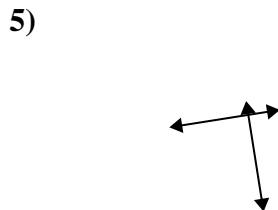
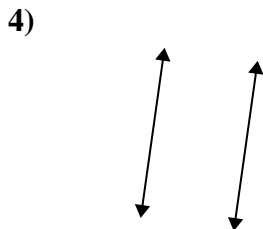
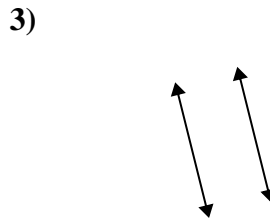
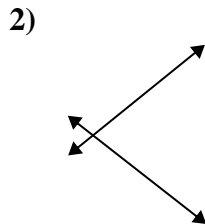
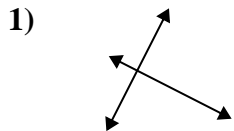
Risposte



- 1. _____
- 2. _____
- 3. _____
- 4. _____
- 5. _____
- 6. _____
- 7. _____
- 8. _____
- 9. _____
- 10. _____
- 11. _____
- 12. _____
- 13. _____
- 14. _____
- 15. _____



Definisci 'parallele', 'perp'(perpendicolare) o 'inter'(intersezione) per descrivere le linee.



Risposte

1. perp & inter

2. inter

3. parallele

4. parallele

5. perp & inter

6. inter

7. perp & inter

8. parallele

9. perp & inter

10. perp & inter

11. parallele

12. parallele

13. inter

14. inter

15. inter