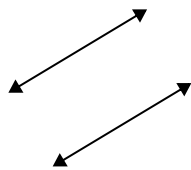




Definisci "parallele", "perp"(perpendicolare) o "inter"(intersezione) per descrivere le linee.

Risposte

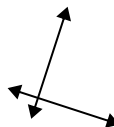
1)



2)



3)



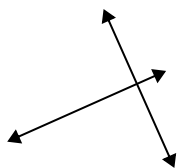
1. _____

2. _____

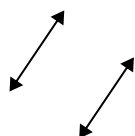
3. _____

4. _____

4)



5)



6)



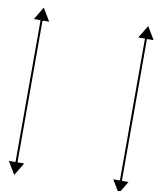
5. _____

6. _____

7. _____

8. _____

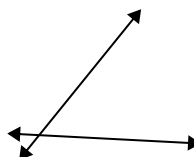
7)



8)



9)

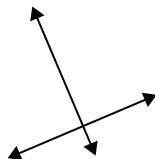


9. _____

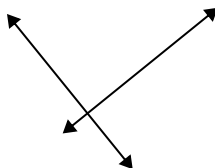
10. _____

11. _____

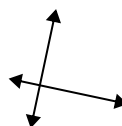
10)



11)



12)



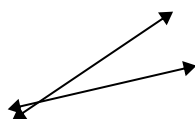
12. _____

13. _____

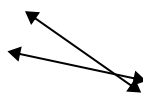
14. _____

15. _____

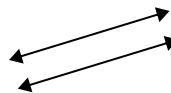
13)



14)

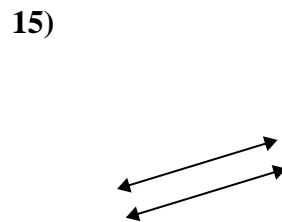
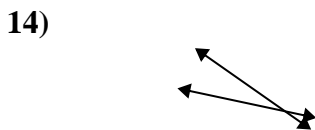
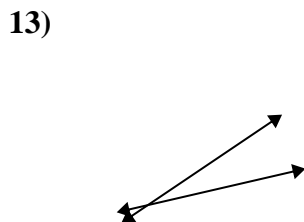
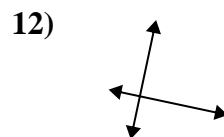
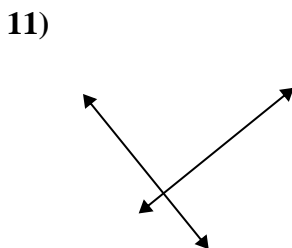
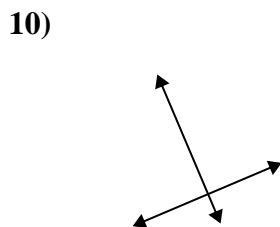
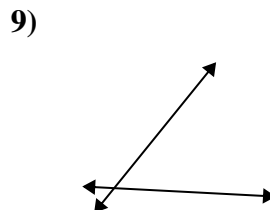
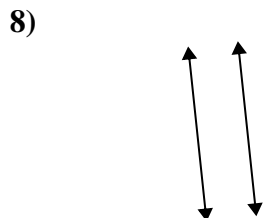
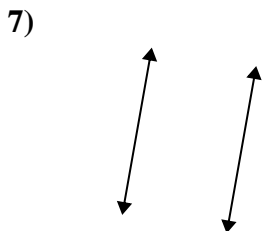
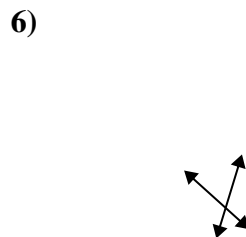
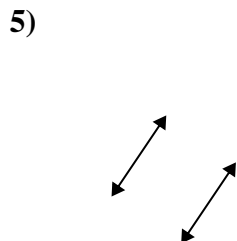
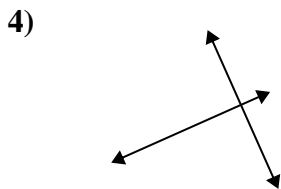
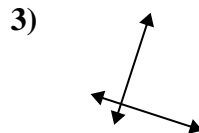
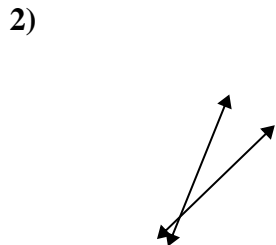
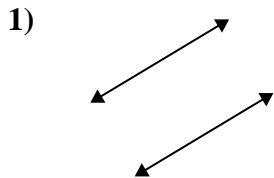


15)





Definisci "parallele", "perp"(perpendicolare) o "inter"(intersezione) per descrivere le linee.



Risposte

1. parallel

2. inter

3. perp & inter

4. perp & inter

5. parallel

6. inter

7. parallel

8. parallel

9. inter

10. perp & inter

11. perp & inter

12. perp & inter

13. inter

14. inter

15. parallel



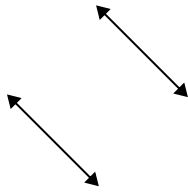
Definisci "parallele", "perp"(perpendicolare) o "inter"(intersezione) per descrivere le linee.

Risposte

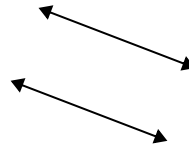
1)



2)



3)



1. _____

2. _____

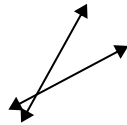
3. _____

4. _____

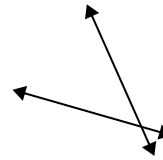
4)



5)



6)



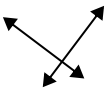
5. _____

6. _____

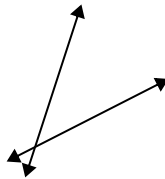
7. _____

8. _____

7)



8)



9)



9. _____

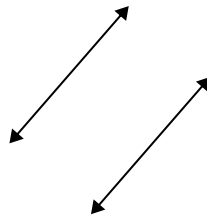
10. _____

11. _____

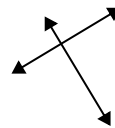
10)



11)



12)



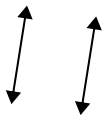
12. _____

13. _____

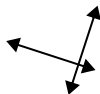
14. _____

15. _____

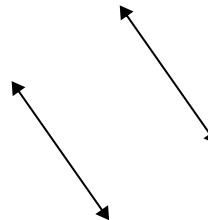
13)



14)



15)



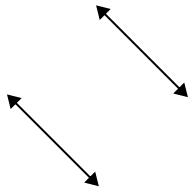


Definisci "parallele", "perp"(perpendicolare) o "inter"(intersezione) per descrivere le linee.

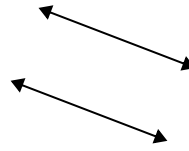
1)



2)



3)

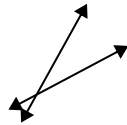


1. inter

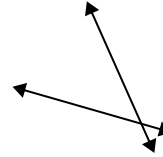
4)



5)



6)



2. parallel

3. parallel

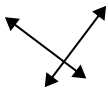
4. perp & inter

5. inter

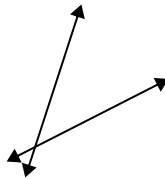
6. inter

7. perp & inter

7)



8)



9)



8. inter

9. perp & inter

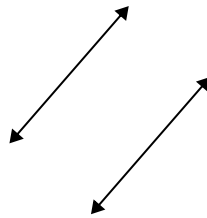
10. inter

11. parallel

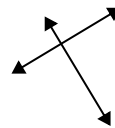
10)



11)



12)



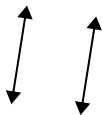
12. perp & inter

13. parallel

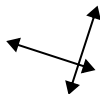
14. perp & inter

15. parallel

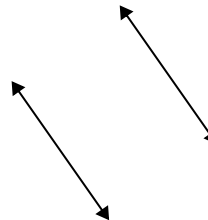
13)



14)



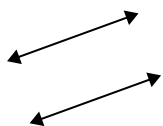
15)



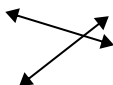


Definisci "parallele", "perp"(perpendicolare) o "inter"(intersezione) per descrivere le linee.

1)



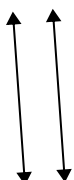
2)



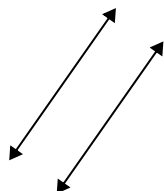
3)



4)



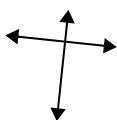
5)



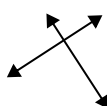
6)



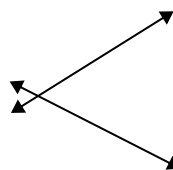
7)



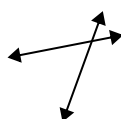
8)



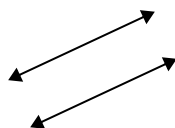
9)



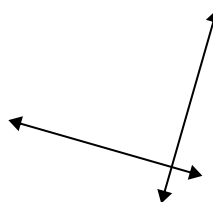
10)



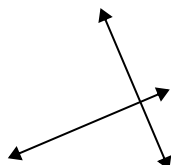
11)



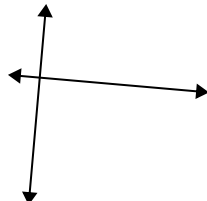
12)



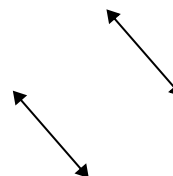
13)



14)



15)



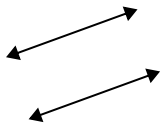
Risposte

1. _____
2. _____
3. _____
4. _____
5. _____
6. _____
7. _____
8. _____
9. _____
10. _____
11. _____
12. _____
13. _____
14. _____
15. _____

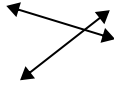


Definisci "parallele", "perp"(perpendicolare) o "inter"(intersezione) per descrivere le linee.

1)



2)



3)



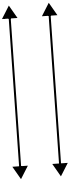
1. parallel

2. inter

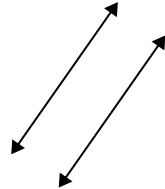
3. inter

4. parallel

4)



5)



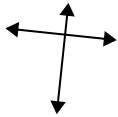
6)



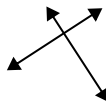
5. parallel

6. inter

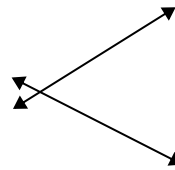
7)



8)



9)



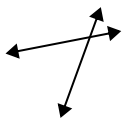
7. perp & inter

8. perp & inter

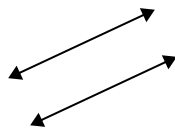
9. inter

10. inter

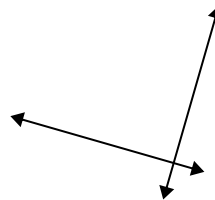
10)



11)



12)



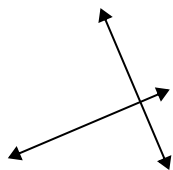
11. parallel

12. perp & inter

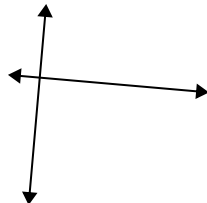
13. perp & inter

14. perp & inter

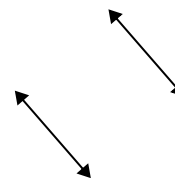
13)



14)



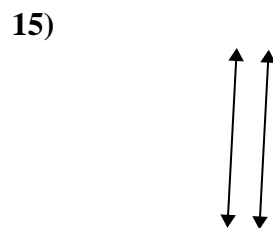
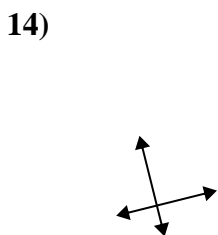
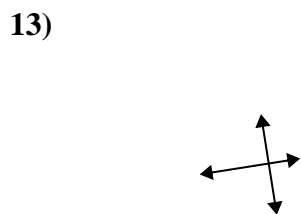
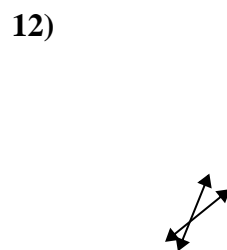
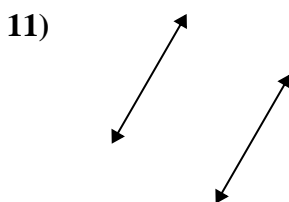
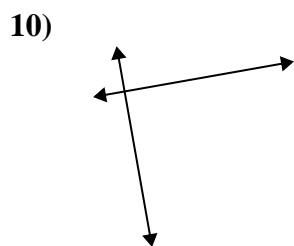
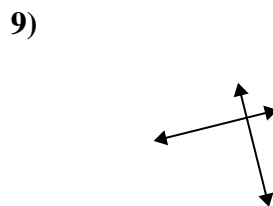
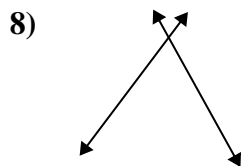
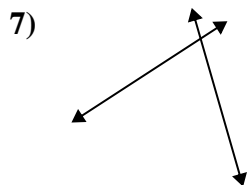
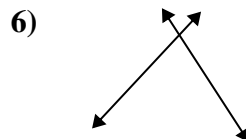
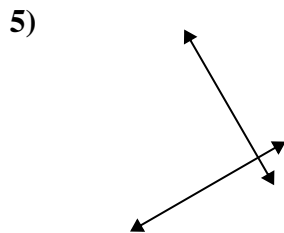
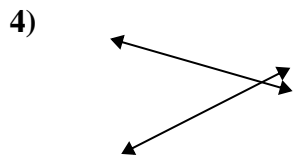
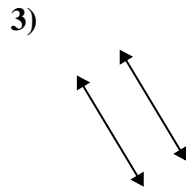
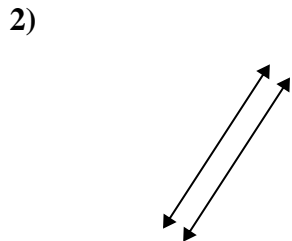
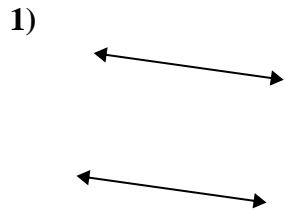
15)



15. parallel



Definisci "parallele", "perp"(perpendicolare) o "inter"(intersezione) per descrivere le linee.

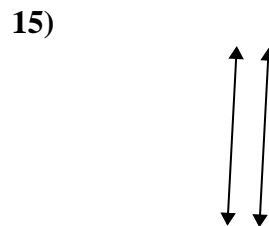
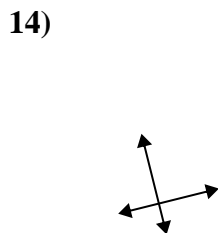
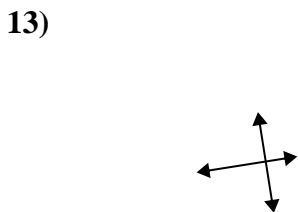
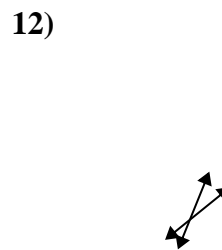
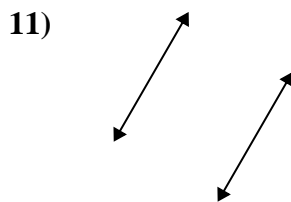
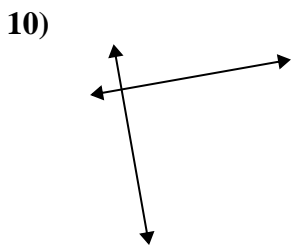
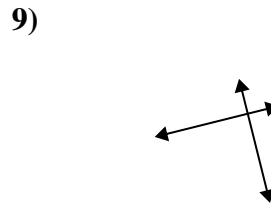
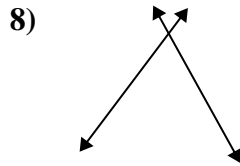
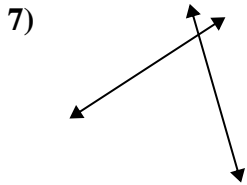
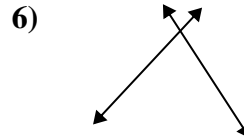
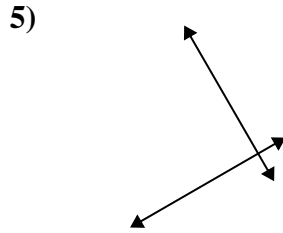
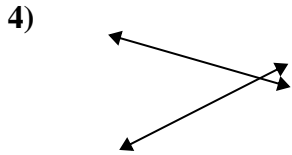
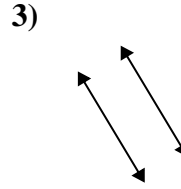
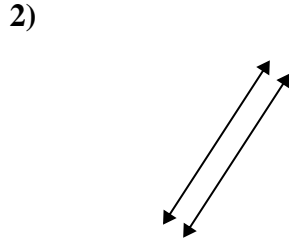
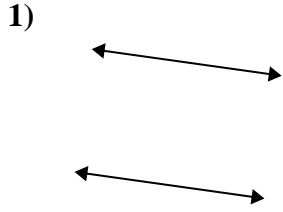


Risposte

1. _____
2. _____
3. _____
4. _____
5. _____
6. _____
7. _____
8. _____
9. _____
10. _____
11. _____
12. _____
13. _____
14. _____
15. _____



Definisci "parallele", "perp"(perpendicolare) o "inter"(intersezione) per descrivere le linee.



Risposte

1. parallel

2. parallel

3. parallel

4. inter

5. perp & inter

6. inter

7. inter

8. inter

9. perp & inter

10. perp & inter

11. parallel

12. inter

13. perp & inter

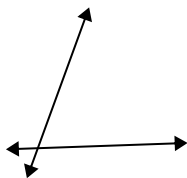
14. perp & inter

15. parallel

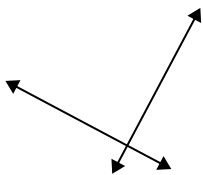


Definisci "parallele", "perp"(perpendicolare) o "inter"(intersezione) per descrivere le linee.

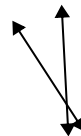
1)



2)



3)



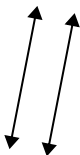
1. _____

2. _____

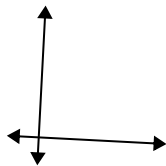
3. _____

4. _____

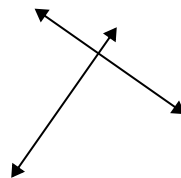
4)



5)



6)



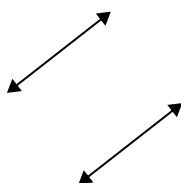
5. _____

6. _____

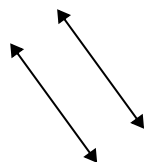
7. _____

8. _____

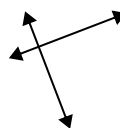
7)



8)



9)

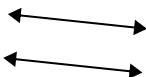


9. _____

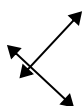
10. _____

11. _____

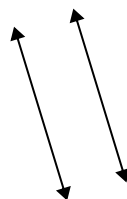
10)



11)



12)



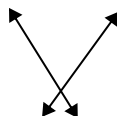
12. _____

13. _____

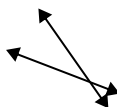
14. _____

15. _____

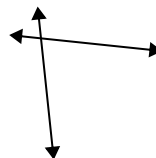
13)



14)

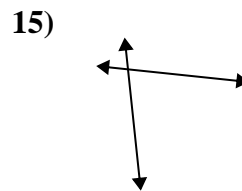
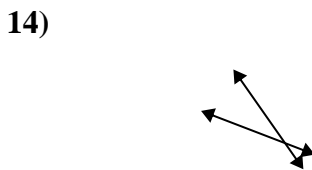
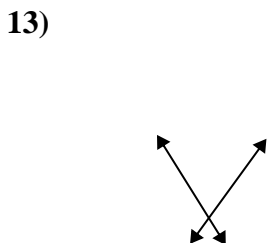
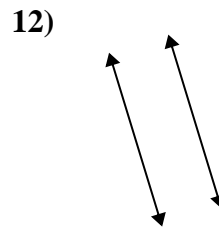
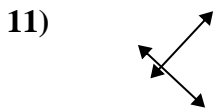
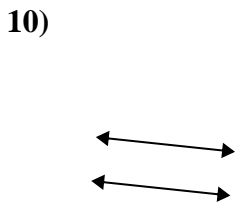
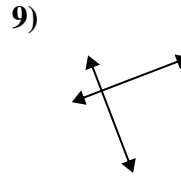
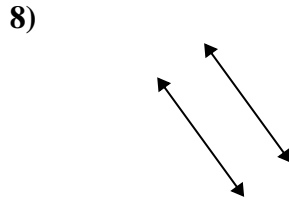
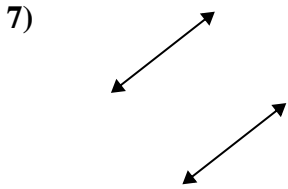
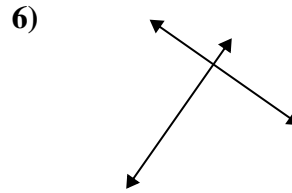
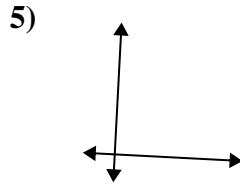
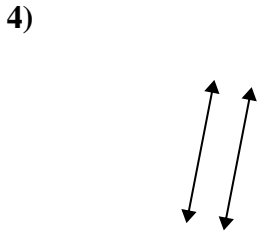
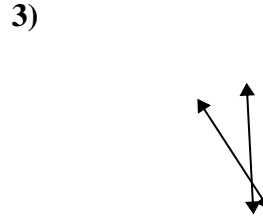
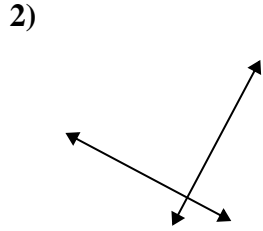
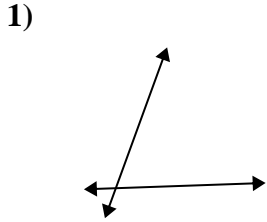


15)





Definisci "parallele", "perp"(perpendicolare) o "inter"(intersezione) per descrivere le linee.



Risposte

1. inter

2. perp & inter

3. inter

4. parallel

5. perp & inter

6. perp & inter

7. parallel

8. parallel

9. perp & inter

10. parallel

11. perp & inter

12. parallel

13. inter

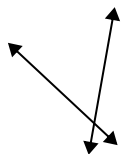
14. inter

15. inter

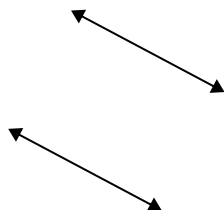


Definisci "parallele", "perp"(perpendicolare) o "inter"(intersezione) per descrivere le linee.

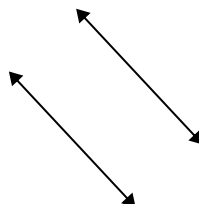
1)



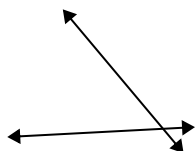
2)



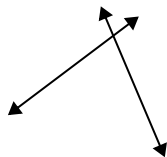
3)



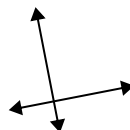
4)



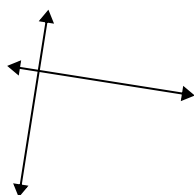
5)



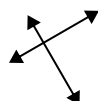
6)



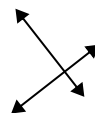
7)



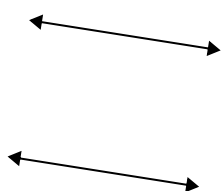
8)



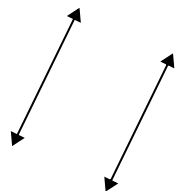
9)



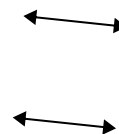
10)



11)



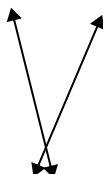
12)



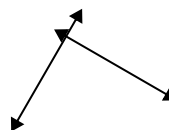
13)



14)



15)



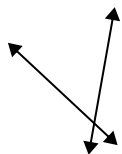
Risposte

1. _____
2. _____
3. _____
4. _____
5. _____
6. _____
7. _____
8. _____
9. _____
10. _____
11. _____
12. _____
13. _____
14. _____
15. _____

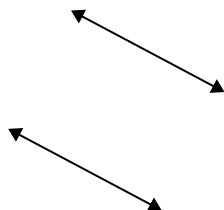


Definisci "parallele", "perp"(perpendicolare) o "inter"(intersezione) per descrivere le linee.

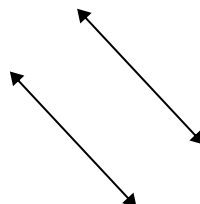
1)



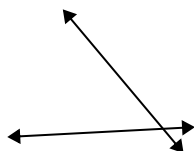
2)



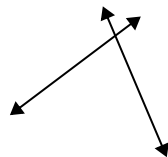
3)



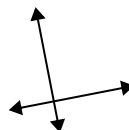
4)



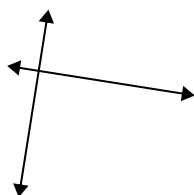
5)



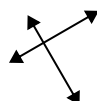
6)



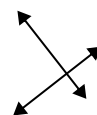
7)



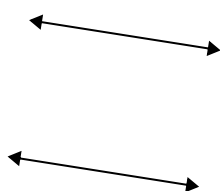
8)



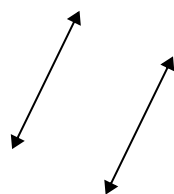
9)



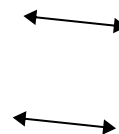
10)



11)



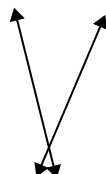
12)



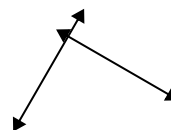
13)



14)



15)



Risposte

1. inter

2. parallel

3. parallel

4. inter

5. inter

6. perp & inter

7. perp & inter

8. perp & inter

9. perp & inter

10. parallel

11. parallel

12. parallel

13. inter

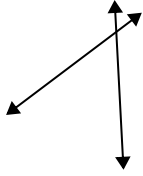
14. inter

15. perp & inter

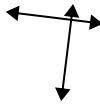


Definisci "parallele", "perp"(perpendicolare) o "inter"(intersezione) per descrivere le linee.

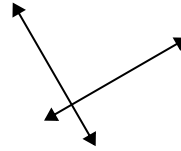
1)



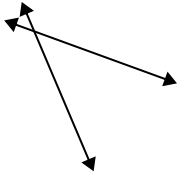
2)



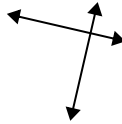
3)



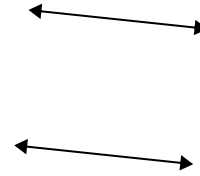
4)



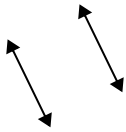
5)




6)



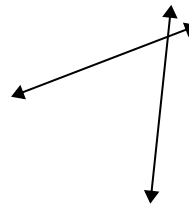
7)



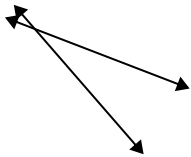
8)



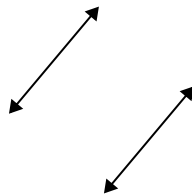
9)



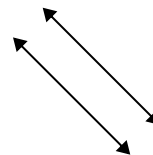
10)



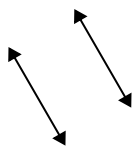
11)



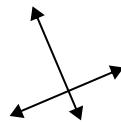
12)



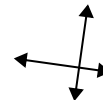
13)



14)



15)

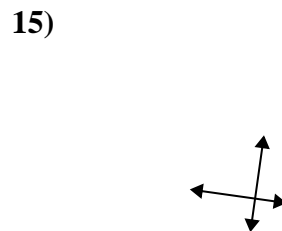
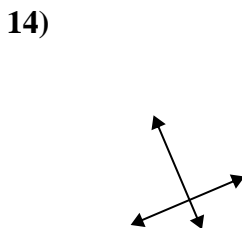
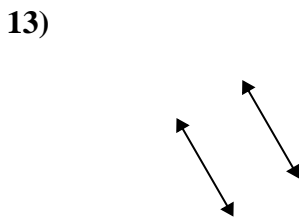
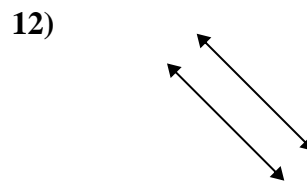
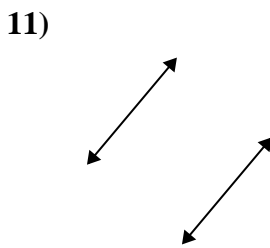
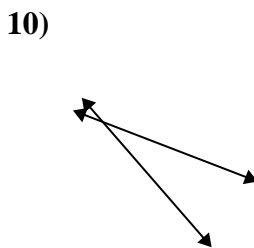
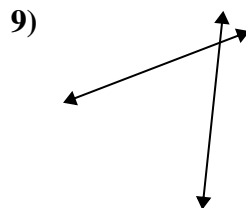
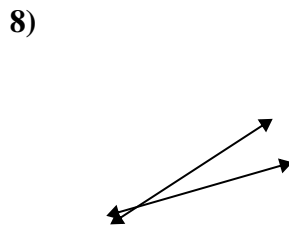
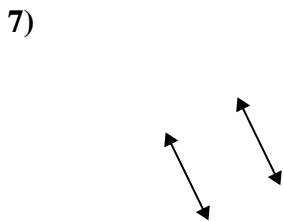
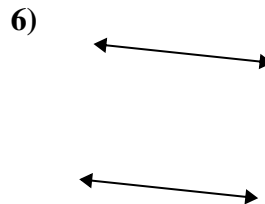
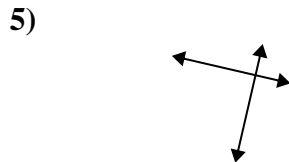
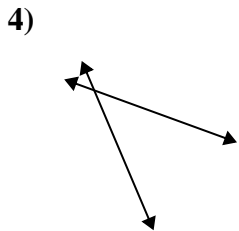
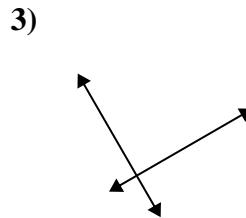
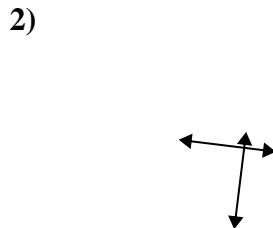
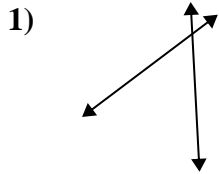


Risposte

1. _____
2. _____
3. _____
4. _____
5. _____
6. _____
7. _____
8. _____
9. _____
10. _____
11. _____
12. _____
13. _____
14. _____
15. _____



Definisci "parallele", "perp"(perpendicolare) o "inter"(intersezione) per descrivere le linee.



Risposte

1. inter

2. perp & inter

3. perp & inter

4. inter

5. perp & inter

6. parallel

7. parallel

8. inter

9. inter

10. inter

11. parallel

12. parallel

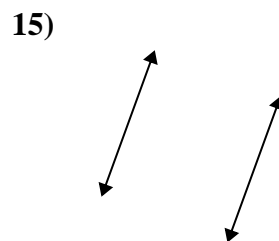
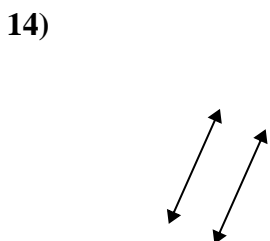
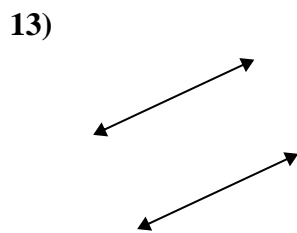
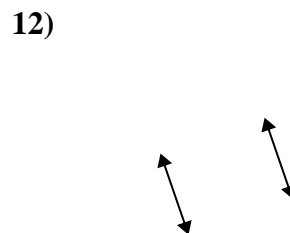
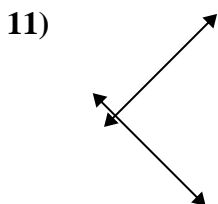
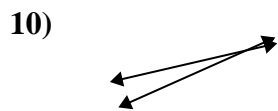
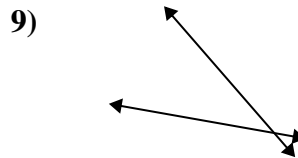
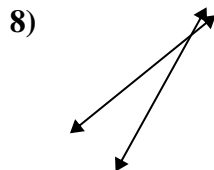
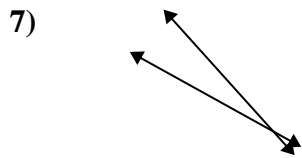
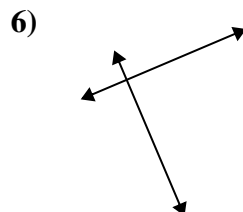
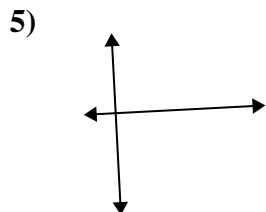
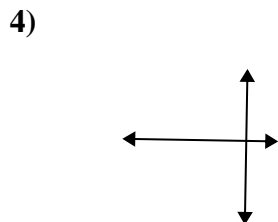
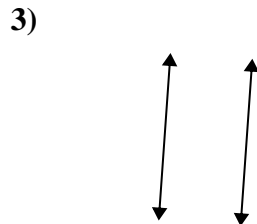
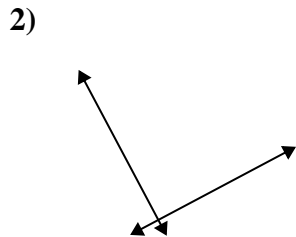
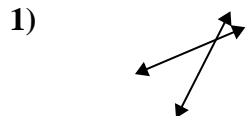
13. parallel

14. perp & inter

15. perp & inter



Definisci "parallele", "perp"(perpendicolare) o "inter"(intersezione) per descrivere le linee.

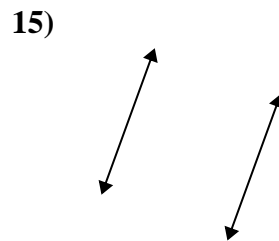
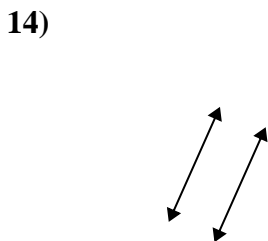
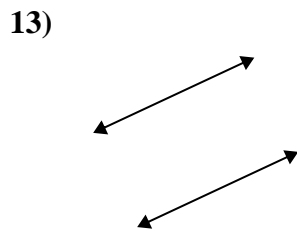
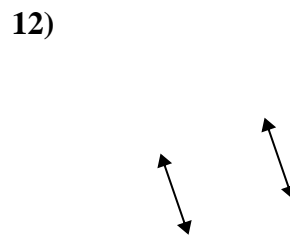
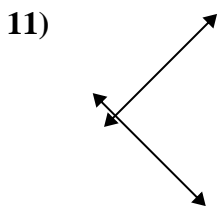
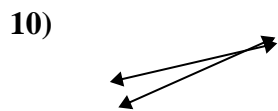
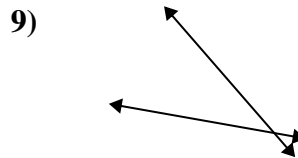
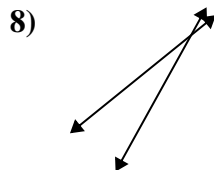
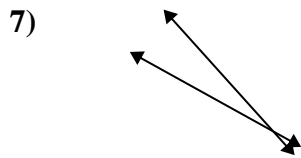
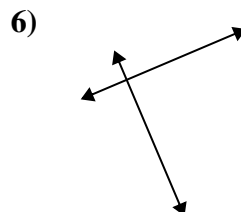
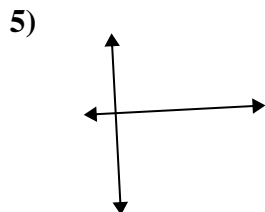
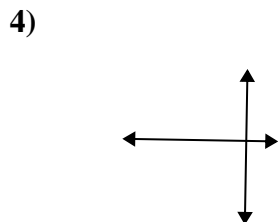
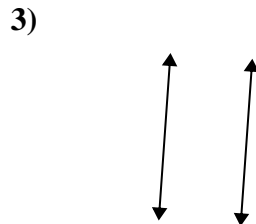
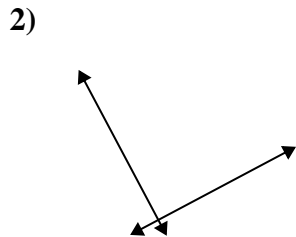
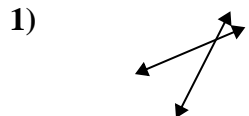


Risposte

1. _____
2. _____
3. _____
4. _____
5. _____
6. _____
7. _____
8. _____
9. _____
10. _____
11. _____
12. _____
13. _____
14. _____
15. _____



Definisci "parallele", "perp"(perpendicolare) o "inter"(intersezione) per descrivere le linee.



Risposte

1. inter

2. perp & inter

3. parallel

4. perp & inter

5. perp & inter

6. perp & inter

7. inter

8. inter

9. inter

10. inter

11. perp & inter

12. parallel

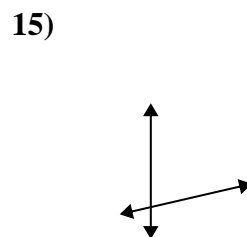
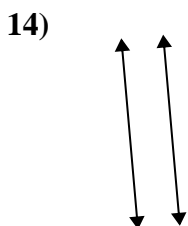
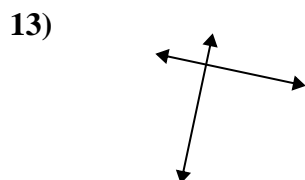
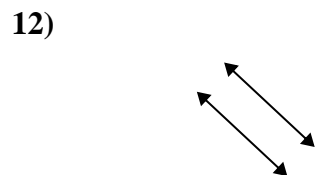
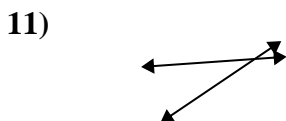
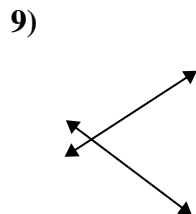
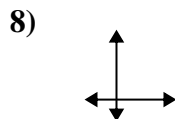
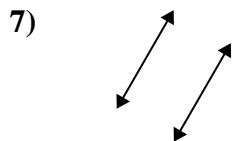
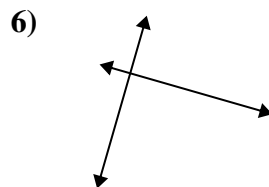
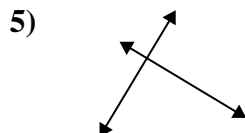
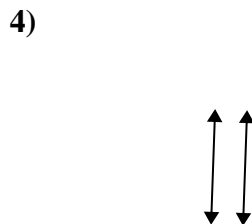
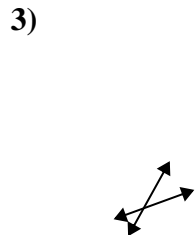
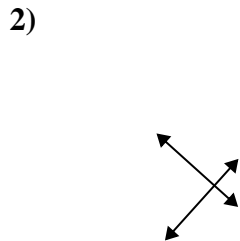
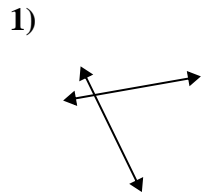
13. parallel

14. parallel

15. parallel



Definisci "parallele", "perp"(perpendicolare) o "inter"(intersezione) per descrivere le linee.



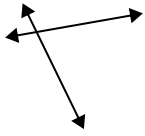
Risposte

1. _____
2. _____
3. _____
4. _____
5. _____
6. _____
7. _____
8. _____
9. _____
10. _____
11. _____
12. _____
13. _____
14. _____
15. _____

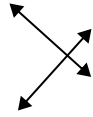


Definisci "parallele", "perp"(perpendicolare) o "inter"(intersezione) per descrivere le linee.

1)



2)



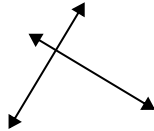
3)



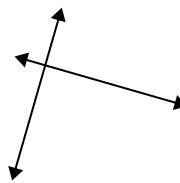
4)



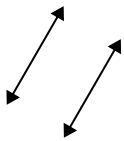
5)



6)



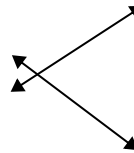
7)



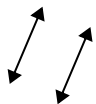
8)



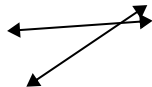
9)



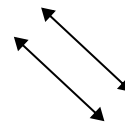
10)



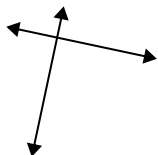
11)



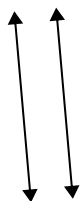
12)



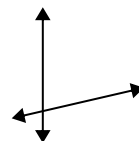
13)



14)



15)



Risposte

1. inter

2. perp & inter

3. inter

4. parallel

5. perp & inter

6. perp & inter

7. parallel

8. perp & inter

9. inter

10. parallel

11. inter

12. parallel

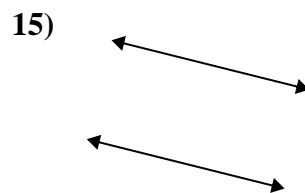
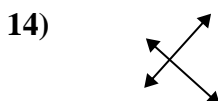
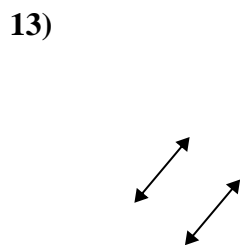
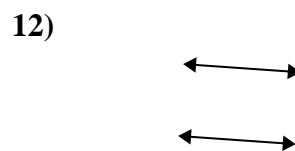
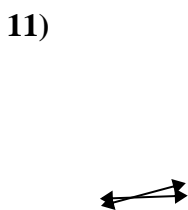
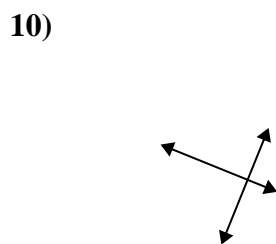
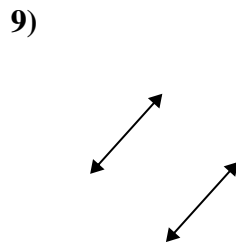
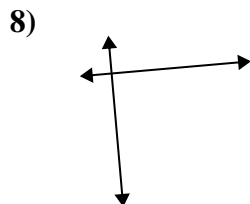
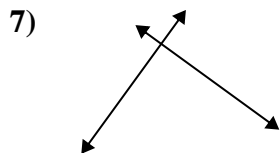
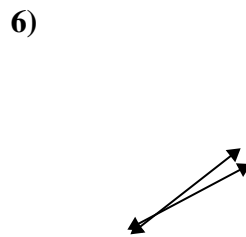
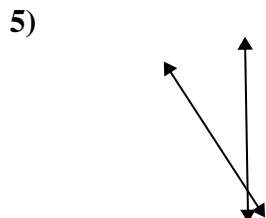
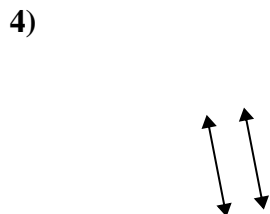
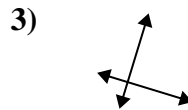
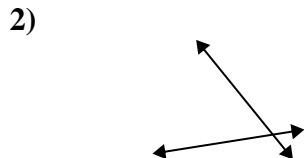
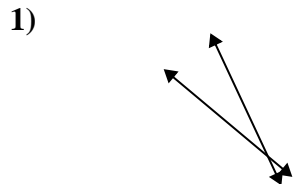
13. perp & inter

14. parallel

15. inter



Definisci "parallele", "perp"(perpendicolare) o "inter"(intersezione) per descrivere le linee.

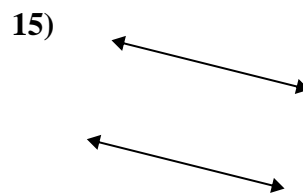
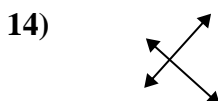
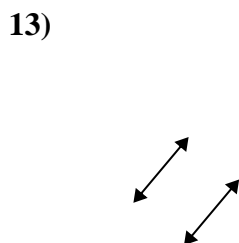
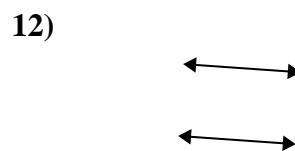
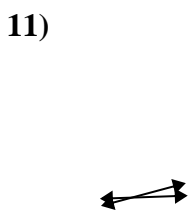
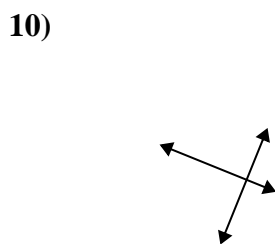
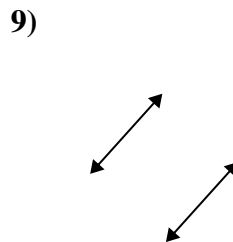
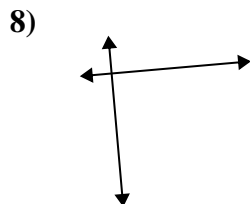
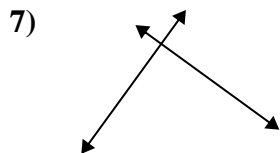
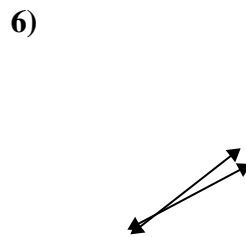
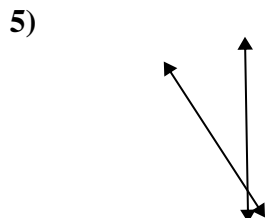
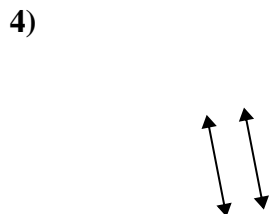
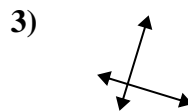
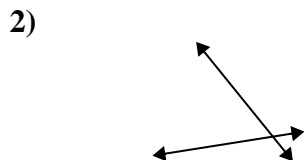
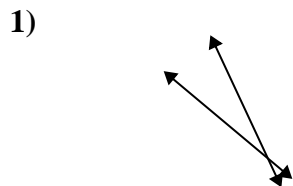


Risposte

1. _____
2. _____
3. _____
4. _____
5. _____
6. _____
7. _____
8. _____
9. _____
10. _____
11. _____
12. _____
13. _____
14. _____
15. _____



Definisci "parallele", "perp"(perpendicolare) o "inter"(intersezione) per descrivere le linee.



Risposte

1. inter

2. inter

3. perp & inter

4. parallel

5. inter

6. inter

7. perp & inter

8. perp & inter

9. parallel

10. perp & inter

11. inter

12. parallel

13. parallel

14. perp & inter

15. parallel