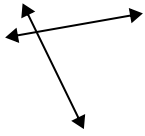


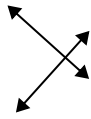


Definisci "parallele", "perp"(perpendicolare) o "inter"(intersezione) per descrivere le linee.

1)



2)



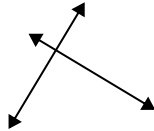
3)



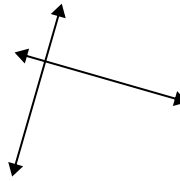
4)



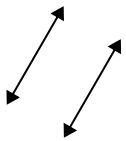
5)



6)



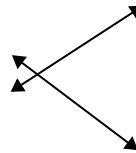
7)



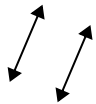
8)



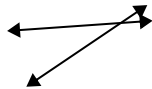
9)



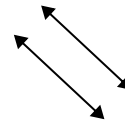
10)



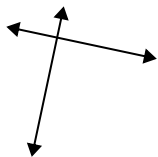
11)



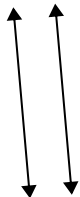
12)



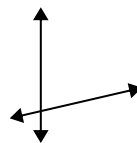
13)



14)



15)



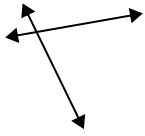
Risposte

1. _____
2. _____
3. _____
4. _____
5. _____
6. _____
7. _____
8. _____
9. _____
10. _____
11. _____
12. _____
13. _____
14. _____
15. _____

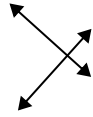


Definisci "parallele", "perp"(perpendicolare) o "inter"(intersezione) per descrivere le linee.

1)



2)



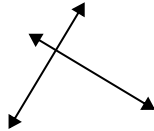
3)



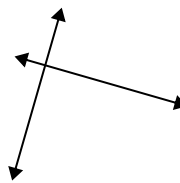
4)



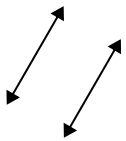
5)



6)



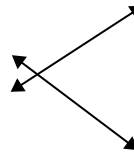
7)



8)



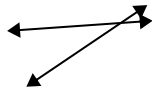
9)



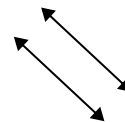
10)



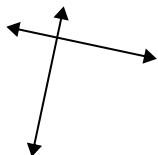
11)



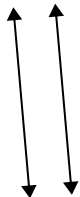
12)



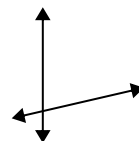
13)



14)



15)



Risposte

1. inter

2. perp & inter

3. inter

4. parallel

5. perp & inter

6. perp & inter

7. parallel

8. perp & inter

9. inter

10. parallel

11. inter

12. parallel

13. perp & inter

14. parallel

15. inter