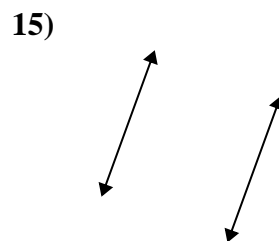
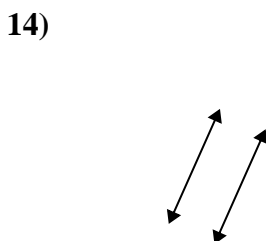
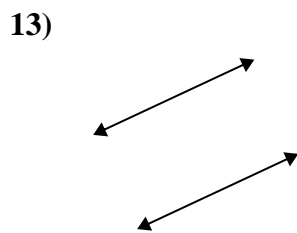
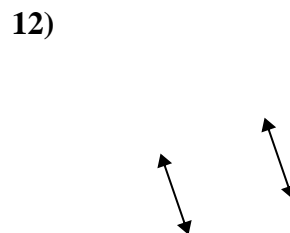
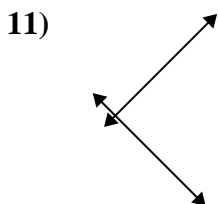
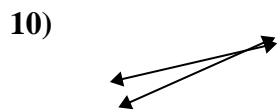
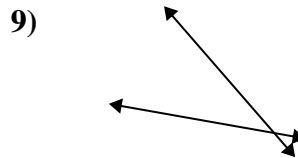
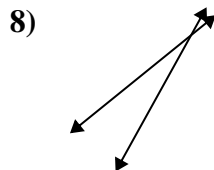
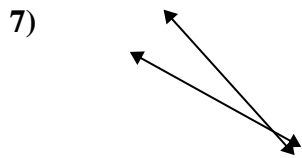
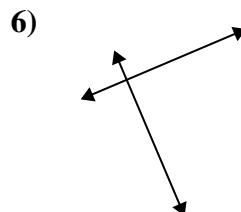
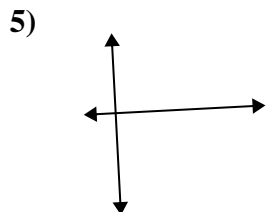
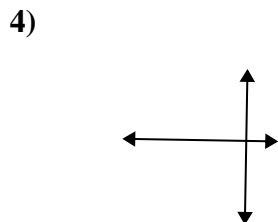
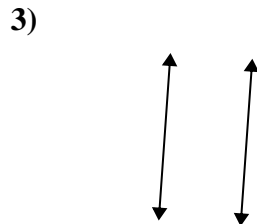
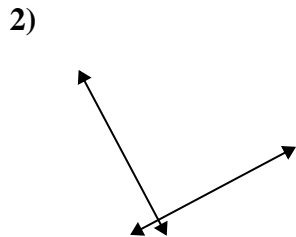
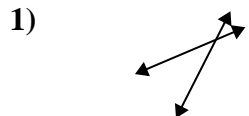




Definisci "parallele", "perp"(perpendicolare) o "inter"(intersezione) per descrivere le linee.

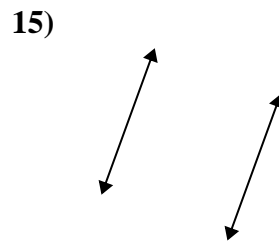
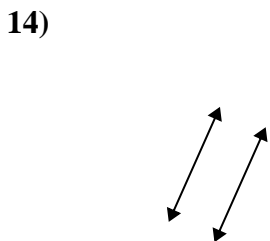
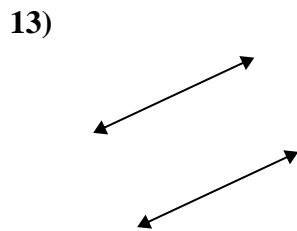
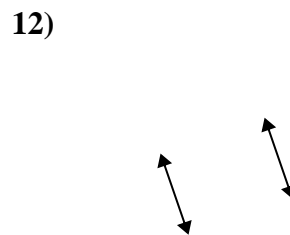
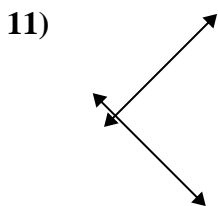
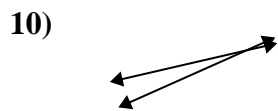
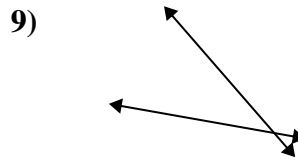
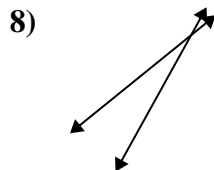
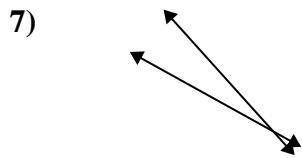
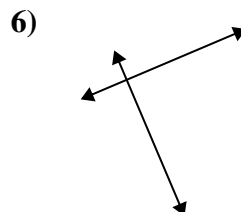
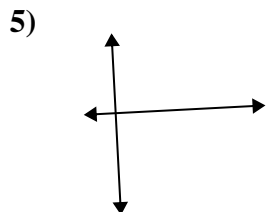
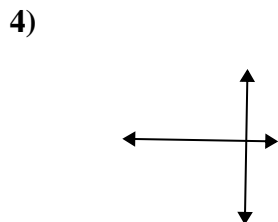
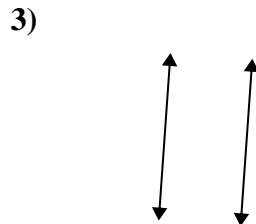
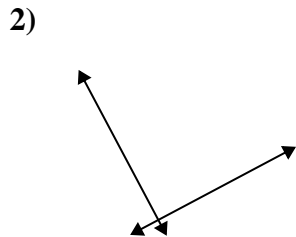
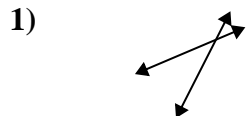


Risposte

1. _____
2. _____
3. _____
4. _____
5. _____
6. _____
7. _____
8. _____
9. _____
10. _____
11. _____
12. _____
13. _____
14. _____
15. _____



Definisci "parallele", "perp"(perpendicolare) o "inter"(intersezione) per descrivere le linee.



Risposte

1. inter

2. perp & inter

3. parallel

4. perp & inter

5. perp & inter

6. perp & inter

7. inter

8. inter

9. inter

10. inter

11. perp & inter

12. parallel

13. parallel

14. parallel

15. parallel