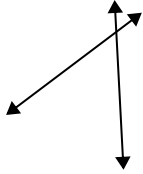


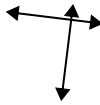


Definisci "parallele", "perp"(perpendicolare) o "inter"(intersezione) per descrivere le linee.

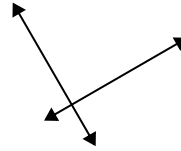
1)



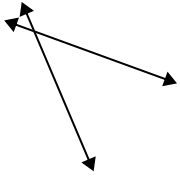
2)



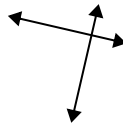
3)



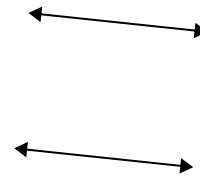
4)



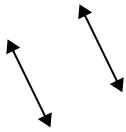
5)




6)



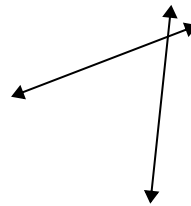
7)



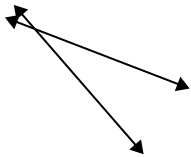
8)



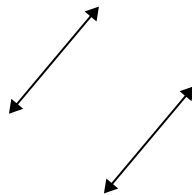
9)



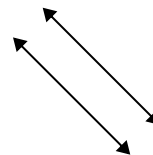
10)



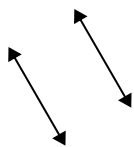
11)



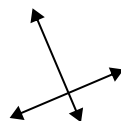
12)



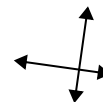
13)



14)



15)

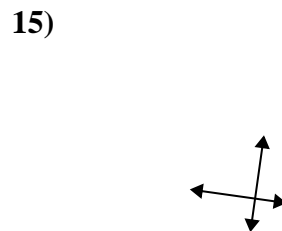
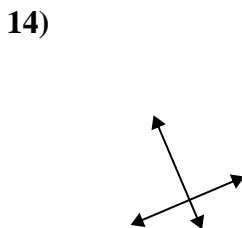
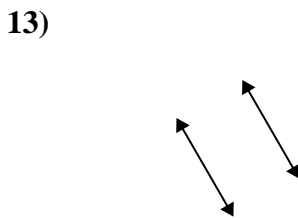
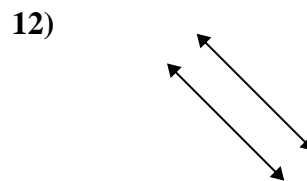
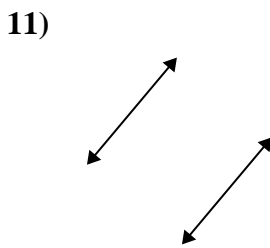
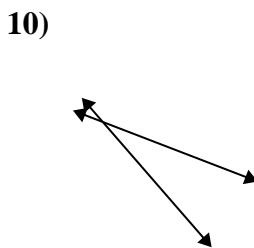
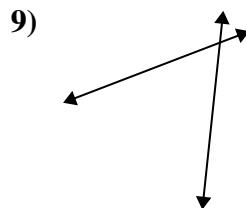
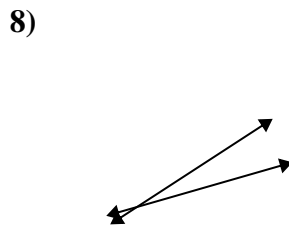
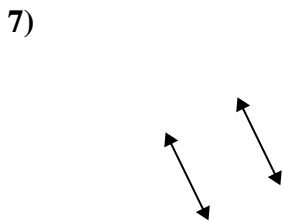
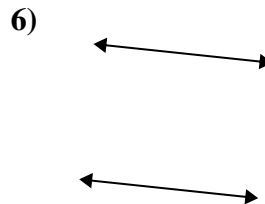
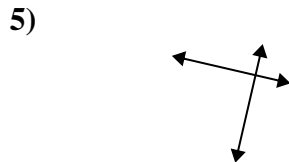
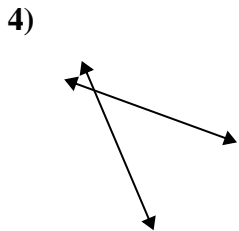
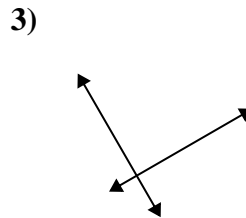
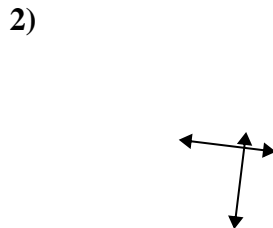
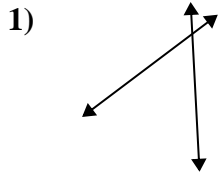


Risposte

1. \_\_\_\_\_
2. \_\_\_\_\_
3. \_\_\_\_\_
4. \_\_\_\_\_
5. \_\_\_\_\_
6. \_\_\_\_\_
7. \_\_\_\_\_
8. \_\_\_\_\_
9. \_\_\_\_\_
10. \_\_\_\_\_
11. \_\_\_\_\_
12. \_\_\_\_\_
13. \_\_\_\_\_
14. \_\_\_\_\_
15. \_\_\_\_\_



Definisci "parallele", "perp"(perpendicolare) o "inter"(intersezione) per descrivere le linee.



Risposte

1. inter

2. perp & inter

3. perp & inter

4. inter

5. perp & inter

6. parallel

7. parallel

8. inter

9. inter

10. inter

11. parallel

12. parallel

13. parallel

14. perp & inter

15. perp & inter