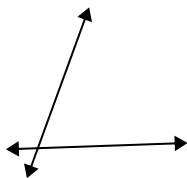


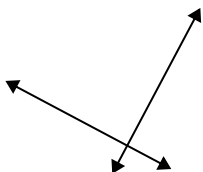


Definisci "parallele", "perp"(perpendicolare) o "inter"(intersezione) per descrivere le linee.

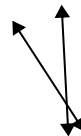
1)



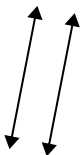
2)



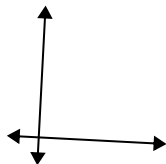
3)



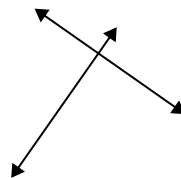
4)



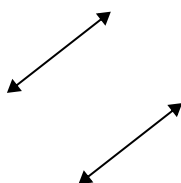
5)



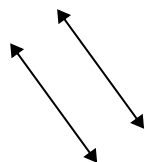
6)



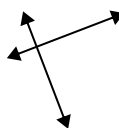
7)



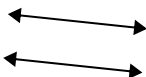
8)



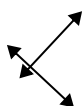
9)



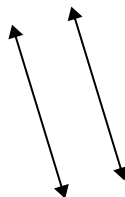
10)



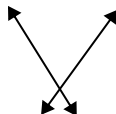
11)



12)



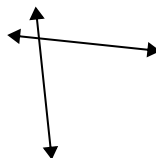
13)



14)



15)

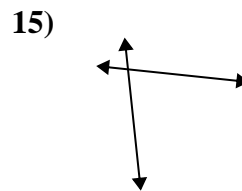
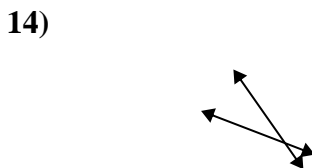
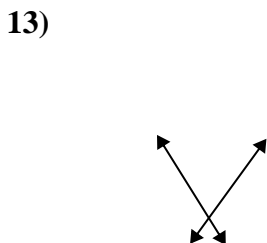
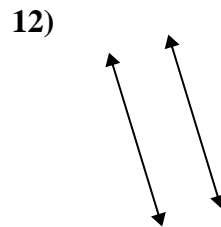
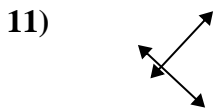
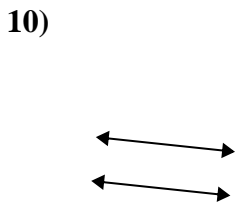
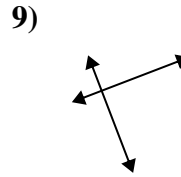
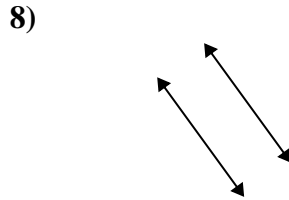
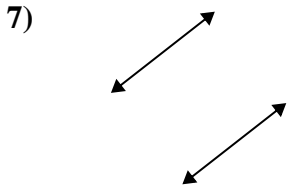
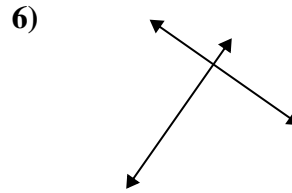
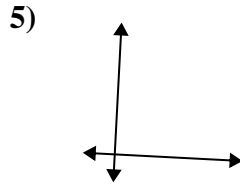
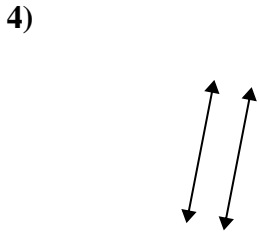
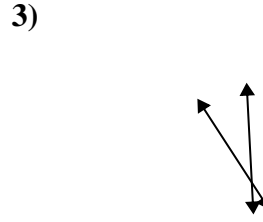
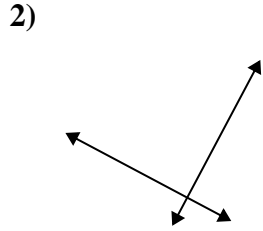
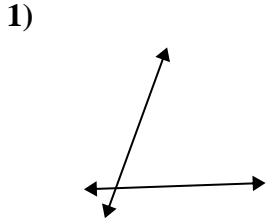


Risposte

1. _____
2. _____
3. _____
4. _____
5. _____
6. _____
7. _____
8. _____
9. _____
10. _____
11. _____
12. _____
13. _____
14. _____
15. _____



Definisci "parallele", "perp"(perpendicolare) o "inter"(intersezione) per descrivere le linee.



Risposte

1. inter

2. perp & inter

3. inter

4. parallel

5. perp & inter

6. perp & inter

7. parallel

8. parallel

9. perp & inter

10. parallel

11. perp & inter

12. parallel

13. inter

14. inter

15. inter