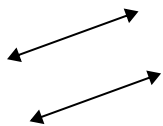


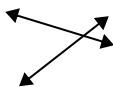


Definisci "parallele", "perp"(perpendicolare) o "inter"(intersezione) per descrivere le linee.

1)



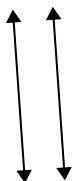
2)



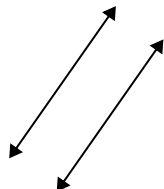
3)



4)



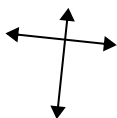
5)



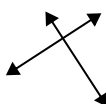
6)



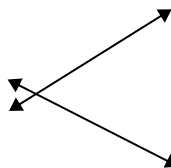
7)



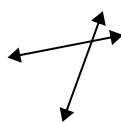
8)



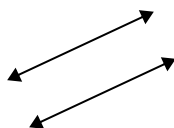
9)



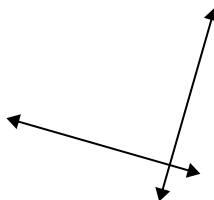
10)



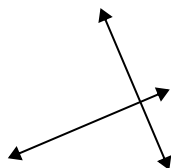
11)



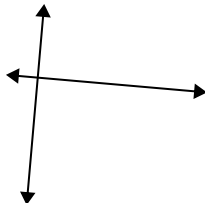
12)



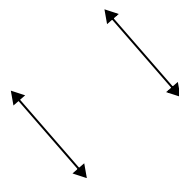
13)



14)



15)



Risposte

1. _____

2. _____

3. _____

4. _____

5. _____

6. _____

7. _____

8. _____

9. _____

10. _____

11. _____

12. _____

13. _____

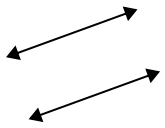
14. _____

15. _____

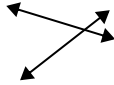


Definisci "parallele", "perp"(perpendicolare) o "inter"(intersezione) per descrivere le linee.

1)



2)



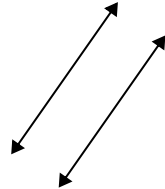
3)



4)



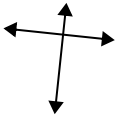
5)



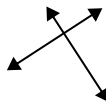
6)



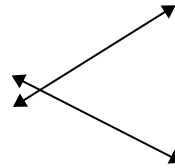
7)



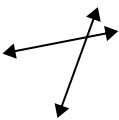
8)



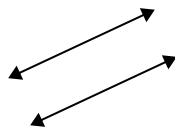
9)



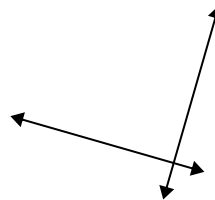
10)



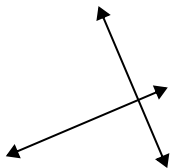
11)



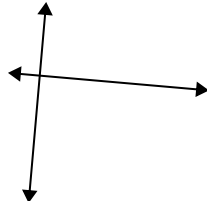
12)



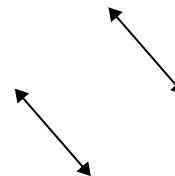
13)



14)



15)



Risposte

1. parallel

2. inter

3. inter

4. parallel

5. parallel

6. inter

7. perp & inter

8. perp & inter

9. inter

10. inter

11. parallel

12. perp & inter

13. perp & inter

14. perp & inter

15. parallel