

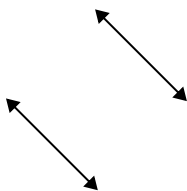


Definisci "parallele", "perp"(perpendicolare) o "inter"(intersezione) per descrivere le linee.

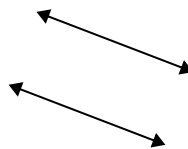
1)



2)



3)



1. _____

2. _____

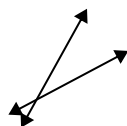
3. _____

4. _____

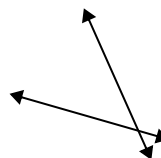
4)



5)



6)



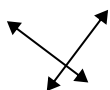
5. _____

6. _____

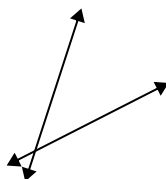
7. _____

8. _____

7)



8)



9)



9. _____

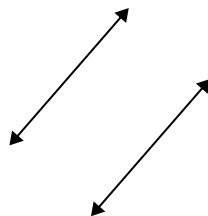
10. _____

11. _____

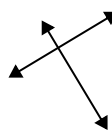
10)



11)



12)



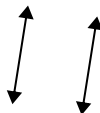
12. _____

13. _____

14. _____

15. _____

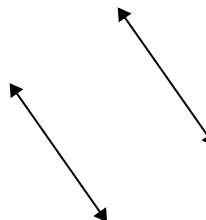
13)



14)

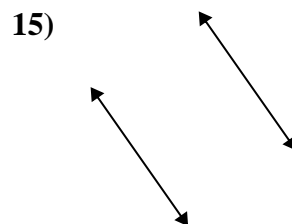
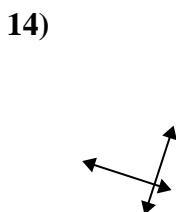
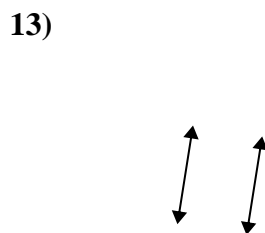
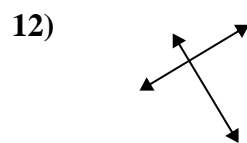
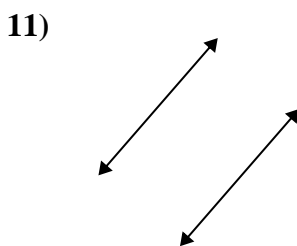
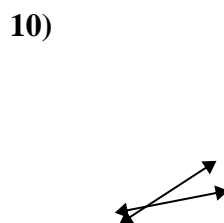
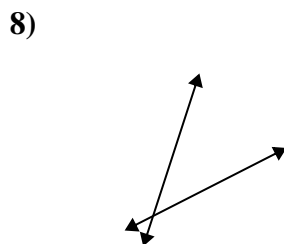
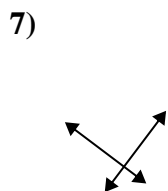
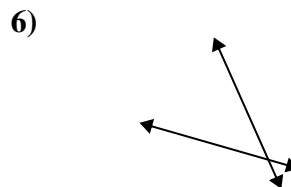
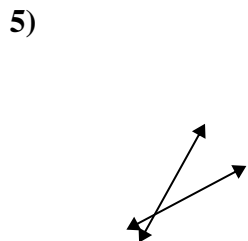
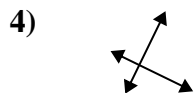
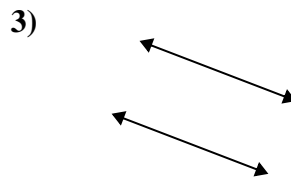
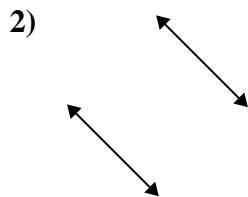
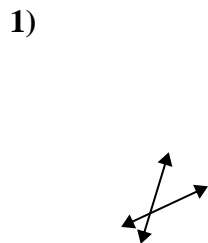


15)





Definisci "parallele", "perp"(perpendicolare) o "inter"(intersezione) per descrivere le linee.



Risposte

1. inter

2. parallel

3. parallel

4. perp & inter

5. inter

6. inter

7. perp & inter

8. inter

9. perp & inter

10. inter

11. parallel

12. perp & inter

13. parallel

14. perp & inter

15. parallel